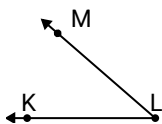




Solve each problem.

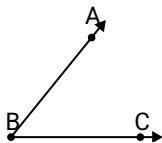
**Answers**

1)

Which choice best represents  $\angle KLM$ ?

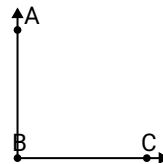
- A.  $110^\circ$
- B.  $41^\circ$
- C.  $0^\circ$
- D.  $136^\circ$

2)

Which choice best represents  $\angle ABC$ ?

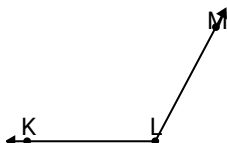
- A.  $88^\circ$
- B.  $133^\circ$
- C.  $51^\circ$
- D.  $158^\circ$

3)

Which choice best represents  $\angle ABC$ ?

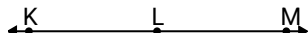
- A.  $139^\circ$
- B.  $167^\circ$
- C.  $90^\circ$
- D.  $0^\circ$

4)

Which choice best represents  $\angle KLM$ ?

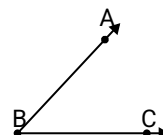
- A.  $47^\circ$
- B.  $166^\circ$
- C.  $96^\circ$
- D.  $118^\circ$

5)

Which choice best represents  $\angle KLM$ ?

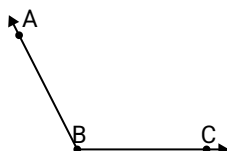
- A.  $107^\circ$
- B.  $180^\circ$
- C.  $73^\circ$
- D.  $42^\circ$

6)

Which choice best represents  $\angle ABC$ ?

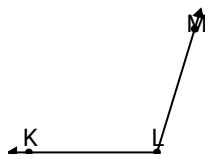
- A.  $47^\circ$
- B.  $167^\circ$
- C.  $8^\circ$
- D.  $70^\circ$

7)

Which choice best represents  $\angle ABC$ ?

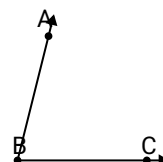
- A.  $117^\circ$
- B.  $87^\circ$
- C.  $1^\circ$
- D.  $176^\circ$

8)

Which choice best represents  $\angle KLM$ ?

- A.  $150^\circ$
- B.  $68^\circ$
- C.  $107^\circ$
- D.  $36^\circ$

9)

Which choice best represents  $\angle ABC$ ?

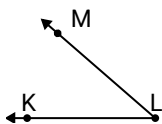
- A.  $6^\circ$
- B.  $76^\circ$
- C.  $34^\circ$
- D.  $121^\circ$

1. \_\_\_\_\_
2. \_\_\_\_\_
3. \_\_\_\_\_
4. \_\_\_\_\_
5. \_\_\_\_\_
6. \_\_\_\_\_
7. \_\_\_\_\_
8. \_\_\_\_\_
9. \_\_\_\_\_



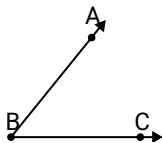
Solve each problem.

1)

Which choice best represents  $\angle KLM$ ?

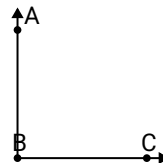
- A.  $110^\circ$
- B.  $41^\circ$
- C.  $0^\circ$
- D.  $136^\circ$

2)

Which choice best represents  $\angle ABC$ ?

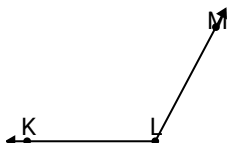
- A.  $88^\circ$
- B.  $133^\circ$
- C.  $51^\circ$
- D.  $158^\circ$

3)

Which choice best represents  $\angle ABC$ ?

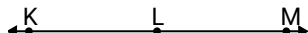
- A.  $139^\circ$
- B.  $167^\circ$
- C.  $90^\circ$
- D.  $0^\circ$

4)

Which choice best represents  $\angle KLM$ ?

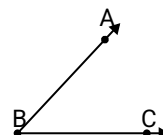
- A.  $47^\circ$
- B.  $166^\circ$
- C.  $96^\circ$
- D.  $118^\circ$

5)

Which choice best represents  $\angle KLM$ ?

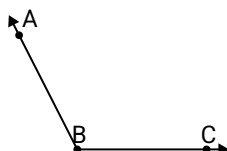
- A.  $107^\circ$
- B.  $180^\circ$
- C.  $73^\circ$
- D.  $42^\circ$

6)

Which choice best represents  $\angle ABC$ ?

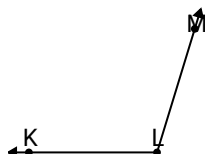
- A.  $47^\circ$
- B.  $167^\circ$
- C.  $8^\circ$
- D.  $70^\circ$

7)

Which choice best represents  $\angle ABC$ ?

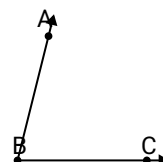
- A.  $117^\circ$
- B.  $87^\circ$
- C.  $1^\circ$
- D.  $176^\circ$

8)

Which choice best represents  $\angle KLM$ ?

- A.  $150^\circ$
- B.  $68^\circ$
- C.  $107^\circ$
- D.  $36^\circ$

9)

Which choice best represents  $\angle ABC$ ?

- A.  $6^\circ$
- B.  $76^\circ$
- C.  $34^\circ$
- D.  $121^\circ$

**Answers**

- 1. **B**
- 2. **C**
- 3. **C**
- 4. **D**
- 5. **B**
- 6. **A**
- 7. **A**
- 8. **C**
- 9. **B**