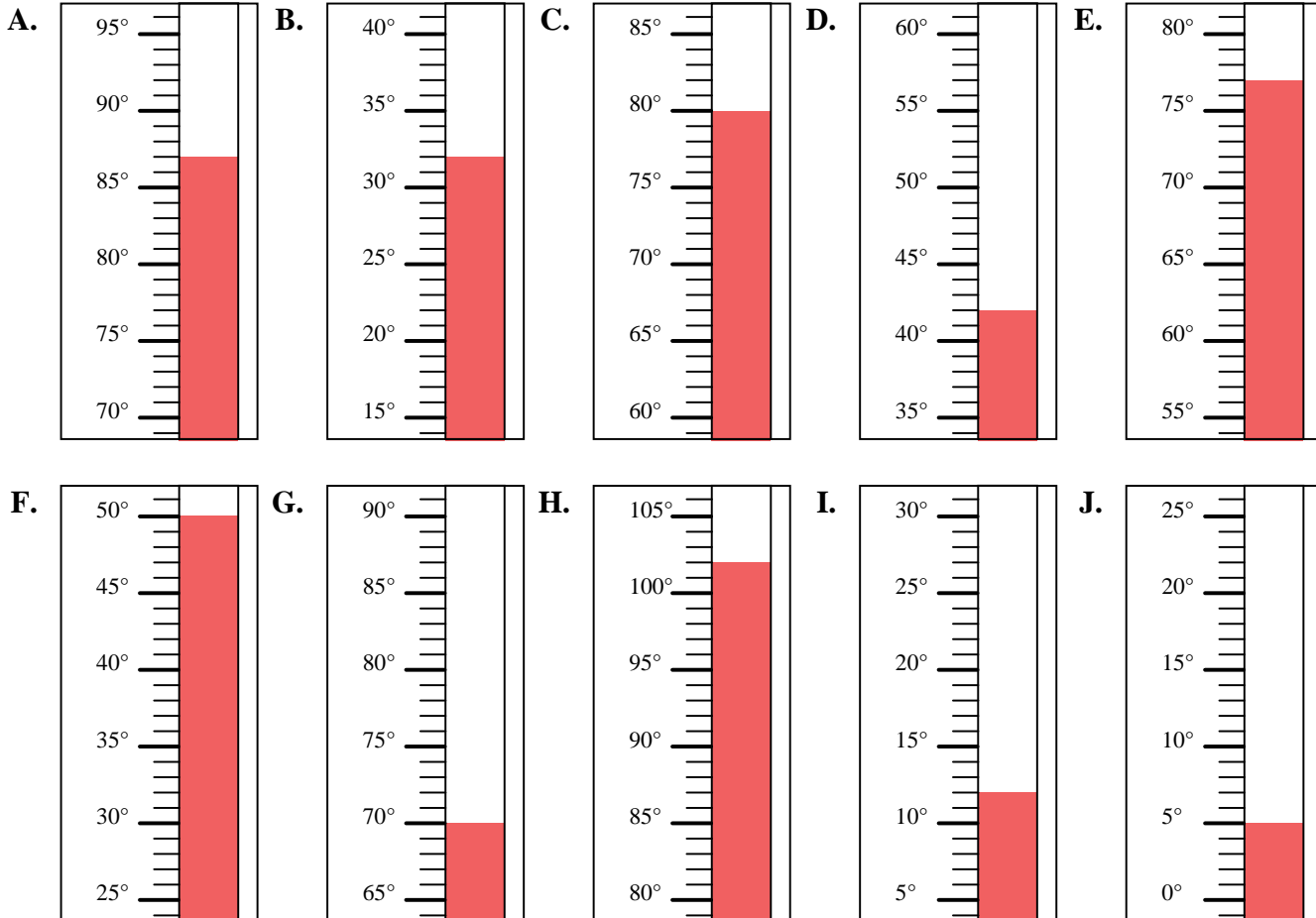


**Determine which letter best answers each question.****Answers**

- 1) Which thermometer best represents the temperature 70° ?
- 2) Which thermometer best represents the temperature 42° ?
- 3) Which thermometer best represents the temperature 102° ?
- 4) Which thermometer best represents the temperature 12° ?
- 5) Which thermometer best represents the temperature 5° ?
- 6) Which thermometer best represents the temperature 50° ?
- 7) Which thermometer best represents the temperature 87° ?
- 8) Which thermometer best represents the temperature 32° ?
- 9) Which thermometer best represents the temperature 77° ?
- 10) Which thermometer best represents the temperature 80° ?

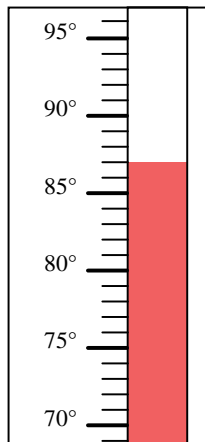
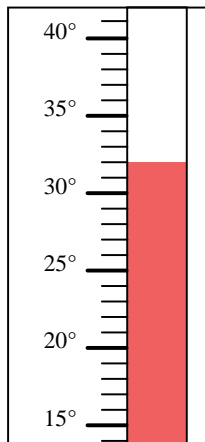
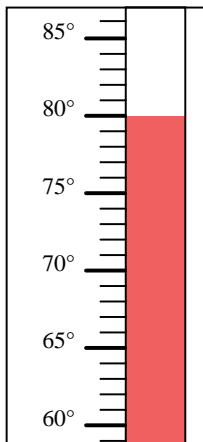
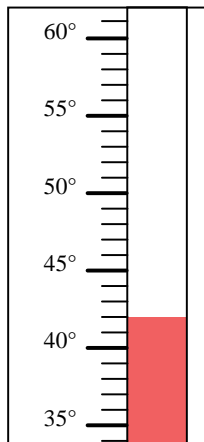
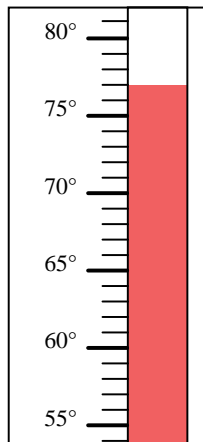
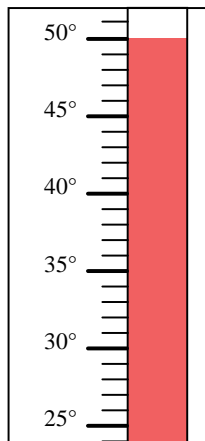
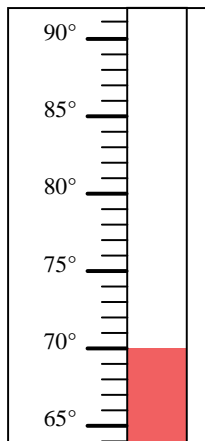
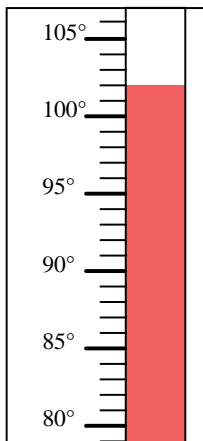
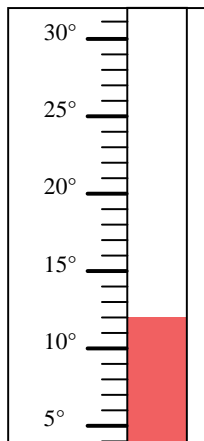
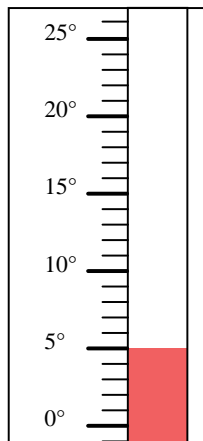
1. _____
2. _____
3. _____
4. _____
5. _____
6. _____
7. _____
8. _____
9. _____
10. _____





Determine which letter best answers each question.

- 1) Which thermometer best represents the temperature 70° ?
- 2) Which thermometer best represents the temperature 42° ?
- 3) Which thermometer best represents the temperature 102° ?
- 4) Which thermometer best represents the temperature 12° ?
- 5) Which thermometer best represents the temperature 5° ?
- 6) Which thermometer best represents the temperature 50° ?
- 7) Which thermometer best represents the temperature 87° ?
- 8) Which thermometer best represents the temperature 32° ?
- 9) Which thermometer best represents the temperature 77° ?
- 10) Which thermometer best represents the temperature 80° ?

A.**B.****C.****D.****E.****F.****G.****H.****I.****J.****Answers**

1. **G**
2. **D**
3. **H**
4. **I**
5. **J**
6. **F**
7. **A**
8. **B**
9. **E**
10. **C**