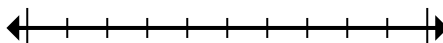




Mark the location (approximate) on the numberline and then solve.

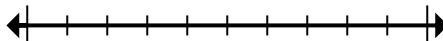
Answers

- 1) Round 653 to the nearest hundred.



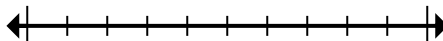
1. _____

- 2) Round 644,099 to the nearest thousand.



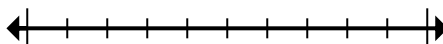
2. _____

- 3) Round 346,385 to the nearest hundred thousand.



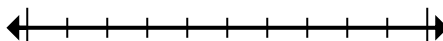
3. _____

- 4) Round 7,110 to the nearest thousand.



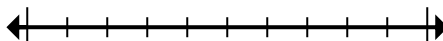
4. _____

- 5) Round 971,505 to the nearest hundred thousand.



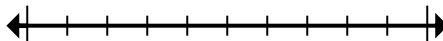
5. _____

- 6) Round 3,931 to the nearest thousand.



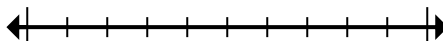
6. _____

- 7) Round 5,220,793 to the nearest hundred thousand.



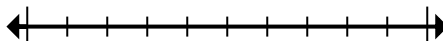
7. _____

- 8) Round 231 to the nearest hundred.



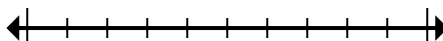
8. _____

- 9) Round 6,805,119 to the nearest hundred.



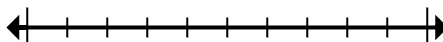
9. _____

- 10) Round 73,902 to the nearest ten thousand.



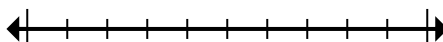
10. _____

- 11) Round 75,971 to the nearest ten thousand.



11. _____

- 12) Round 300,779 to the nearest ten thousand.



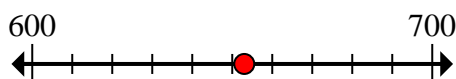
12. _____



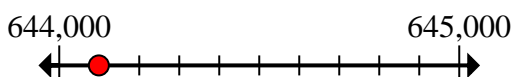
Mark the location (approximate) on the numberline and then solve.

Answers

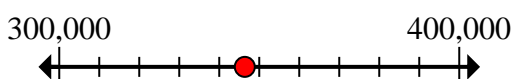
- 1) Round 653 to the nearest hundred.

1. 700

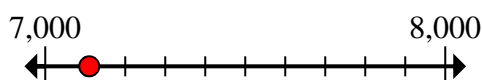
- 2) Round 644,099 to the nearest thousand.

2. 644,000

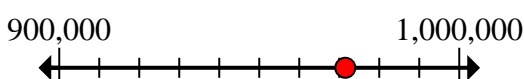
- 3) Round 346,385 to the nearest hundred thousand.

3. 300,000

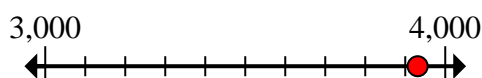
- 4) Round 7,110 to the nearest thousand.

4. 7,000

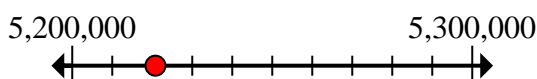
- 5) Round 971,505 to the nearest hundred thousand.

5. 1,000,000

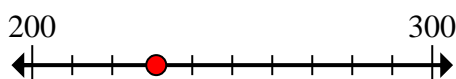
- 6) Round 3,931 to the nearest thousand.

6. 4,000

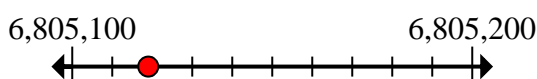
- 7) Round 5,220,793 to the nearest hundred thousand.

7. 5,200,000

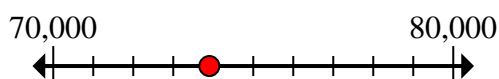
- 8) Round 231 to the nearest hundred.

8. 200

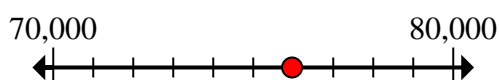
- 9) Round 6,805,119 to the nearest hundred.

9. 6,805,100

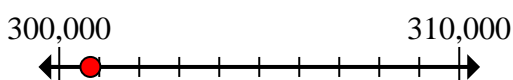
- 10) Round 73,902 to the nearest ten thousand.

10. 70,000

- 11) Round 75,971 to the nearest ten thousand.

11. 80,000

- 12) Round 300,779 to the nearest ten thousand.

12. 300,000

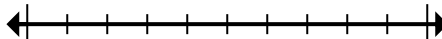


Mark the location (approximate) on the numberline and then solve.

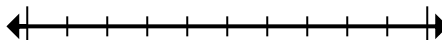
Answers

300,000	300,000	700	1,000,000
4,000	7,000	6,805,100	80,000
5,200,000	200	70,000	644,000

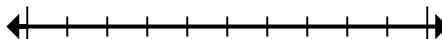
- 1) Round 653 to the nearest hundred.



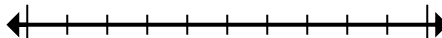
- 2) Round 644,099 to the nearest thousand.



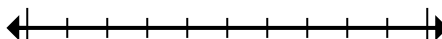
- 3) Round 346,385 to the nearest hundred thousand.



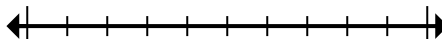
- 4) Round 7,110 to the nearest thousand.



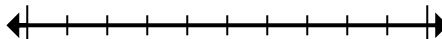
- 5) Round 971,505 to the nearest hundred thousand.



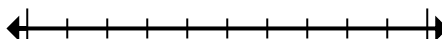
- 6) Round 3,931 to the nearest thousand.



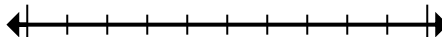
- 7) Round 5,220,793 to the nearest hundred thousand.



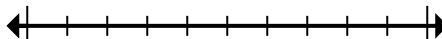
- 8) Round 231 to the nearest hundred.



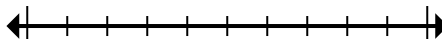
- 9) Round 6,805,119 to the nearest hundred.



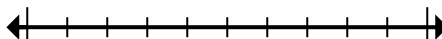
- 10) Round 73,902 to the nearest ten thousand.



- 11) Round 75,971 to the nearest ten thousand.



- 12) Round 300,779 to the nearest ten thousand.



1. _____
2. _____
3. _____
4. _____
5. _____
6. _____
7. _____
8. _____
9. _____
10. _____
11. _____
12. _____