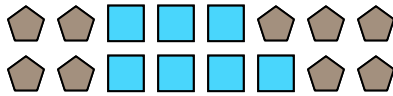


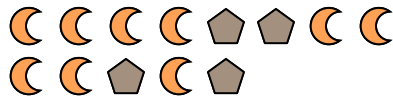
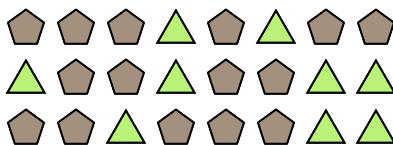

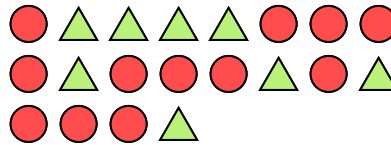


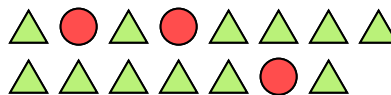





Solve each problem.

Answers**Ex)** What is the ratio of pentagons to squares?Ex. **9:7****2)** What is the ratio of hearts to pentagons?**4)** What is the ratio of moons to pentagons?**6)** What is the ratio of pentagons to moons?**8)** What is the ratio of pentagons to triangles?**10)** What is the ratio of pentagons to hearts?**1)** What is the ratio of circles to moons?**3)** What is the ratio of triangles to circles?**5)** What is the ratio of moons to pentagons?**7)** What is the ratio of hearts to moons?**9)** What is the ratio of circles to triangles?**11)** What is the ratio of stars to squares?

1. _____

2. _____

3. _____

4. _____

5. _____

6. _____

7. _____

8. _____

9. _____

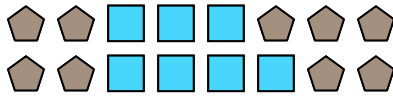
10. _____

11. _____




Solve each problem.


Ex) What is the ratio of pentagons to squares?



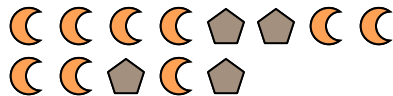
2) What is the ratio of hearts to pentagons?



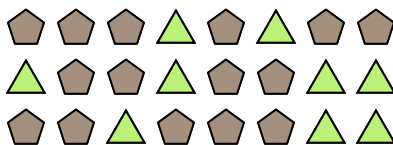
4) What is the ratio of moons to pentagons?




6) What is the ratio of pentagons to moons?



8) What is the ratio of pentagons to triangles?



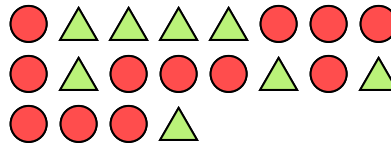
10) What is the ratio of pentagons to hearts?




1) What is the ratio of circles to moons?



3) What is the ratio of triangles to circles?



5) What is the ratio of moons to pentagons?




7) What is the ratio of hearts to moons?



9) What is the ratio of circles to triangles?



11) What is the ratio of stars to squares?

**Answers**Ex. 9:71. 8:22. 5:93. 8:124. 12:145. 6:156. 4:97. 10:38. 15:99. 3:1210. 10:711. 4:13