




Solve each problem.

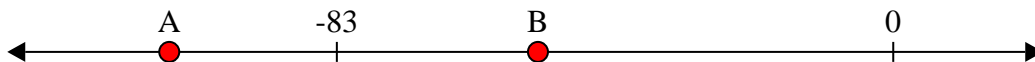
Answers

- 1) Which letter best shows -80?



1. _____


- 2) Which letter best shows -53?



2. _____

3. _____


- 3) Which letter best shows -14?



4. _____

5. _____


- 4) Which letter best shows -90?



6. _____

7. _____


- 5) Which letter best shows -88?



8. _____

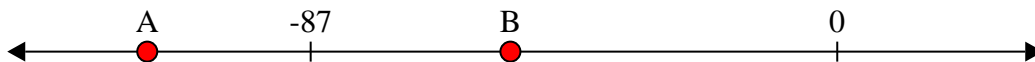
9. _____

- 6) Which letter best shows -11?




10. _____


- 7) Which letter best shows -114?




- 8) Which letter best shows -40?



- 9) Which letter best shows -100?



- 10) Which letter best shows -33?

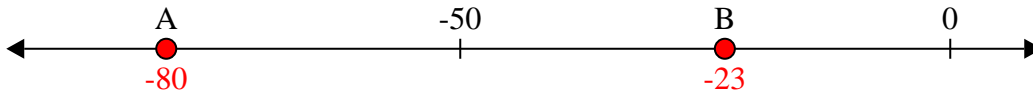




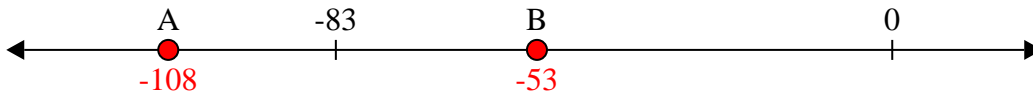
Solve each problem.

Answers

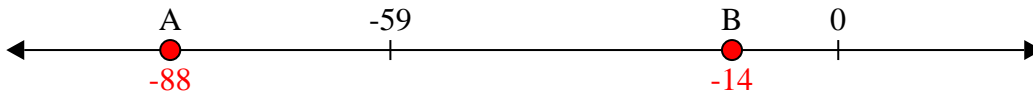
- 1) Which letter best shows -80?

1. **A**

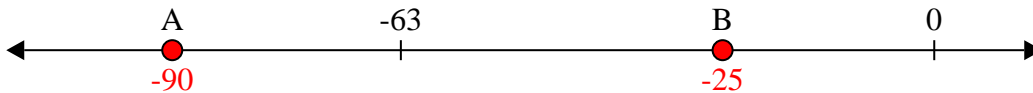
- 2) Which letter best shows -53?

2. **B**

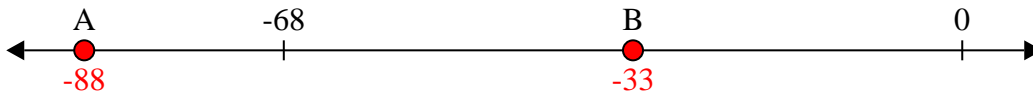
- 3) Which letter best shows -14?

3. **B**


- 4) Which letter best shows -90?

4. **A**

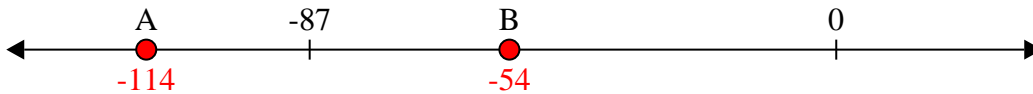
- 5) Which letter best shows -88?

5. **A**


- 6) Which letter best shows -11?

6. **B**


- 7) Which letter best shows -114?

7. **A**

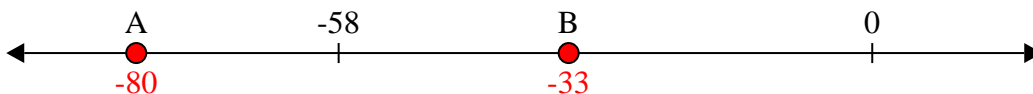
- 8) Which letter best shows -40?

8. **B**

- 9) Which letter best shows -100?

9. **A**

- 10) Which letter best shows -33?

10. **B**