




Solve each problem.

Answers

- 1) Which letter best shows -98?



1. _____

- 2) Which letter best shows -39?



2. _____

3. _____


- 3) Which letter best shows -20?



4. _____

5. _____

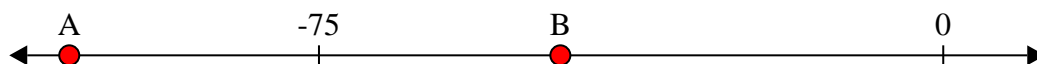
- 4) Which letter best shows -11?



6. _____

7. _____

- 5) Which letter best shows -105?



8. _____


9. _____

- 6) Which letter best shows -106?




10. _____


- 7) Which letter best shows -12?




- 8) Which letter best shows -111?



- 9) Which letter best shows -12?



- 10) Which letter best shows -28?

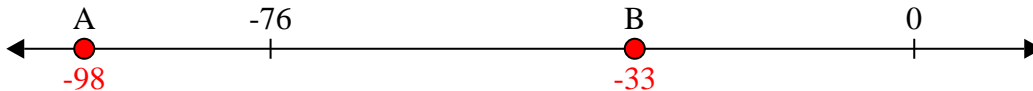




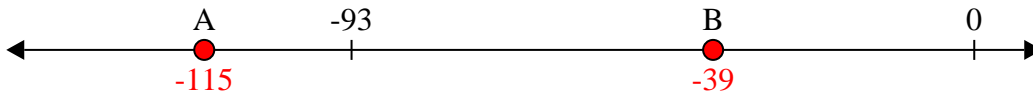
Solve each problem.

Answers

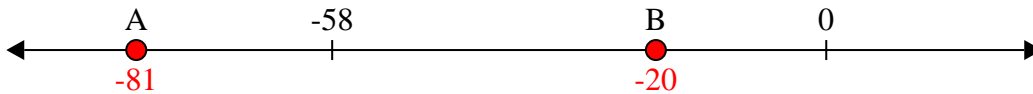
- 1) Which letter best shows -98?

1. **A**


- 2) Which letter best shows -39?

2. **B**3. **B**4. **B**

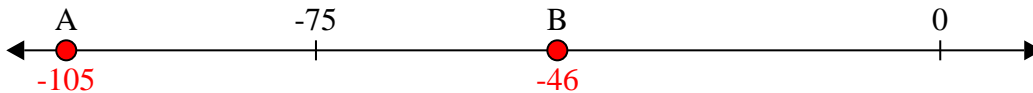
- 3) Which letter best shows -20?

5. **A**6. **A**

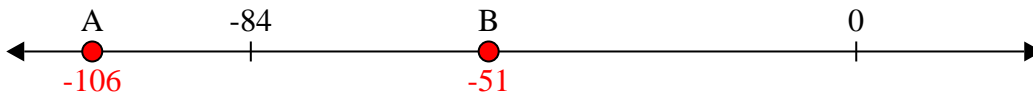
- 4) Which letter best shows -11?

7. **B**8. **A**


- 5) Which letter best shows -105?

9. **B**10. **B**


- 6) Which letter best shows -106?




- 7) Which letter best shows -12?



- 8) Which letter best shows -111?



- 9) Which letter best shows -12?



- 10) Which letter best shows -28?

