




Solve each problem.

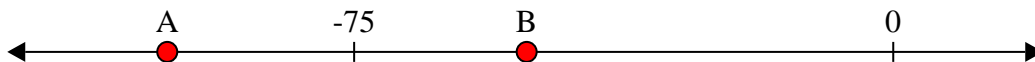
Answers

- 1) Which letter best shows -24?



1. _____


- 2) Which letter best shows -101?



2. _____

3. _____

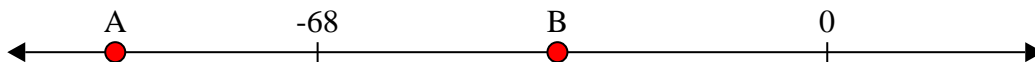
- 3) Which letter best shows -83?



4. _____

5. _____


- 4) Which letter best shows -95?



6. _____

7. _____


- 5) Which letter best shows -86?



8. _____

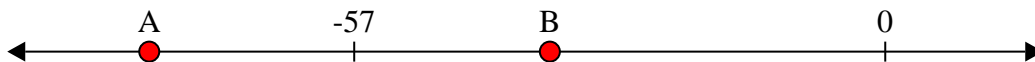
9. _____

- 6) Which letter best shows -112?




10. _____


- 7) Which letter best shows -79?



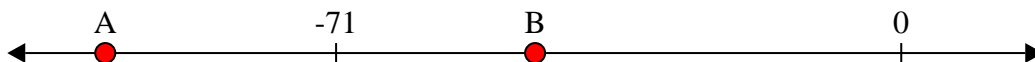
- 8) Which letter best shows -10?



- 9) Which letter best shows -27?



- 10) Which letter best shows -100?

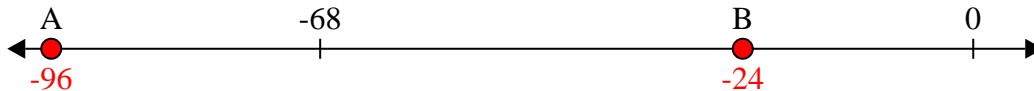




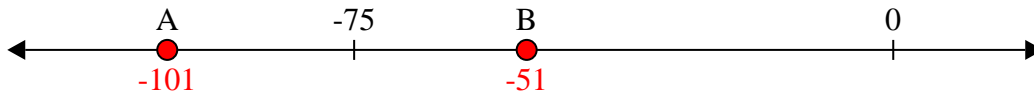
Solve each problem.

Answers

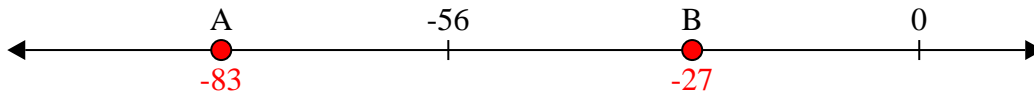
- 1) Which letter best shows -24?

1. **B**

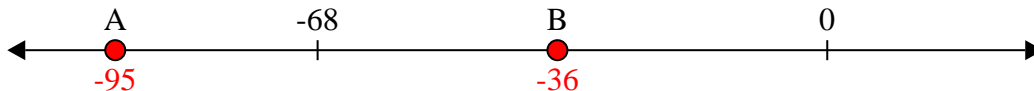
- 2) Which letter best shows -101?

2. **A**


- 3) Which letter best shows -83?

3. **A**


- 4) Which letter best shows -95?

4. **A**

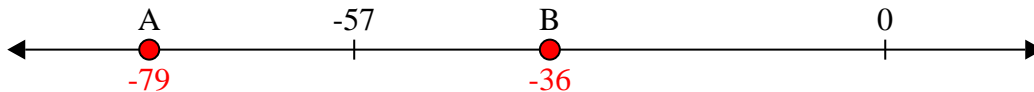
- 5) Which letter best shows -86?

5. **A**

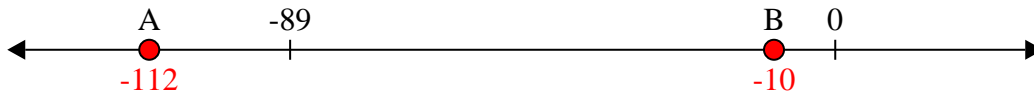
- 6) Which letter best shows -112?

6. **A**


- 7) Which letter best shows -79?

7. **A**

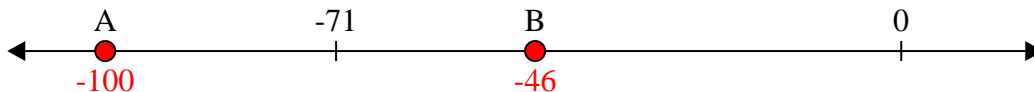
- 8) Which letter best shows -10?

8. **B**

- 9) Which letter best shows -27?

9. **B**

- 10) Which letter best shows -100?

10. **A**