




Solve each problem.


Answers

- 1) Which letter best shows -101?




1. _____

- 2) Which letter best shows -42?




2. _____

- 3) Which letter best shows -76?



3. _____

- 4) Which letter best shows -110?




4. _____

- 5) Which letter best shows -106?



5. _____

- 6) Which letter best shows -114?




6. _____

- 7) Which letter best shows -21?




7. _____

- 8) Which letter best shows -20?




8. _____

- 9) Which letter best shows -79?



9. _____

- 10) Which letter best shows -97?




10. _____



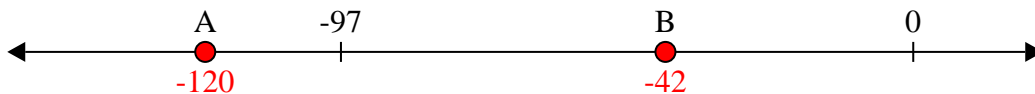
Solve each problem.

Answers

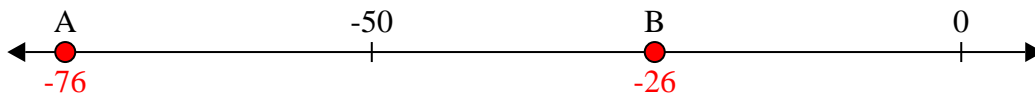
- 1) Which letter best shows -101?

1. **A**

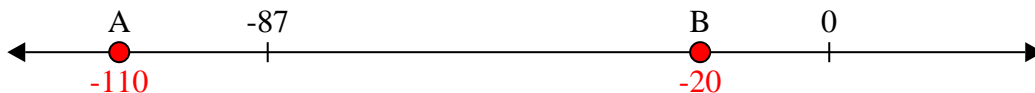
- 2) Which letter best shows -42?

2. **B**


- 3) Which letter best shows -76?

3. **A**


- 4) Which letter best shows -110?

4. **A**


- 5) Which letter best shows -106?

5. **A**


- 6) Which letter best shows -114?

6. **A**


- 7) Which letter best shows -21?

7. **B**

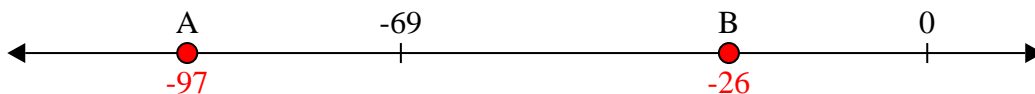
- 8) Which letter best shows -20?

8. **B**

- 9) Which letter best shows -79?

9. **A**

- 10) Which letter best shows -97?

10. **A**