





Solve each problem.

Answers

- 1) Oliver spent \$4.93 buying some new toys. He bought them using a twenty dollar bill. How much change should he get back?



- 2) At the fair Debby spent \$2.01 buying fair food. She gave the cashier a ten dollar bill. How much change should she get back?



- 3) At the book fair Henry spent \$6.64 buying books. He gave the cashier a twenty dollar bill. How much change should he get back?



1. _____
2. _____
3. _____




Solve each problem.

- 1) Oliver spent \$4.93 buying some new toys. He bought them using a twenty dollar bill. How much change should he get back?



- 2) At the fair Debby spent \$2.01 buying fair food. She gave the cashier a ten dollar bill. How much change should she get back?



- 3) At the book fair Henry spent \$6.64 buying books. He gave the cashier a twenty dollar bill. How much change should he get back?

**Answers**

1. **C**
2. **D**
3. **C**