



Measure the width and height of each block in inches and in centimeters.

Ex)



Answers

Ex. 0 1/2 0 1/2 1.3 1.3


1. _____

2. _____

3. _____

4. _____

1)



2)

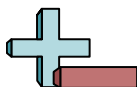


3)



4)





Measure the width and height of each block in inches and in centimeters.

Ex)



Answers

Ex. $0\frac{1}{2}$ $0\frac{1}{2}$ **1.3** **1.3**


1. **2** **1** **5.1** **2.5**

2. $3\frac{1}{2}$ $0\frac{1}{2}$ **8.9** **1.3**

3. **5** $0\frac{1}{2}$ **12.7** **1.3**

4. $4\frac{1}{2}$ **1** **11.4** **2.5**

1)



2)



3)



4)

