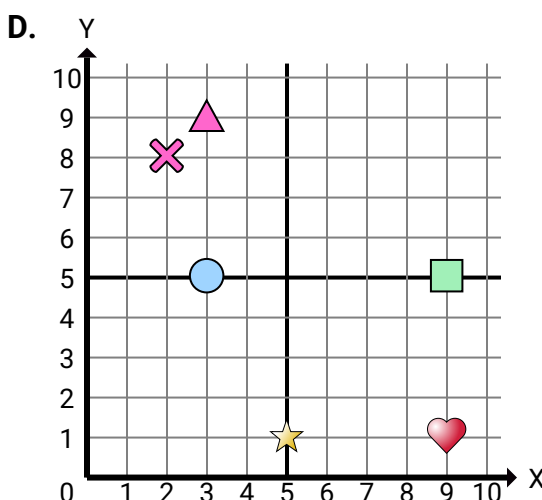
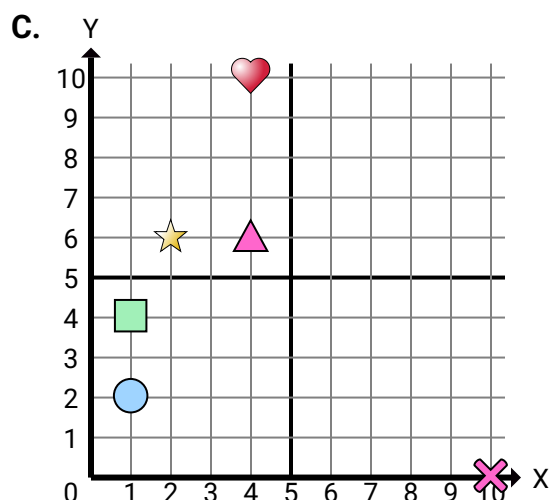
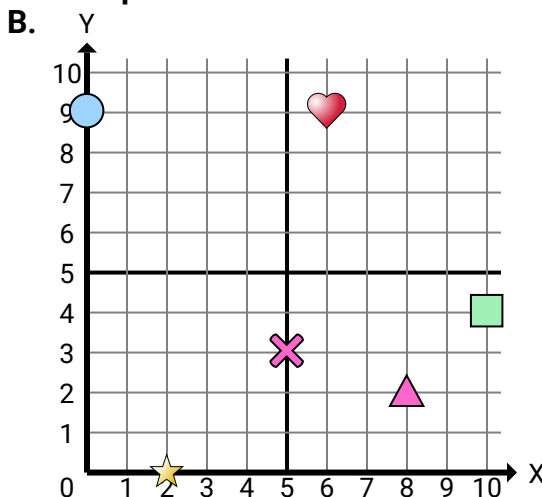
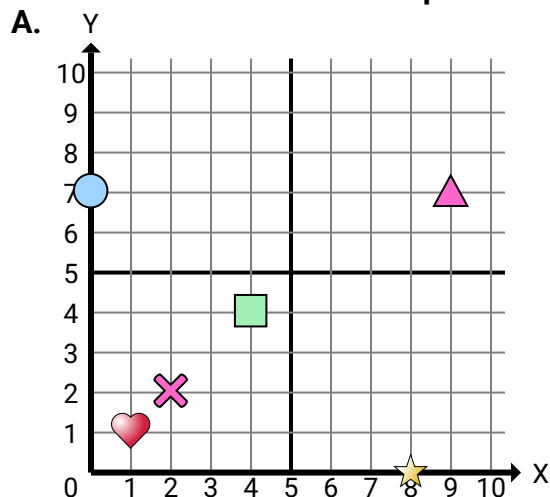




Determine which coordinate plane answers each question.

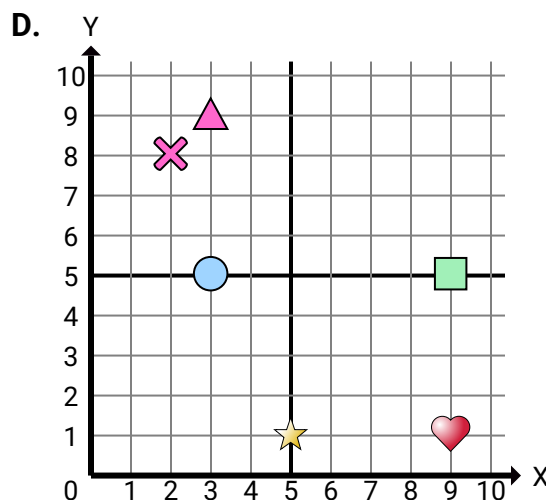
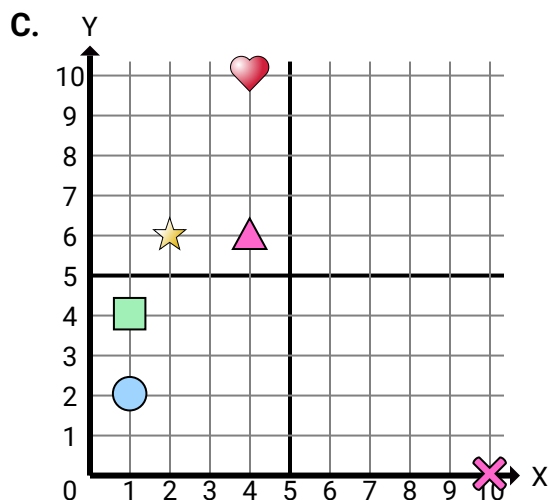
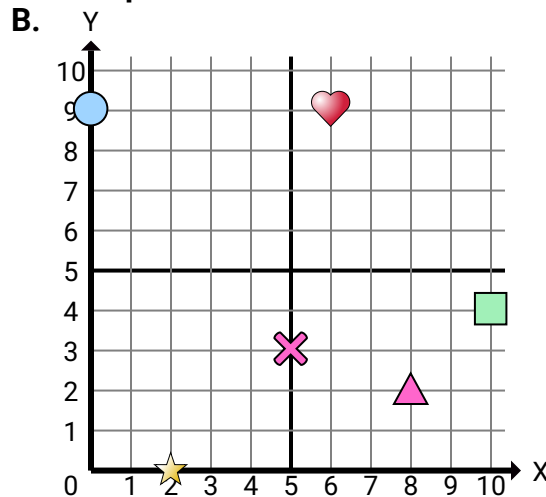
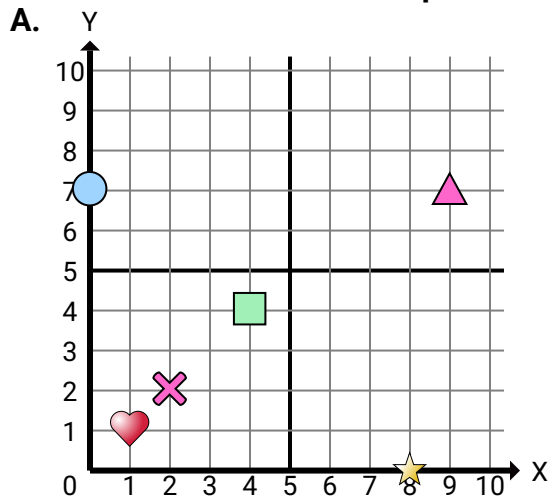
**Answers**

1. \_\_\_\_\_
2. \_\_\_\_\_
3. \_\_\_\_\_
4. \_\_\_\_\_
5. \_\_\_\_\_
6. \_\_\_\_\_
7. \_\_\_\_\_
8. \_\_\_\_\_
9. \_\_\_\_\_
10. \_\_\_\_\_
11. \_\_\_\_\_
12. \_\_\_\_\_
13. \_\_\_\_\_
14. \_\_\_\_\_
15. \_\_\_\_\_

- 1) Which coordinate plane has a shape at (4 , 10)?
- 2) Which coordinate plane has a shape at (2 , 8)?
- 3) Which coordinate plane has a shape at (2 , 2)?
- 4) Which coordinate plane has a shape at (8 , 2)?
- 5) Which coordinate plane has a shape at (9 , 1)?
- 6) Which coordinate plane has a shape at (1 , 1)?
- 7) Which coordinate plane has a shape at (9 , 7)?
- 8) Which coordinate plane has a shape at (1 , 2)?
- 9) Which coordinate plane has a shape at (3 , 9)?
- 10) Which coordinate plane has a shape at (8 , 0)?
- 11) Which coordinate plane has a shape at (5 , 3)?
- 12) Which coordinate plane has a shape at (2 , 6)?
- 13) Which coordinate plane has a shape at (6 , 9)?
- 14) Which coordinate plane has a shape at (1 , 4)?
- 15) Which coordinate plane has a shape at (2 , 0)?



Determine which coordinate plane answers each question.

**Answers**

1. **C**
2. **D**
3. **A**
4. **B**
5. **D**
6. **A**
7. **A**
8. **C**
9. **D**
10. **A**
11. **B**
12. **C**
13. **B**
14. **C**
15. **B**

- 1) Which coordinate plane has a shape at (4 , 10)?
- 2) Which coordinate plane has a shape at (2 , 8)?
- 3) Which coordinate plane has a shape at (2 , 2)?
- 4) Which coordinate plane has a shape at (8 , 2)?
- 5) Which coordinate plane has a shape at (9 , 1)?
- 6) Which coordinate plane has a shape at (1 , 1)?
- 7) Which coordinate plane has a shape at (9 , 7)?
- 8) Which coordinate plane has a shape at (1 , 2)?
- 9) Which coordinate plane has a shape at (3 , 9)?
- 10) Which coordinate plane has a shape at (8 , 0)?
- 11) Which coordinate plane has a shape at (5 , 3)?
- 12) Which coordinate plane has a shape at (2 , 6)?
- 13) Which coordinate plane has a shape at (6 , 9)?
- 14) Which coordinate plane has a shape at (1 , 4)?
- 15) Which coordinate plane has a shape at (2 , 0)?