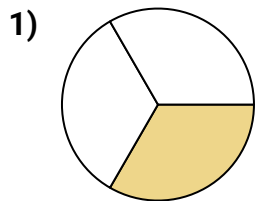
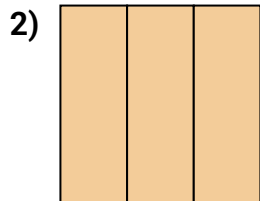




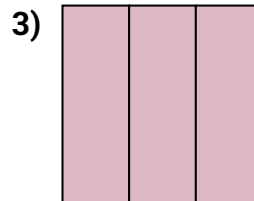
Determine which letter best describes the shaded portion.

Answers

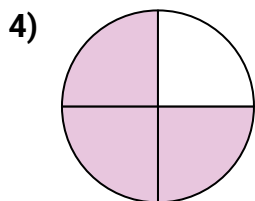
- A. one-half
B. one-third
C. two-fourths



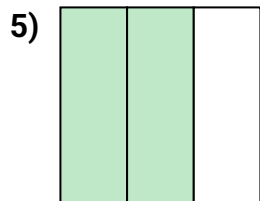
- A. three-fourths
B. three-thirds
C. one-quarter



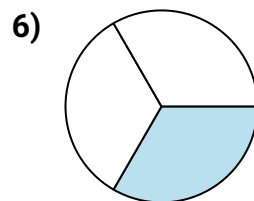
- A. three-thirds
B. one-half
C. three-quarters



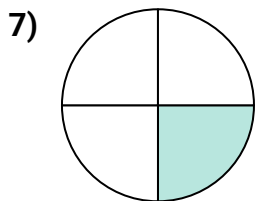
- A. three-quarters
B. four-fourths
C. two-halves



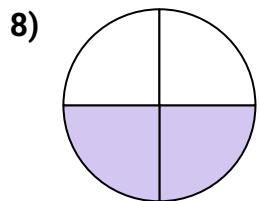
- A. two-thirds
B. three-fourths
C. one-fourth



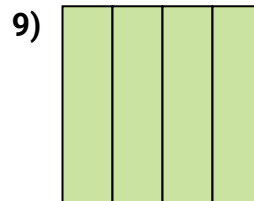
- A. one-third
B. four-fourths
C. three-quarters



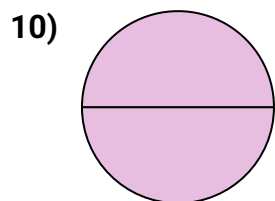
- A. one-half
B. one-quarter
C. two-halves



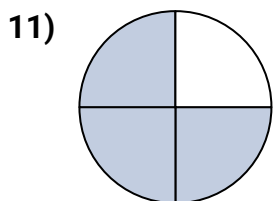
- A. one-half
B. four-fourths
C. two-fourths



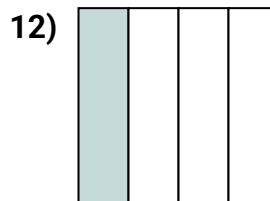
- A. two-halves
B. four-quarters
C. one-half



- A. three-quarters
B. two-halves
C. four-quarters



- A. two-halves
B. two-fourths
C. three-fourths



- A. three-fourths
B. two-halves
C. one-quarter

1. _____

2. _____

3. _____

4. _____

5. _____

6. _____

7. _____

8. _____

9. _____

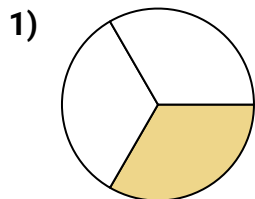
10. _____

11. _____

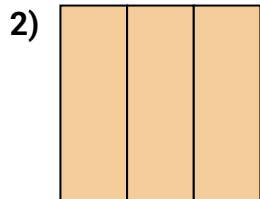
12. _____



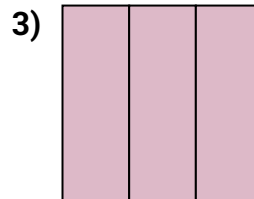
Determine which letter best describes the shaded portion.

Answers

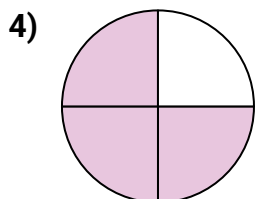
- A. one-half
B. one-third
C. two-fourths



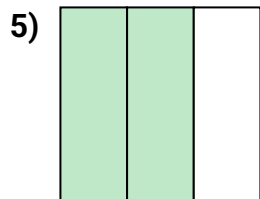
- A. three-fourths
B. three-thirds
C. one-quarter



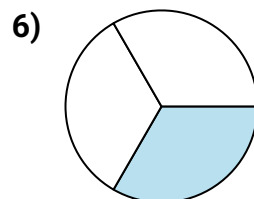
- A. three-thirds
B. one-half
C. three-quarters



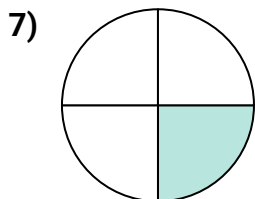
- A. three-quarters
B. four-fourths
C. two-halves



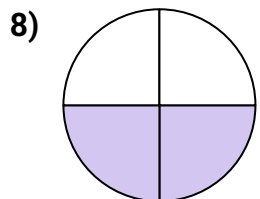
- A. two-thirds
B. three-fourths
C. one-fourth



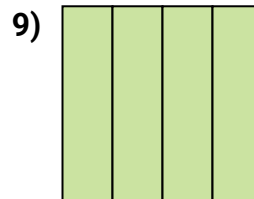
- A. one-third
B. four-fourths
C. three-quarters



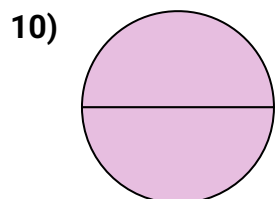
- A. one-half
B. one-quarter
C. two-halves



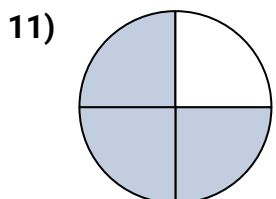
- A. one-half
B. four-fourths
C. two-fourths



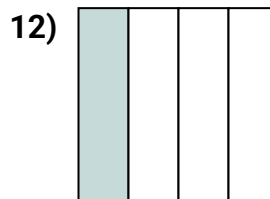
- A. two-halves
B. four-quarters
C. one-half



- A. three-quarters
B. two-halves
C. four-quarters



- A. two-halves
B. two-fourths
C. three-fourths



- A. three-fourths
B. two-halves
C. one-quarter

1. **B**2. **B**3. **A**4. **A**5. **A**6. **A**7. **B**8. **C**9. **B**10. **B**11. **C**12. **C**