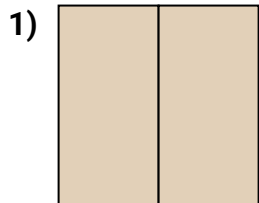
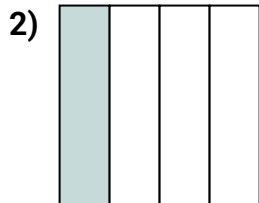




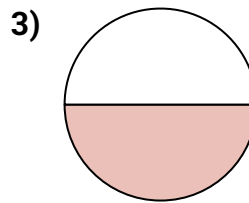
Determine which letter best describes the shaded portion.

Answers

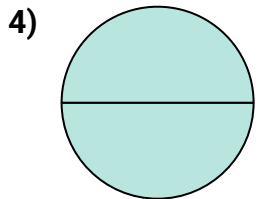
- A. two-fourths
B. two-halves
C. four-fourths



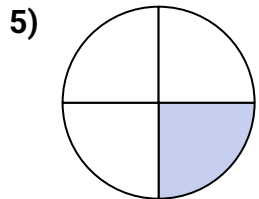
- A. four-quarters
B. two-halves
C. one-quarter



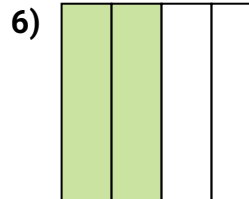
- A. two-fourths
B. one-half
C. one-quarter



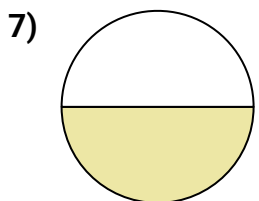
- A. two-halves
B. one-half
C. four-fourths



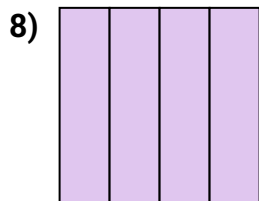
- A. two-quarters
B. one-fourth
C. two-halves



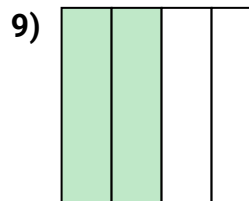
- A. one-fourth
B. two-fourths
C. three-quarters



- A. two-halves
B. three-quarters
C. one-half



- A. two-halves
B. three-fourths
C. four-fourths



- A. two-halves
B. four-fourths
C. two-quarters

1. _____

2. _____

3. _____

4. _____

5. _____

6. _____

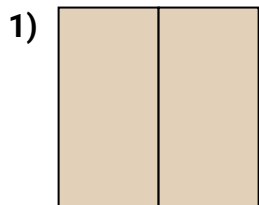
7. _____

8. _____


9. _____



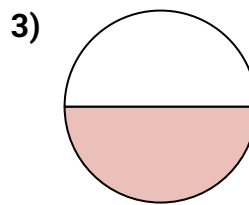
Determine which letter best describes the shaded portion.

Answers

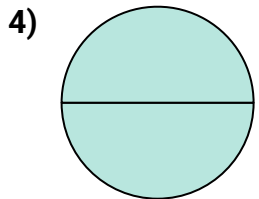
- A. two-fourths
B. two-halves
C. four-fourths



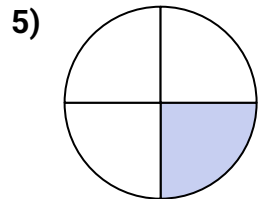
- A. four-quarters
B. two-halves
C. one-quarter



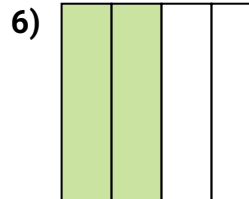
- A. two-fourths
B. one-half
C. one-quarter



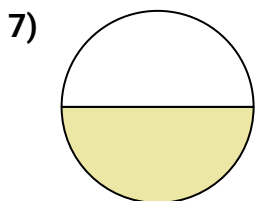
- A. two-halves
B. one-half
C. four-fourths



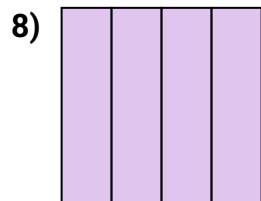
- A. two-quarters
B. one-fourth
C. two-halves



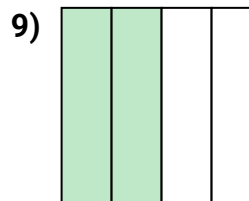
- A. one-fourth
B. two-fourths
C. three-quarters



- A. two-halves
B. three-quarters
C. one-half



- A. two-halves
B. three-fourths
C. four-fourths



- A. two-halves
B. four-fourths
C. two-quarters

1. **B**2. **C**3. **B**4. **A**5. **B**6. **B**7. **C**8. **C**9. **C**