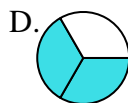
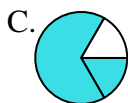
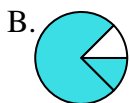
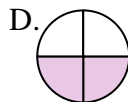
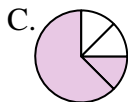
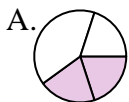


**Determine which letter best represents each fraction.****Answers**

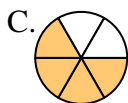
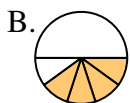
- 1) Which choice best represents  $\frac{2}{3}$ ?



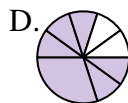
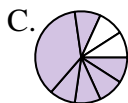
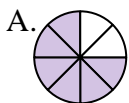
- 2) Which choice best represents  $\frac{2}{4}$ ?



- 3) Which choice best represents  $\frac{4}{6}$ ?



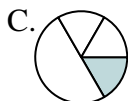
- 4) Which choice best represents  $\frac{6}{8}$ ?



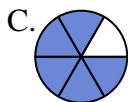
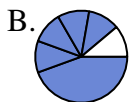
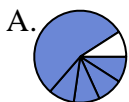
- 5) Which choice best represents  $\frac{1}{3}$ ?



- 6) Which choice best represents  $\frac{1}{4}$ ?



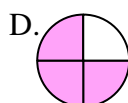
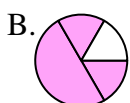
- 7) Which choice best represents  $\frac{5}{6}$ ?



- 8) Which choice best represents  $\frac{4}{8}$ ?



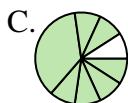
- 9) Which choice best represents  $\frac{3}{4}$ ?



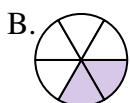
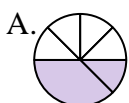
- 10) Which choice best represents  $\frac{1}{6}$ ?



- 11) Which choice best represents  $\frac{7}{8}$ ?



- 12) Which choice best represents  $\frac{2}{6}$ ?



1. \_\_\_\_\_

2. \_\_\_\_\_

3. \_\_\_\_\_

4. \_\_\_\_\_

5. \_\_\_\_\_

6. \_\_\_\_\_

7. \_\_\_\_\_

8. \_\_\_\_\_

9. \_\_\_\_\_

10. \_\_\_\_\_

















































11. \_\_\_\_\_

12. \_\_\_\_\_



Determine which letter best represents each fraction.

**Answers**

- 1) Which choice best represents  $\frac{2}{3}$ ? A.  B.  C.  D. 
- 2) Which choice best represents  $\frac{2}{4}$ ? A.  B.  C.  D. 
- 3) Which choice best represents  $\frac{4}{6}$ ? A.  B.  C.  D. 
- 4) Which choice best represents  $\frac{6}{8}$ ? A.  B.  C.  D. 
- 5) Which choice best represents  $\frac{1}{3}$ ? A.  B.  C.  D. 
- 6) Which choice best represents  $\frac{1}{4}$ ? A.  B.  C.  D. 
- 7) Which choice best represents  $\frac{5}{6}$ ? A.  B.  C.  D. 
- 8) Which choice best represents  $\frac{4}{8}$ ? A.  B.  C.  D. 
- 9) Which choice best represents  $\frac{3}{4}$ ? A.  B.  C.  D. 
- 10) Which choice best represents  $\frac{1}{6}$ ? A.  B.  C.  D. 
- 11) Which choice best represents  $\frac{7}{8}$ ? A.  B.  C.  D. 
- 12) Which choice best represents  $\frac{2}{6}$ ? A.  B.  C.  D. 

1. **D**
2. **D**
3. **C**
4. **A**
5. **B**
6. **D**
7. **C**
8. **D**
9. **D**
10. **C**
11. **A**
12. **B**