




Solve each problem.


- Ex) Express the hearts as a fraction of the entire set.



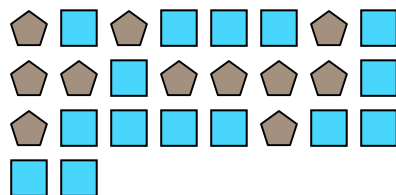
- 2) Express the hearts as a fraction of the entire set.



- 4) Express the hearts as a fraction of the entire set.




- 6) Express the pentagons as a fraction of the entire set.




- 8) Express the stars as a fraction of the entire set.




- 10) Express the moons as a fraction of the entire set.




- 1) Express the pentagons as a fraction of the entire set.




- 3) Express the hearts as a fraction of the entire set.



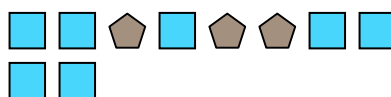
- 5) Express the hearts as a fraction of the entire set.



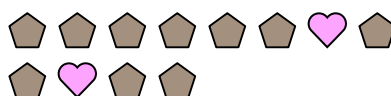
- 7) Express the hearts as a fraction of the entire set.



- 9) Express the pentagons as a fraction of the entire set.



- 11) Express the hearts as a fraction of the entire set.

**Answers**

Ex.	$\frac{14}{25}$
1.	$\frac{5}{18}$
2.	$\frac{2}{5}$
3.	$\frac{11}{18}$
4.	$\frac{15}{21}$
5.	$\frac{8}{21}$
6.	$\frac{11}{26}$
7.	$\frac{10}{13}$
8.	$\frac{10}{13}$
9.	$\frac{3}{10}$
10.	$\frac{7}{22}$
11.	$\frac{2}{12}$