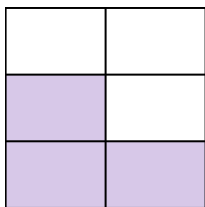




Write the shaded amount in word form.


Ex)




1)




2)



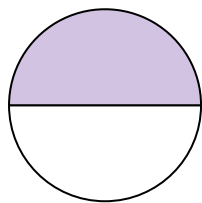
3)



4)




5)



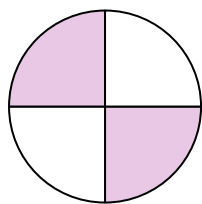
6)



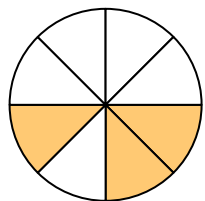
7)



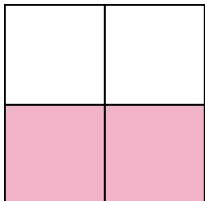
8)



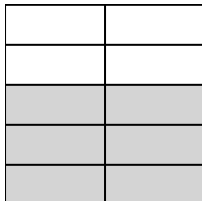
9)



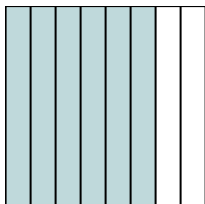
10)



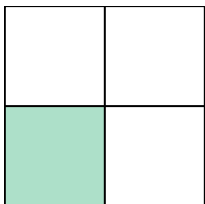
11)



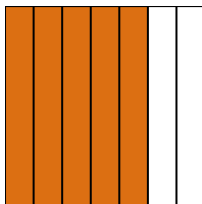
12)



13)



14)

**Answers**

Ex.

three-fifths

1.

2.

3.

4.

5.

6.

7.

8.

9.

10.

11.

12.

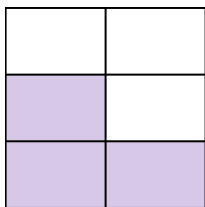
13.

14.



Write the shaded amount in word form.


Ex)




1)




2)



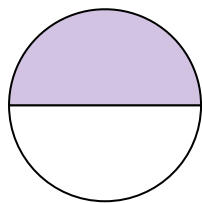
3)



4)




5)



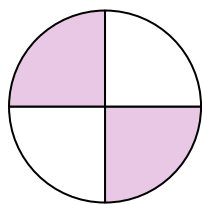
6)



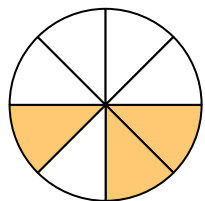
7)



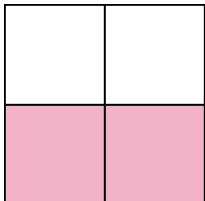
8)



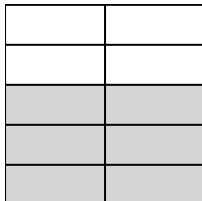
9)



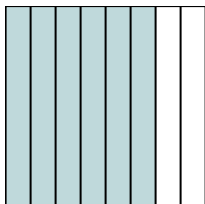
10)



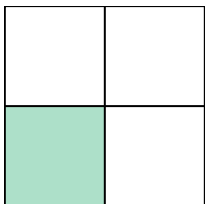
11)



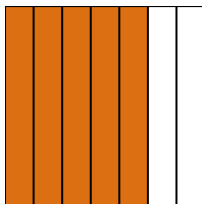
12)



13)



14)

**Answers**

Ex.

three-fifths

1.

four-tenths

2.

six-sevenths

3.

seven-tenths

4.

three-fifths

5.

one-half

6.

one-sixth

7.

three-ninths

8.

two-fourths

9.

three-eighths

10.

two-thirds

11.

six-ninths

12.

six-eighths

13.

one-third

14.

five-sevenths