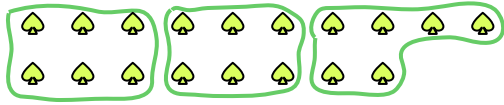


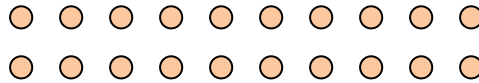
**Use the shapes provided to answer the questions.**

## Answers

**Ex)** How many groups of 6 can you make with the 18 shapes below?



1) How many groups of 5 can you make with the 20 shapes below?



Ex. 3

1. \_\_\_\_\_

2. \_\_\_\_\_

3. \_\_\_\_\_

4. \_\_\_\_\_

5.

6.

7. \_\_\_\_\_

8

9

10

11


2) How many groups of 6 can you make with the 18 shapes below?



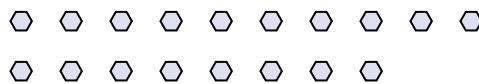
3) How many groups of 5 can you make with the 20 shapes below?



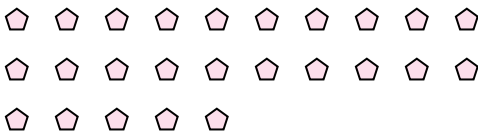
4) How many groups of 4 can you make with the 28 shapes below?



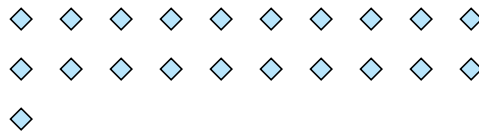
5) How many groups of 9 can you make with the 18 shapes below?



6) How many groups of 5 can you make with the 25 shapes below?



7) How many groups of 7 can you make with the 21 shapes below?




8) How many groups of 7 can you make with the 14 shapes below?



9) How many groups of 2 can you make with the 34 shapes below?



10) How many groups of 8 can you make with the 32 shapes below?

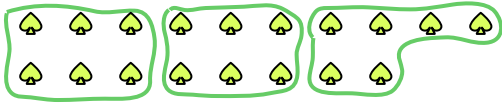


11) How many groups of 3 can you make with the 24 shapes below?

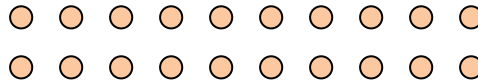


**Use the shapes provided to answer the questions.**

**Ex)** How many groups of 6 can you make with the 18 shapes below?



1) How many groups of 5 can you make with the 20 shapes below?



## Answers

Ex. 3

1. 4

2. 3

3. 4

4. 7

5. 2

6. 5

7. 3

8. 2

9. 17

10. 4

11. 8


2) How many groups of 6 can you make with the 18 shapes below?



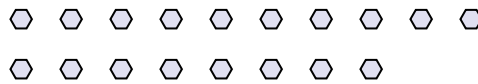
3) How many groups of 5 can you make with the 20 shapes below?



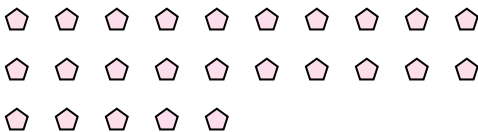
4) How many groups of 4 can you make with the 28 shapes below?



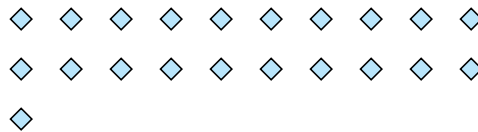
5) How many groups of 9 can you make with the 18 shapes below?



6) How many groups of 5 can you make with the 25 shapes below?



7) How many groups of 7 can you make with the 21 shapes below?




8) How many groups of 7 can you make with the 14 shapes below?



9) How many groups of 2 can you make with the 34 shapes below?



10) How many groups of 8 can you make with the 32 shapes below?



11) How many groups of 3 can you make with the 24 shapes below?

