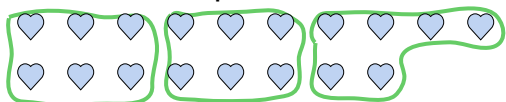


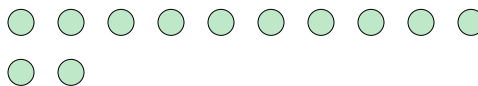
Use the shapes provided to answer the questions.

Answers

Ex) How many groups of 6 can you make with the 18 shapes below?



1) How many groups of 2 can you make with the 12 shapes below?



Ex. 3

1.

2. _____

3. _____

4. _____

5. _____

6.

7.

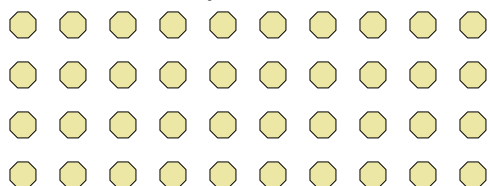
8.

9.


10.

11.

2) How many groups of 5 can you make with the 40 shapes below?




3) How many groups of 6 can you make with the 30 shapes below?



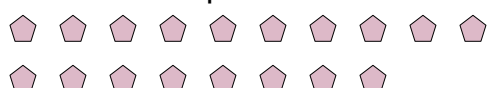
4) How many groups of 7 can you make with the 14 shapes below?



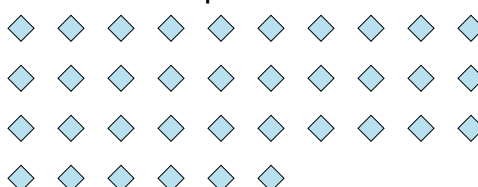
5) How many groups of 6 can you make with the 30 shapes below?



6) How many groups of 9 can you make with the 18 shapes below?



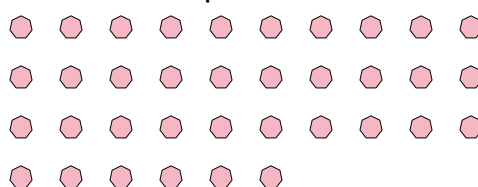
7) How many groups of 2 can you make with the 36 shapes below?




8) How many groups of 4 can you make with the 16 shapes below?



9) How many groups of 2 can you make with the 36 shapes below?



10) How many groups of 7 can you make with the 35 shapes below?

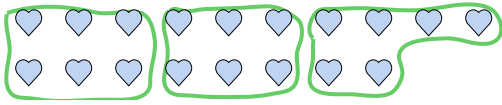
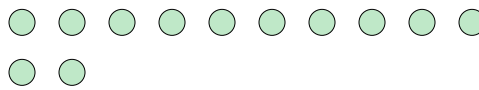
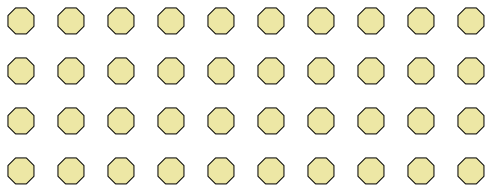
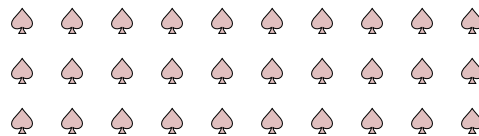

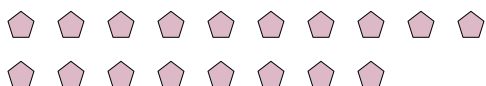
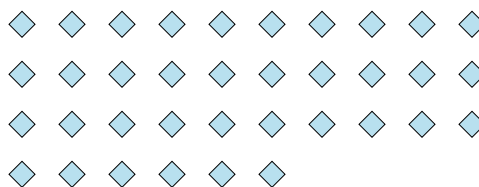
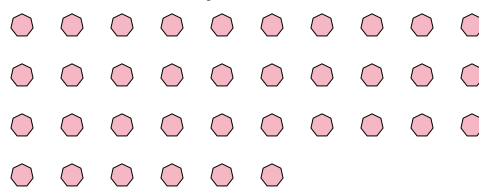



11) How many groups of 8 can you make with the 16 shapes below?





Use the shapes provided to answer the questions.

Ex) How many groups of 6 can you make with the 18 shapes below?**1)** How many groups of 2 can you make with the 12 shapes below?**2)** How many groups of 5 can you make with the 40 shapes below?**3)** How many groups of 6 can you make with the 30 shapes below?**4)** How many groups of 7 can you make with the 14 shapes below?**5)** How many groups of 6 can you make with the 30 shapes below?**6)** How many groups of 9 can you make with the 18 shapes below?**7)** How many groups of 2 can you make with the 36 shapes below?**8)** How many groups of 4 can you make with the 16 shapes below?**9)** How many groups of 2 can you make with the 36 shapes below?**10)** How many groups of 7 can you make with the 35 shapes below?**11)** How many groups of 8 can you make with the 16 shapes below?**Answers**Ex. 31. 62. 83. 54. 25. 56. 27. 188. 49. 1810. 511. 2