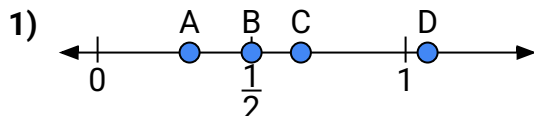
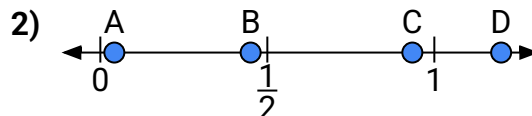




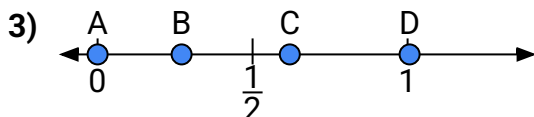
Use the number lines to answer the questions.

Answers

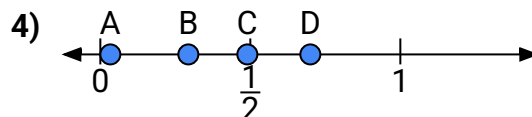
- a) Which letter best represents the location of 0.5?
b) Which letter best represents the location of 0.66?



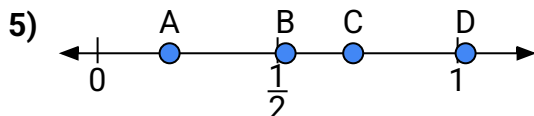
- a) Which letter best represents the location of 1.20?
b) Which letter best represents the location of 0.45?



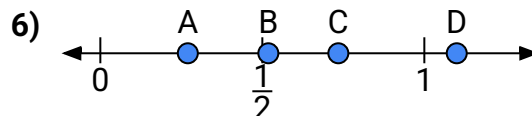
- a) Which letter best represents the location of 0.0?
b) Which letter best represents the location of 0.62?



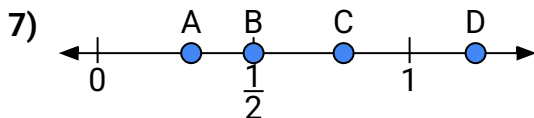
- a) Which letter best represents the location of 0.70?
b) Which letter best represents the location of 0.49?



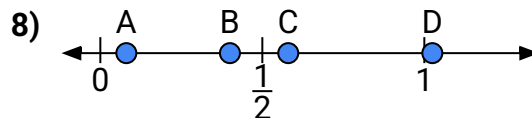
- a) Which letter best represents the location of 0.20?
b) Which letter best represents the location of 0.71?



- a) Which letter best represents the location of 1.10?
b) Which letter best represents the location of 0.27?



- a) Which letter best represents the location of 0.3?
b) Which letter best represents the location of 0.50?



- a) Which letter best represents the location of 0.4?
b) Which letter best represents the location of 0.58?

1. _____

2. _____

3. _____

4. _____

5. _____

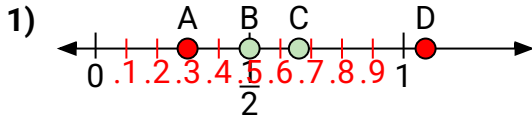
6. _____

7. _____

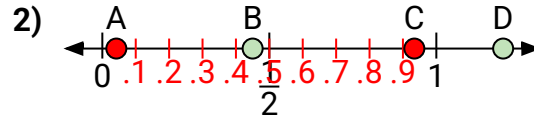
8. _____



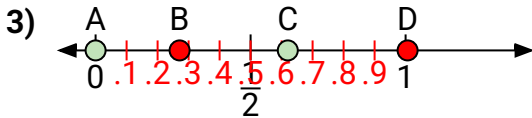
Use the number lines to answer the questions.

Answers

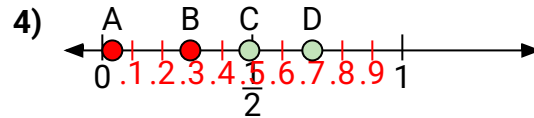
- a) Which letter best represents the location of 0.5?
b) Which letter best represents the location of 0.66?



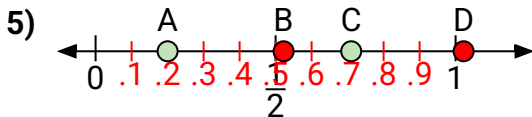
- a) Which letter best represents the location of 1.20?
b) Which letter best represents the location of 0.45?



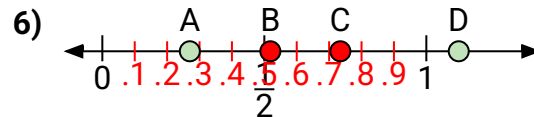
- a) Which letter best represents the location of 0.0?
b) Which letter best represents the location of 0.62?



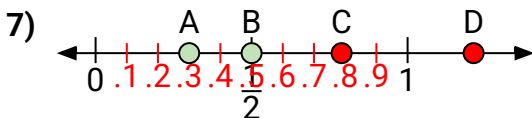
- a) Which letter best represents the location of 0.70?
b) Which letter best represents the location of 0.49?



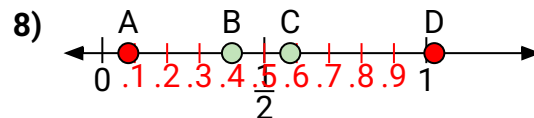
- a) Which letter best represents the location of 0.20?
b) Which letter best represents the location of 0.71?



- a) Which letter best represents the location of 1.10?
b) Which letter best represents the location of 0.27?



- a) Which letter best represents the location of 0.3?
b) Which letter best represents the location of 0.50?



- a) Which letter best represents the location of 0.4?
b) Which letter best represents the location of 0.58?

1. **B** **C**
2. **D** **B**
3. **A** **C**
4. **D** **C**
5. **A** **C**
6. **D** **A**
7. **A** **B**
8. **B** **C**