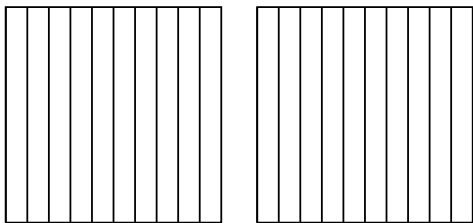




Use the visual model to solve each problem.

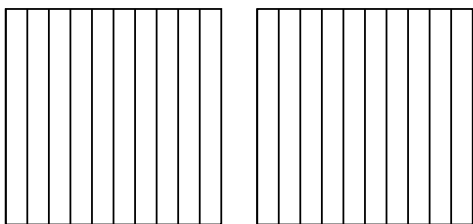
Answers

1) $2 \times 0.9 =$




1. _____

2) $2 \times 0.3 =$




2. _____

3) $2 \times 0.46 =$



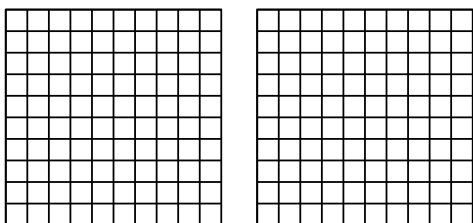
3. _____

4) $3 \times 0.2 =$



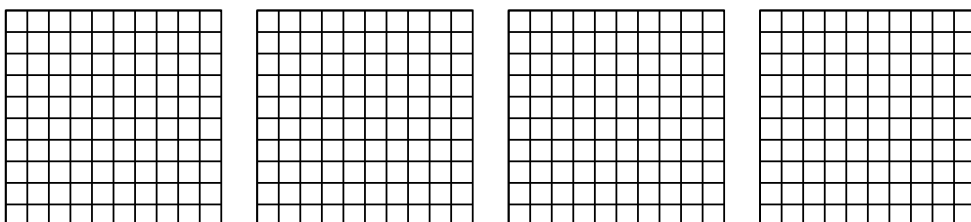
4. _____

5) $2 \times 0.96 =$



5. _____

6) $4 \times 0.30 =$

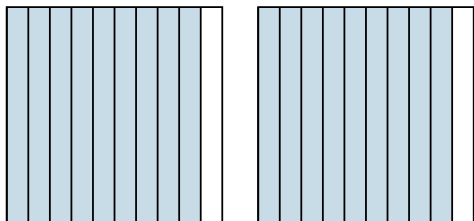


6. _____

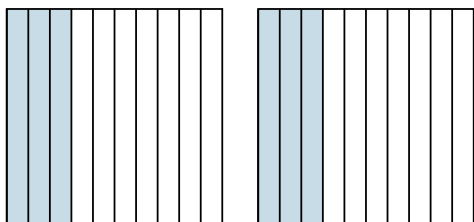


Use the visual model to solve each problem.

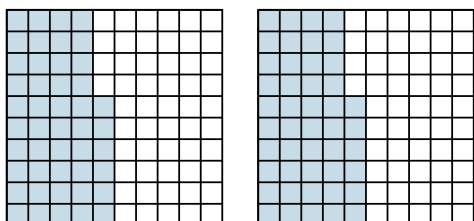
1) $2 \times 0.9 =$



2) $2 \times 0.3 =$



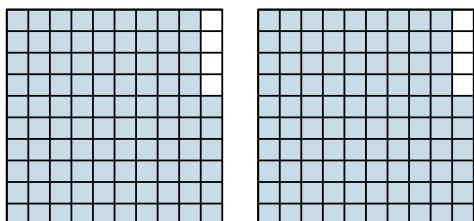
3) $2 \times 0.46 =$



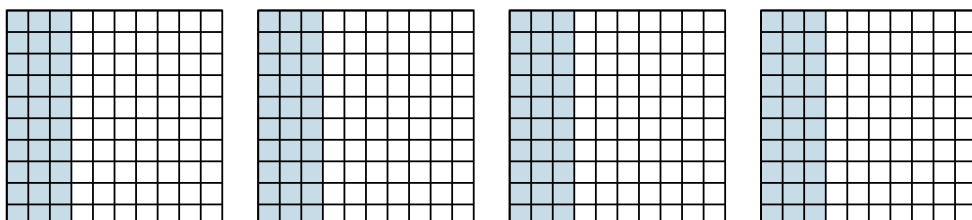
4) $3 \times 0.2 =$



5) $2 \times 0.96 =$



6) $4 \times 0.30 =$



Answers

1. $\frac{18}{10} = 1.8$

2. $\frac{6}{10} = 0.6$

3. $\frac{92}{100} = 0.92$

4. $\frac{6}{10} = 0.6$

5. $\frac{192}{100} = 1.92$

6. $\frac{120}{100} = 1.2$