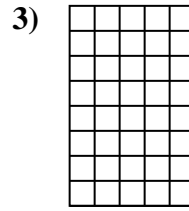
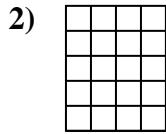
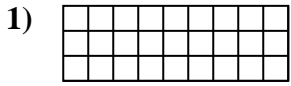




Determine the area. Each **SVGREPLACE** = 1 square unit (u^2).


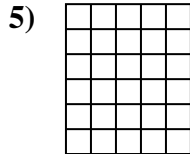
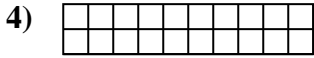
Answers



1. _____

2. _____

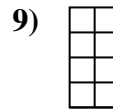
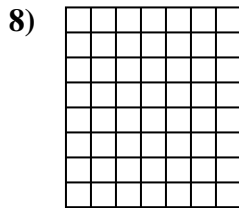
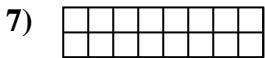
3. _____



4. _____

5. _____

6. _____

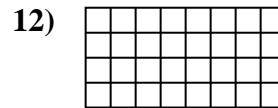
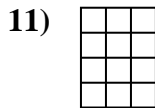
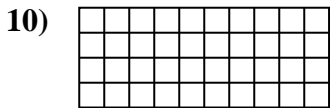


7. _____

8. _____

9. _____

10. _____



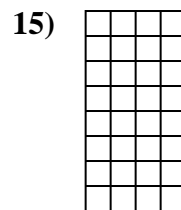
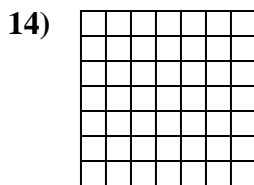

11. _____

12. _____

13. _____

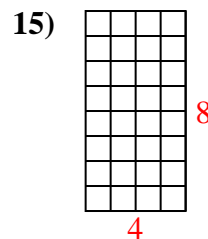
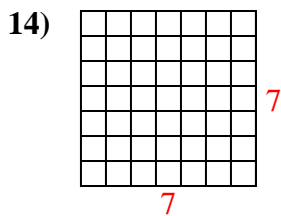
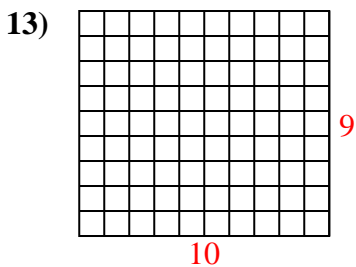
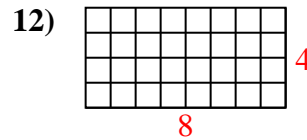
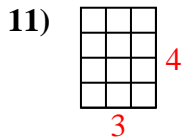
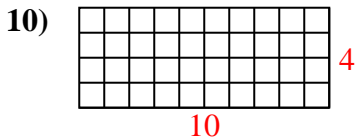
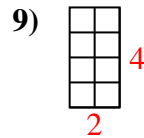
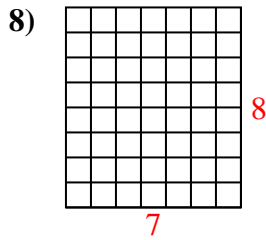
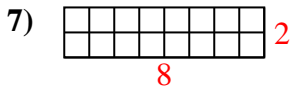
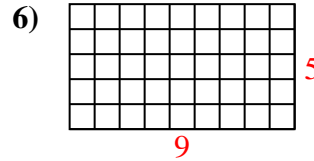
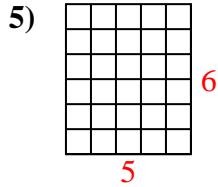
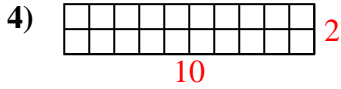
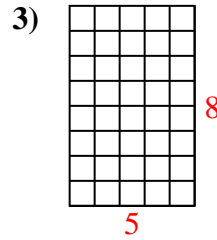
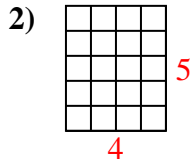
14. _____

15. _____





Determine the area. Each **SVGREPLACE** = 1 square unit (u^2).



Answers

1. 27 u^2

2. 20 u^2

3. 40 u^2

4. 20 u^2

5. 30 u^2

6. 45 u^2

7. 16 u^2

8. 56 u^2

9. 8 u^2

10. 40 u^2

11. 12 u^2

12. 32 u^2

13. 90 u^2

14. 49 u^2

15. 32 u^2