




Use the diagrams below to create a rectangle with the area/perimeter shown. Each SVGREPLACE = 1 unit(u). Answer with the length and height. Answers will vary.


1) Area of 16 square units.




2) Perimeter of 40 units.




3) Perimeter of 6 units.




4) Perimeter of 20 units.




5) Perimeter of 26 units.




6) Area of 32 square units.




7) Area of 7 square units.




8) Area of 42 square units.




9) Perimeter of 22 units.




10) Perimeter of 38 units.



11) Perimeter of 8 units.




12) Area of 21 square units.

**Answers**1. _____ $=16u^2$ 2. _____ $=40u$ 3. _____ $=6u$ 4. _____ $=20u$ 5. _____ $=26u$ 6. _____ $=32u^2$ 7. _____ $=7u^2$ 8. _____ $=42u^2$ 9. _____ $=22u$ 10. _____ $=38u$ 11. _____ $=8u$ 12. _____ $=21u^2$




Use the diagrams below to create a rectangle with the area/perimeter shown. Each SVGREPLACE = 1 unit(u). Answer with the length and height. Answers will vary.


1) Area of 16 square units.




2) Perimeter of 40 units.




3) Perimeter of 6 units.




4) Perimeter of 20 units.




5) Perimeter of 26 units.




6) Area of 32 square units.




7) Area of 7 square units.




8) Area of 42 square units.




9) Perimeter of 22 units.




10) Perimeter of 38 units.



11) Perimeter of 8 units.



12) Area of 21 square units.

**Answers**1. $=16u^2$ 2. $=40u$ 3. $=6u$ 4. $=20u$ 5. $=26u$ 6. $=32u^2$ 7. $=7u^2$ 8. $=42u^2$ 9. $=22u$ 10. $=38u$ 11. $=8u$ 12. $=21u^2$