



Solve each problem using a tape diagram.

**Answers**

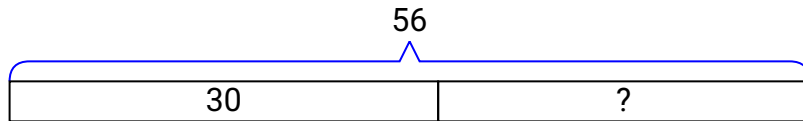
- 1) Paige had 56 pieces of paper in her folder. She used 30 pieces. How many pieces does she have now?
- 2) There were 50 people on the train. At the first stop 13 people got off. How many people are left on the train?
- 3) John had 63 cherries. He ate 31 of them. How many cherries does John have left?
- 4) While playing a game Will had 47 lives. He lost 20 lives on a hard level. How many lives does he have left?
- 5) For Halloween George got 87 pounds of candy. If he gave 40 pounds to Debby, how many pounds would he have left?
- 6) A fast food restaurant sold 94 ice cream cones. They used waffle cones on 48 of them and the rest were sugar cones. How many sugar cones did they use?
- 7) A museum had 58 paintings. If they got rid of 27 of them, how many pictures would they have left?

1. \_\_\_\_\_
2. \_\_\_\_\_
3. \_\_\_\_\_
4. \_\_\_\_\_
5. \_\_\_\_\_
6. \_\_\_\_\_
7. \_\_\_\_\_

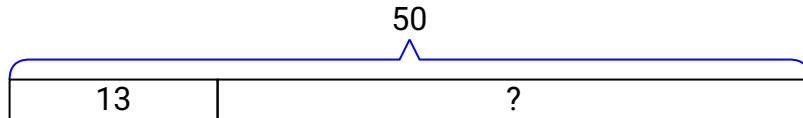


Solve each problem using a tape diagram.

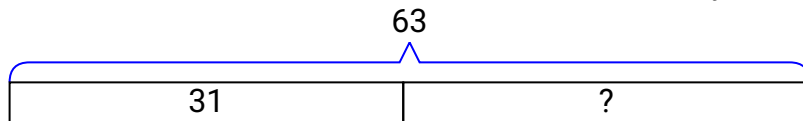
- 1) Paige had 56 pieces of paper in her folder. She used 30 pieces. How many pieces does she have now?



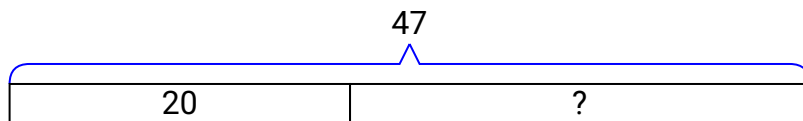
- 2) There were 50 people on the train. At the first stop 13 people got off. How many people are left on the train?



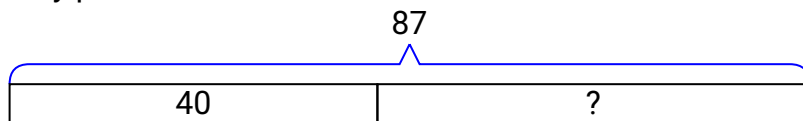
- 3) John had 63 cherries. He ate 31 of them. How many cherries does John have left?



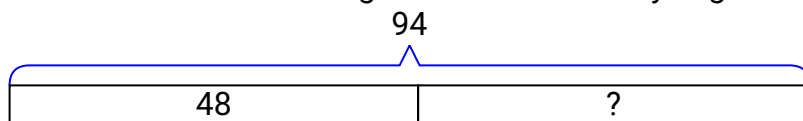
- 4) While playing a game Will had 47 lives. He lost 20 lives on a hard level. How many lives does he have left?



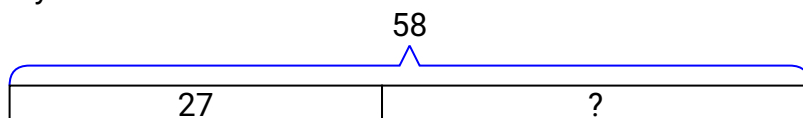
- 5) For Halloween George got 87 pounds of candy. If he gave 40 pounds to Debby, how many pounds would he have left?



- 6) A fast food restaurant sold 94 ice cream cones. They used waffle cones on 48 of them and the rest were sugar cones. How many sugar cones did they use?



- 7) A museum had 58 paintings. If they got rid of 27 of them, how many pictures would they have left?

**Answers**

1. **26**  
2. **37**  
3. **32**  
4. **27**  
5. **47**  
6. **46**  
7. **31**