



Solve each problem using a tape diagram.

Answers

Ex) A store had 532 sodas, both diet and regular. The ratio of diet sodas to regular sodas was 8:6. How many diet sodas were there?

Ex. 304

1) At the fair the ratio of male to females was 3:6. If there are 306 people at the fair how many males are there?

1. _____

2. _____

3. _____

4. _____

5. _____

2) During an local election the ratio of teens to adults who voted was 2:5. If 539 people voted how many were teens?

3) In August, Robin's Clothing Store sold 200 shirts with the ratio of short sleeve to long sleeve being 2:6. How many short sleeve shirts were sold?

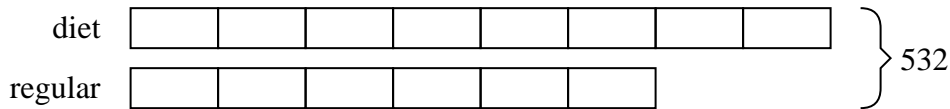
4) A cable company had 430 subscribers. The ratio of regular subscribers to premium subscribers was 4:6. How many regular subscribers did they have?

5) Sam was looking at his streaming music stats. The ratio of songs he liked to disliked was 3:5. If he listened to 448 songs total how many did he like?

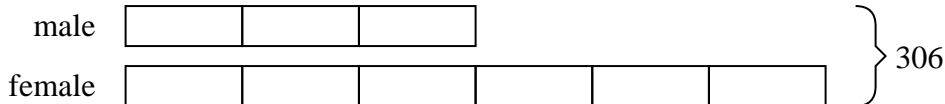


Solve each problem using a tape diagram.

- Ex)** A store had 532 sodas, both diet and regular. The ratio of diet sodas to regular sodas was 8:6. How many diet sodas were there?




- 1)** At the fair the ratio of male to females was 3:6. If there are 306 people at the fair how many males are there?



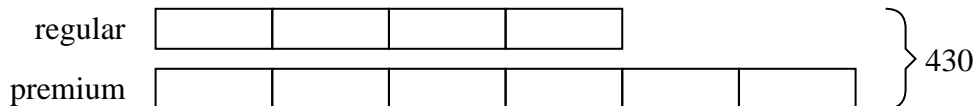
- 2)** During an local election the ratio of teens to adults who voted was 2:5. If 539 people voted how many were teens?




- 3)** In August, Robin's Clothing Store sold 200 shirts with the ratio of short sleeve to long sleeve being 2:6. How many short sleeve shirts were sold?



- 4)** A cable company had 430 subscribers. The ratio of regular subscribers to premium subscribers was 4:6. How many regular subscribers did they have?



- 5)** Sam was looking at his streaming music stats. The ratio of songs he liked to disliked was 3:5. If he listened to 448 songs total how many did he like?

**Answers**Ex. 3041. 1022. 1543. 504. 1725. 168