

**Solve each problem using a tape diagram.****Answers**

- Ex)** Vanessa was trying to determine the weight of a small rock. She determined the small rock was  $\frac{2}{3}$  as heavy as a medium rock. The medium rock was  $\frac{3}{9}$  as heavy as a large rock. The large rock weighed 468 grams. How heavy was the small rock?
- 1)** Two years ago the fair had  $\frac{2}{4}$  as many people as 1 year ago. 1 year ago the fair had  $\frac{4}{5}$  as many people as this year. This year the fair had 440 people. How many people did the fair have 2 years ago?
- 2)** At the school fundraiser Adam earned \$192. Bianca earned  $\frac{4}{8}$  as much as Adam. And Cathy earned  $\frac{2}{4}$  as much as Bianca. How much did Cathy earn?
- 3)** On Super Bowl Sunday a store sold 328 sodas. They sold  $\frac{7}{8}$  as many bags of chips. They also sold  $\frac{4}{7}$  as many jars of dip as bags of chips. How many jars of dip did they sell?
- 4)** Lana was looking at her Nintendo collection. She had 170 wiiU games. She had  $\frac{3}{10}$  as many DS games and  $\frac{2}{3}$  as many 3ds games as DS games. How many 3ds games does she have?

Ex. **104**

1. \_\_\_\_\_

2. \_\_\_\_\_

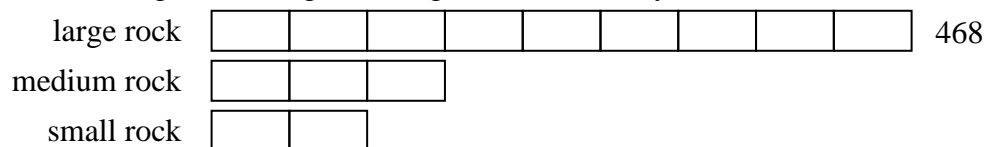
3. \_\_\_\_\_

4. \_\_\_\_\_

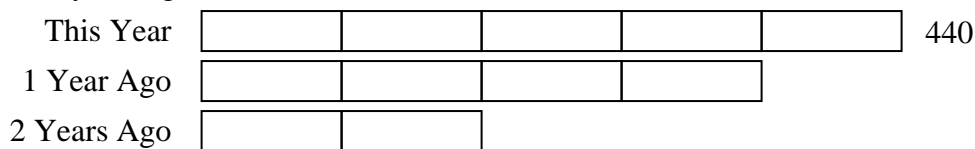


Solve each problem using a tape diagram.

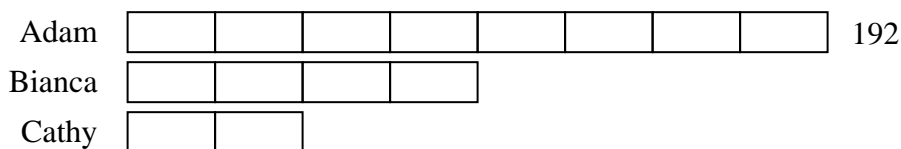
- Ex) Vanessa was trying to determine the weight of a small rock. She determined the small rock was  $\frac{2}{3}$  as heavy as a medium rock. The medium rock was  $\frac{3}{9}$  as heavy as a large rock. The large rock weighed 468 grams. How heavy was the small rock?



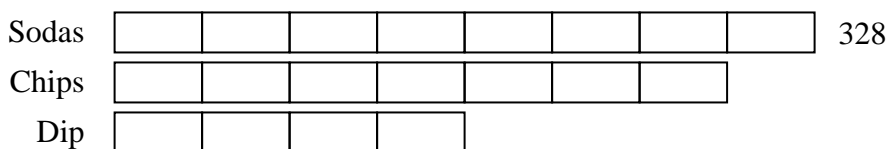
- 1) Two years ago the fair had  $\frac{2}{4}$  as many people as 1 year ago. 1 year ago the fair had  $\frac{4}{5}$  as many people as this year. This year the fair had 440 people. How many people did the fair have 2 years ago?



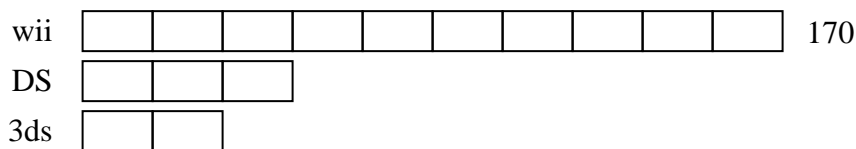
- 2) At the school fundraiser Adam earned \$192. Bianca earned  $\frac{4}{8}$  as much as Adam. And Cathy earned  $\frac{2}{4}$  as much as Bianca. How much did Cathy earn?



- 3) On Super Bowl Sunday a store sold 328 sodas. They sold  $\frac{7}{8}$  as many bags of chips. They also sold  $\frac{4}{7}$  as many jars of dip as bags of chips. How many jars of dip did they sell?



- 4) Lana was looking at her Nintendo collection. She had 170 wiiU games. She had  $\frac{3}{10}$  as many DS games and  $\frac{2}{3}$  as many 3ds games as DS games. How many 3ds games does she have?

**Answers**Ex. 1041. 1762. 483. 1644. 34