



Solve each problem.

Answers

- 1) On Facebook Faye had 27 photos of her friends and 34 photos of her family. How many photos did she have total?
- 2) On Saturday George bought 33 trading cards. On Sunday he bought 26 more. How many cards did he buy total?
- 3) While playing a game Sam had 28 points. If he scored another 36 points, how many points would he have total?
- 4) Lana received 48 text messages before noon and another 19 after noon. How many text messages did Lana receive total?
- 5) At the zoo Debby took 36 pictures. If her sister took another 39 pictures, how many did they take total?
- 6) Victor owned 50 baseball cards. For his birthday he got 36 more. How many cards does Victor have total?
- 7) While exercising Will did 19 push-ups in the morning and 28 more in the afternoon. How many push-ups did Will do total?

1. _____

2. _____

3. _____

4. _____

5. _____

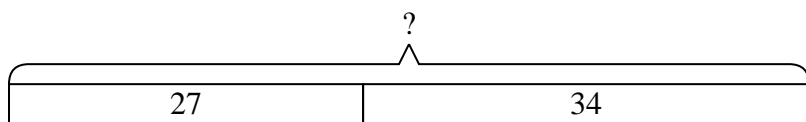
6. _____

7. _____

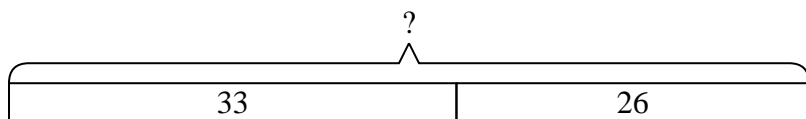


Solve each problem.

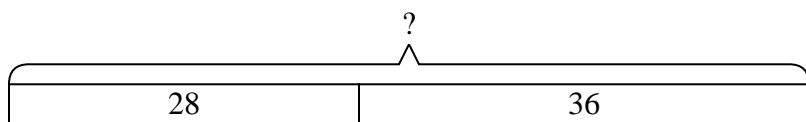
- 1) On Facebook Faye had 27 photos of her friends and 34 photos of her family. How many photos did she have total?



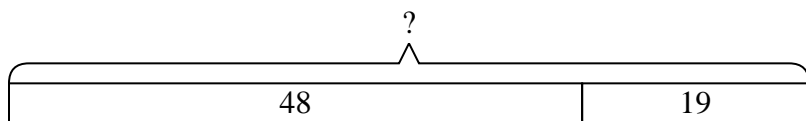
- 2) On Saturday George bought 33 trading cards. On Sunday he bought 26 more. How many cards did he buy total?



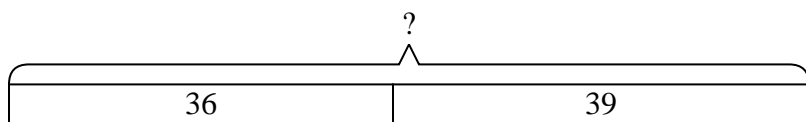
- 3) While playing a game Sam had 28 points. If he scored another 36 points, how many points would he have total?



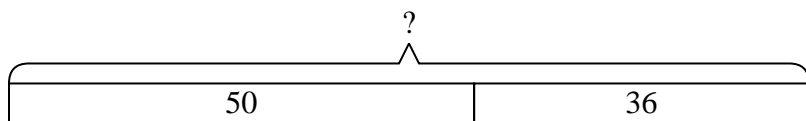
- 4) Lana received 48 text messages before noon and another 19 after noon. How many text messages did Lana receive total?



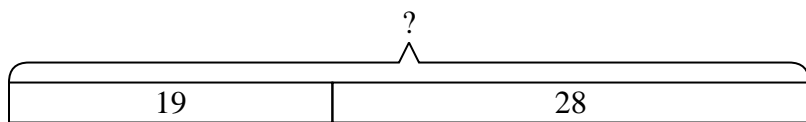
- 5) At the zoo Debby took 36 pictures. If her sister took another 39 pictures, how many did they take total?



- 6) Victor owned 50 baseball cards. For his birthday he got 36 more. How many cards does Victor have total?



- 7) While exercising Will did 19 push-ups in the morning and 28 more in the afternoon. How many push-ups did Will do total?

**Answers**1. **61**2. **59**3. **64**4. **67**5. **75**6. **86**7. **47**