

**Solve each problem.****Answers**

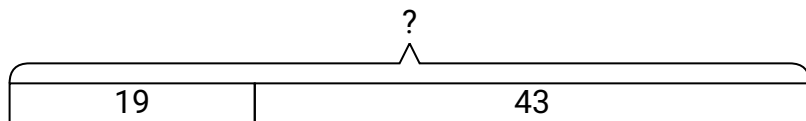
- 1) Bianca had 19 DS games and her friend had 43 games. How many do they have total?
- 2) An aquarium had 37 fish in it. Later they added 28 fish. How many fish are in the aquarium now?
- 3) For Halloween Cody got 26 ounces of candy and Tiffany got 10 ounces of candy. What is the combined weight they received?
- 4) A restaurant sold 40 sodas in the morning and 29 in the afternoon. How many sodas did they sell total?
- 5) Frank had 42 books. During the book fair he bought 15 more. How many books did Frank have total?
- 6) Janet went to the movies 25 times last year and 44 times this year. How many times did Janet go to the movies total?
- 7) At the arcade John had won 21 tickets. Later he won 36 more tickets. How many tickets did John have total?

1. \_\_\_\_\_
2. \_\_\_\_\_
3. \_\_\_\_\_
4. \_\_\_\_\_
5. \_\_\_\_\_
6. \_\_\_\_\_
7. \_\_\_\_\_

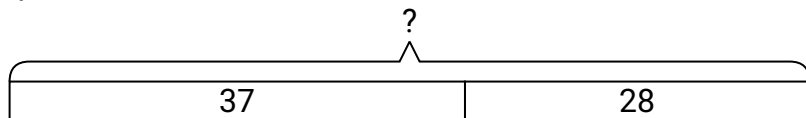


Solve each problem.

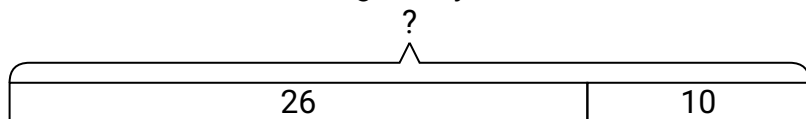
- 1) Bianca had 19 DS games and her friend had 43 games. How many do they have total?



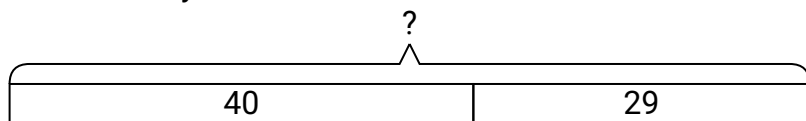
- 2) An aquarium had 37 fish in it. Later they added 28 fish. How many fish are in the aquarium now?



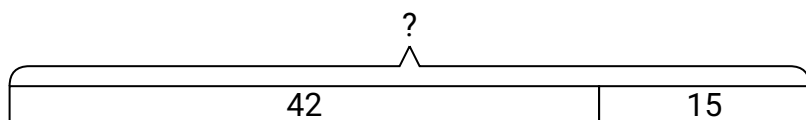
- 3) For Halloween Cody got 26 ounces of candy and Tiffany got 10 ounces of candy. What is the combined weight they received?



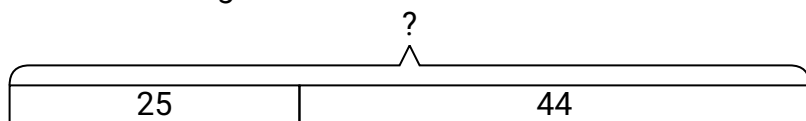
- 4) A restaurant sold 40 sodas in the morning and 29 in the afternoon. How many sodas did they sell total?



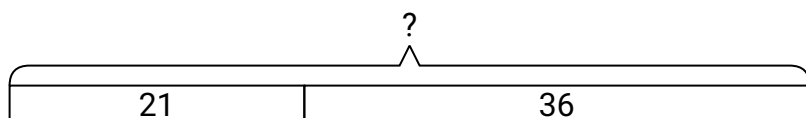
- 5) Frank had 42 books. During the book fair he bought 15 more. How many books did Frank have total?



- 6) Janet went to the movies 25 times last year and 44 times this year. How many times did Janet go to the movies total?



- 7) At the arcade John had won 21 tickets. Later he won 36 more tickets. How many tickets did John have total?

**Answers**

1. **62**  
2. **65**  
3. **36**  
4. **69**  
5. **57**  
6. **69**  
7. **57**