






Adam and his friends were trying to see who could catch the most bugs in a day. They recorded their information in the pictograph below.

Bug Catching Contest

 = 2 Bugs

- 1) Who caught the fewest number of bugs?
- 2) Who caught more bugs, George or Dave?
- 3) Who caught the greatest number of bugs?
- 4) Who caught exactly 20 bugs?
- 5) How many bugs did Jerry catch?

Several students were helping to decorate the school halls by drawing pictures to hang up. The pictograph below shows the number of pictures each student drew.

Pictures Drawn

 = 5 pictures drawn


- 6) Who drew exactly 10 pictures?
- 7) How many pictures did Edward draw?
- 8) Who drew the fewest pictures?
- 9) Who drew the most pictures?
- 10) Did Bianca or Vanessa draw more pictures?

Answers

1. _____
2. _____
3. _____
4. _____
5. _____
6. _____
7. _____
8. _____
9. _____
10. _____

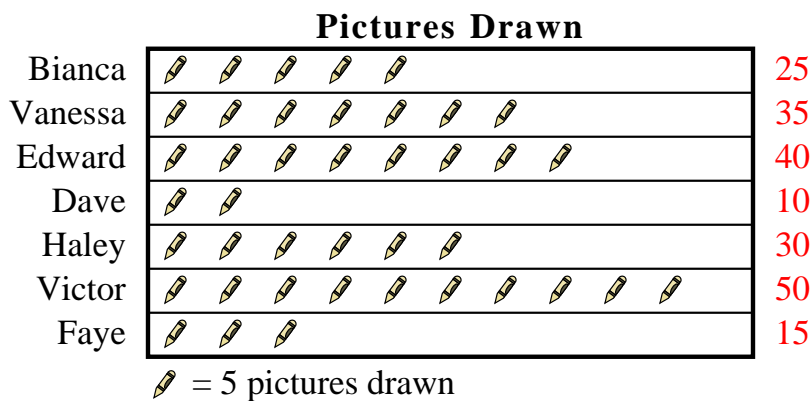


Adam and his friends were trying to see who could catch the most bugs in a day. They recorded their information in the pictograph below.



- 1) Who caught the fewest number of bugs?
- 2) Who caught more bugs, George or Dave?
- 3) Who caught the greatest number of bugs?
- 4) Who caught exactly 20 bugs?
- 5) How many bugs did Jerry catch?

Several students were helping to decorate the school halls by drawing pictures to hang up. The pictograph below shows the number of pictures each student drew.



- 6) Who drew exactly 10 pictures?
- 7) How many pictures did Edward draw?
- 8) Who drew the fewest pictures?
- 9) Who drew the most pictures?
- 10) Did Bianca or Vanessa draw more pictures?

Answers

1. **Jerry**
2. **George**
3. **Edward**
4. **Edward**
5. **2**
6. **Dave**
7. **40**
8. **Dave**
9. **Victor**
10. **Vanessa**