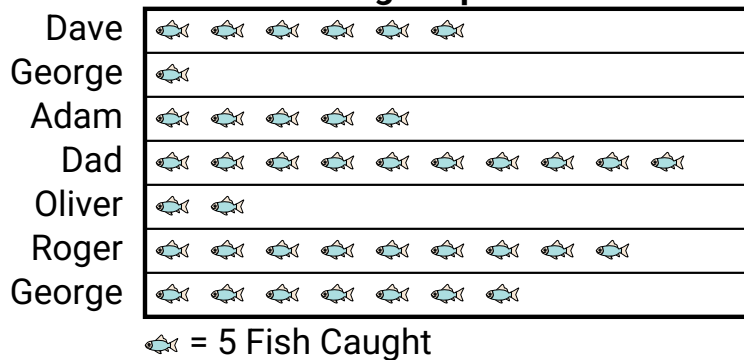


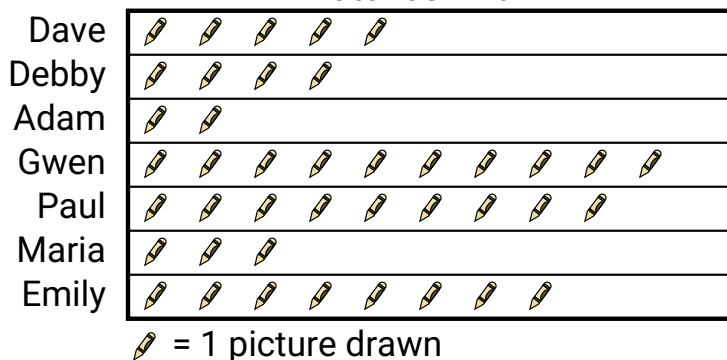


Roger's father took Roger and 5 friends on a fishing trip. They recorded the number of fish they caught using the pictograph below.

Fishing Trip Results

- 1) Who caught the fewest fish?
- 2) Who caught the most fish?
- 3) Who caught exactly 50 fish?
- 4) Who caught more fish, Dave or George?
- 5) How many fish did Adam catch?

Several students were helping to decorate the school halls by drawing pictures to hang up. The pictograph below shows the number of pictures each student drew.

Pictures Drawn


- 6) How many pictures did Adam draw?
- 7) Who drew the most pictures?
- 8) Who drew the fewest pictures?
- 9) Did Dave or Debby draw more pictures?
- 10) Who drew exactly 10 pictures?

Answers

1. _____
2. _____
3. _____
4. _____
5. _____
6. _____
7. _____
8. _____
9. _____
10. _____

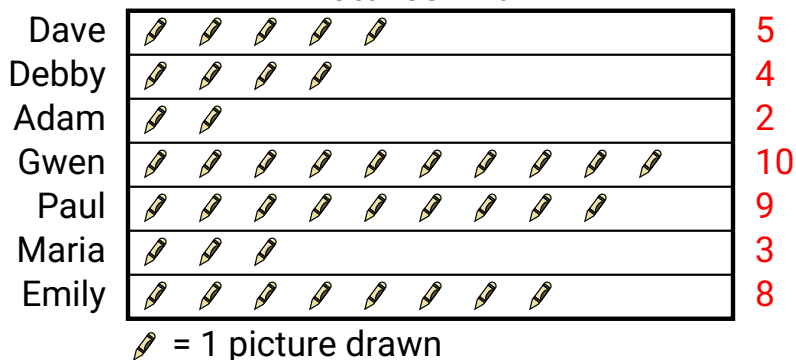


Roger's father took Roger and 5 friends on a fishing trip. They recorded the number of fish they caught using the pictograph below.

Fishing Trip Results

- 1) Who caught the fewest fish?
- 2) Who caught the most fish?
- 3) Who caught exactly 50 fish?
- 4) Who caught more fish, Dave or George?
- 5) How many fish did Adam catch?

Several students were helping to decorate the school halls by drawing pictures to hang up. The pictograph below shows the number of pictures each student drew.

Pictures Drawn

- 6) How many pictures did Adam draw?
- 7) Who drew the most pictures?
- 8) Who drew the fewest pictures?
- 9) Did Dave or Debby draw more pictures?
- 10) Who drew exactly 10 pictures?

Answers

1. **Oliver**
2. **Dad**
3. **Dad**
4. **George**
5. **25**
6. **2**
7. **Gwen**
8. **Adam**
9. **Dave**
10. **Gwen**