



Shade the region shown.

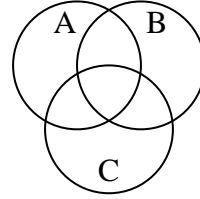
1) $C \cap B$



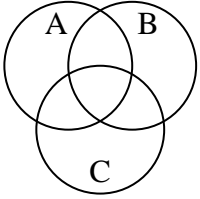
2) $B \cup (A - C)$



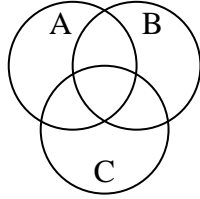
3) $(C \cup A) - B$



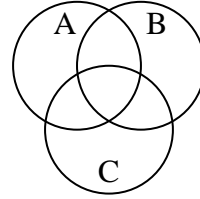
4) $(C \cup B) \cap A$



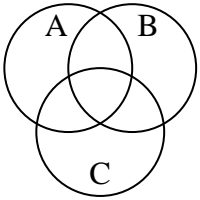
5) $B \cup (C - A)$



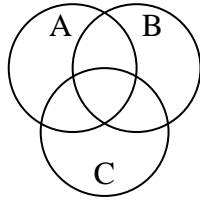
6) $(B \cup C) - A$



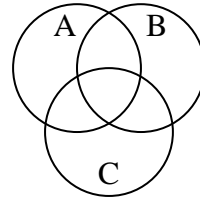
7) $B - (A \cap C)$



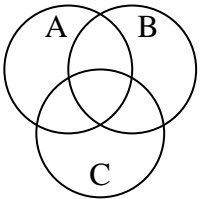
8) $A \cup (C - B)$



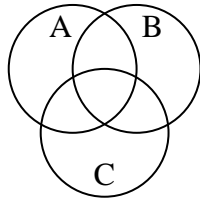
9) $A - (C \cup B)$



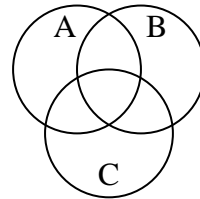
10) $C - (A \cap B)$



11) C



12) $C - (B \cup A)$



Answers

1. _____

2. _____

3. _____

4. _____

5. _____

6. _____

7. _____

8. _____

9. _____

10. _____

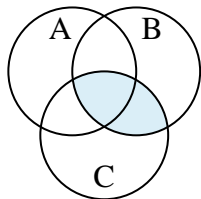
11. _____

12. _____

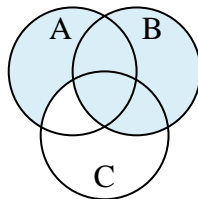


Shade the region shown.

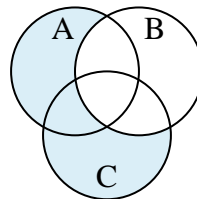
1) $C \cap B$



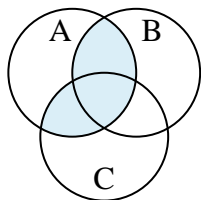
2) $B \cup (A - C)$



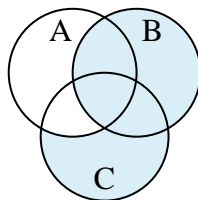
3) $(C \cup A) - B$



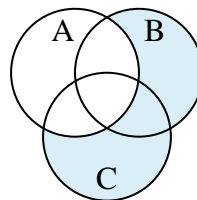
4) $(C \cup B) \cap A$



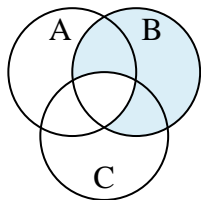
5) $B \cup (C - A)$



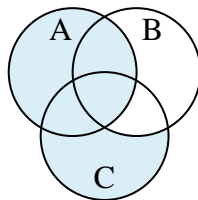
6) $(B \cup C) - A$



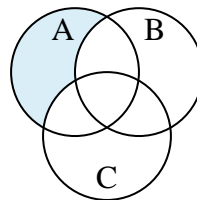
7) $B - (A \cap C)$



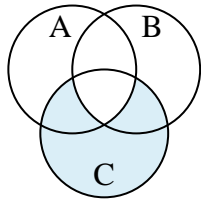
8) $A \cup (C - B)$



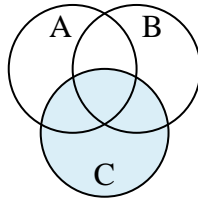
9) $A - (C \cup B)$



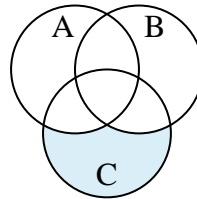
10) $C - (A \cap B)$



11) C



12) $C - (B \cup A)$

**Answers**

1. $C \cap B$

2. $B \cup (A - C)$

3. $(C \cup A) - B$

4. $(C \cup B) \cap A$

5. $B \cup (C - A)$

6. $(B \cup C) - A$

7. $B - (A \cap C)$

8. $A \cup (C - B)$

9. $A - (C \cup B)$

10. $C - (A \cap B)$

11. C

12. $C - (B \cup A)$