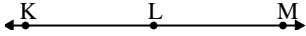




Solve each problem.

Answers

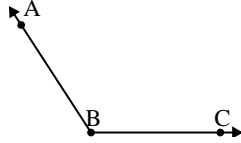
1)



Which choice best represents $\angle KLM$?

- A. 180°
- B. 58°
- C. 96°
- D. 158°

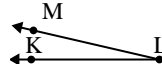
2)



Which choice best represents $\angle ABC$?

- A. 180°
- B. 26°
- C. 123°
- D. 154°

3)



Which choice best represents $\angle KLM$?

- A. 160°
- B. 13°
- C. 99°
- D. 123°

1. _____

2. _____

3. _____

4. _____

5. _____

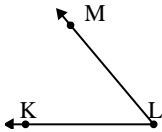
6. _____

7. _____

8. _____

9. _____

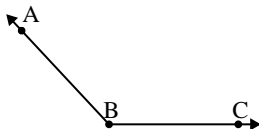
4)



Which choice best represents $\angle KLM$?

- A. 50°
- B. 143°
- C. 84°
- D. 29°

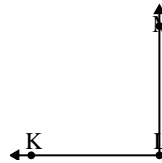
5)



Which choice best represents $\angle ABC$?

- A. 158°
- B. 97°
- C. 133°
- D. 67°

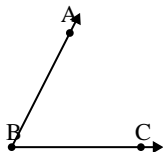
6)



Which choice best represents $\angle KLM$?

- A. 10°
- B. 64°
- C. 90°
- D. 31°

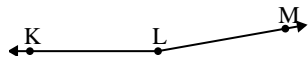
7)



Which choice best represents $\angle ABC$?

- A. 172°
- B. 42°
- C. 125°
- D. 63°

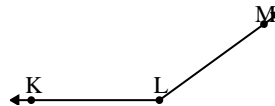
8)



Which choice best represents $\angle KLM$?

- A. 89°
- B. 138°
- C. 170°
- D. 35°

9)



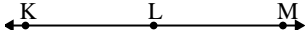
Which choice best represents $\angle KLM$?

- A. 144°
- B. 113°
- C. 5°
- D. 172°



Solve each problem.

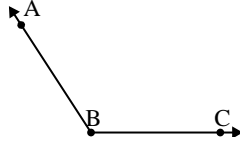
1)



Which choice best represents $\angle KLM$?

- A. 180°
- B. 58°
- C. 96°
- D. 158°

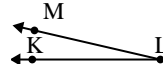
2)



Which choice best represents $\angle ABC$?

- A. 180°
- B. 26°
- C. 123°
- D. 154°

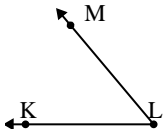
3)



Which choice best represents $\angle KLM$?

- A. 160°
- B. 13°
- C. 99°
- D. 123°

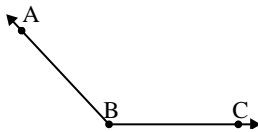
4)



Which choice best represents $\angle KLM$?

- A. 50°
- B. 143°
- C. 84°
- D. 29°

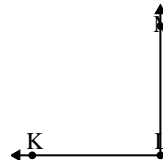
5)



Which choice best represents $\angle ABC$?

- A. 158°
- B. 97°
- C. 133°
- D. 67°

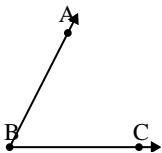
6)



Which choice best represents $\angle KLM$?

- A. 10°
- B. 64°
- C. 90°
- D. 31°

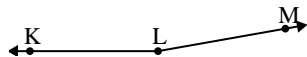
7)



Which choice best represents $\angle ABC$?

- A. 172°
- B. 42°
- C. 125°
- D. 63°

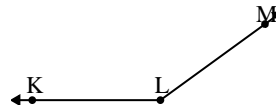
8)



Which choice best represents $\angle KLM$?

- A. 89°
- B. 138°
- C. 170°
- D. 35°

9)



Which choice best represents $\angle KLM$?

- A. 144°
- B. 113°
- C. 5°
- D. 172°

Answers

- 1. **A**
- 2. **C**
- 3. **B**
- 4. **A**
- 5. **C**
- 6. **C**
- 7. **D**
- 8. **C**
- 9. **A**