

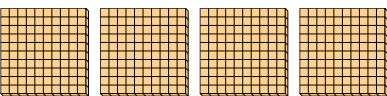


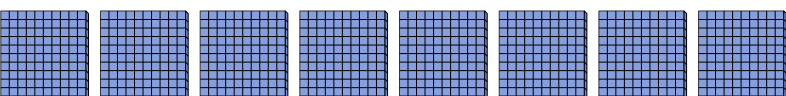


Use the blocks to determine the total quantities.

Ex)   
7 hundreds = 70 tens = 700 ones

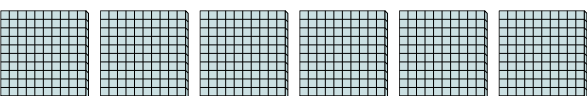
1)   
 \_\_\_\_\_ hundreds = \_\_\_\_\_ tens = \_\_\_\_\_ ones


2)   
 \_\_\_\_\_ hundreds = \_\_\_\_\_ tens = \_\_\_\_\_ ones


3)   
 \_\_\_\_\_ hundreds = \_\_\_\_\_ tens = \_\_\_\_\_ ones

4)   
 \_\_\_\_\_ hundreds = \_\_\_\_\_ tens = \_\_\_\_\_ ones

5)   
 \_\_\_\_\_ hundreds = \_\_\_\_\_ tens = \_\_\_\_\_ ones

6)   
 \_\_\_\_\_ hundreds = \_\_\_\_\_ tens = \_\_\_\_\_ ones

7)   
 \_\_\_\_\_ hundreds = \_\_\_\_\_ tens = \_\_\_\_\_ ones


8)   
 \_\_\_\_\_ hundreds = \_\_\_\_\_ tens = \_\_\_\_\_ ones


Answers

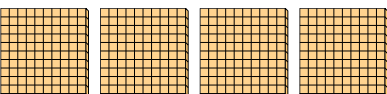
|     |          |           |            |
|-----|----------|-----------|------------|
| Ex. | <u>7</u> | <u>70</u> | <u>700</u> |
| 1.  | _____    | _____     | _____      |
| 2.  | _____    | _____     | _____      |
| 3.  | _____    | _____     | _____      |
| 4.  | _____    | _____     | _____      |
| 5.  | _____    | _____     | _____      |
| 6.  | _____    | _____     | _____      |
| 7.  | _____    | _____     | _____      |
| 8.  | _____    | _____     | _____      |

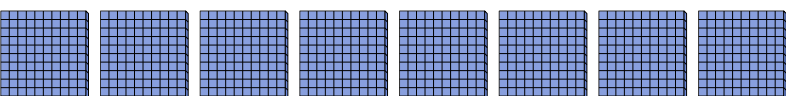


Use the blocks to determine the total quantities.

Ex)    
7 hundreds = 70 tens = 700 ones

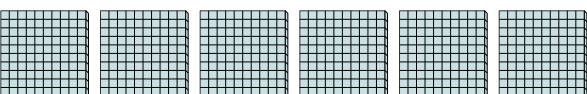
1)    
9 hundreds = 90 tens = 900 ones


2)    
4 hundreds = 40 tens = 400 ones


3)    
8 hundreds = 80 tens = 800 ones

4)    
1 hundreds = 10 tens = 100 ones

5)    
2 hundreds = 20 tens = 200 ones

6)    
6 hundreds = 60 tens = 600 ones

7)    
3 hundreds = 30 tens = 300 ones

8)    
5 hundreds = 50 tens = 500 ones

Answers

|     |          |           |            |
|-----|----------|-----------|------------|
| Ex. | <u>7</u> | <u>70</u> | <u>700</u> |
| 1.  | <u>9</u> | <u>90</u> | <u>900</u> |
| 2.  | <u>4</u> | <u>40</u> | <u>400</u> |
| 3.  | <u>8</u> | <u>80</u> | <u>800</u> |
| 4.  | <u>1</u> | <u>10</u> | <u>100</u> |
| 5.  | <u>2</u> | <u>20</u> | <u>200</u> |
| 6.  | <u>6</u> | <u>60</u> | <u>600</u> |
| 7.  | <u>3</u> | <u>30</u> | <u>300</u> |
| 8.  | <u>5</u> | <u>50</u> | <u>500</u> |