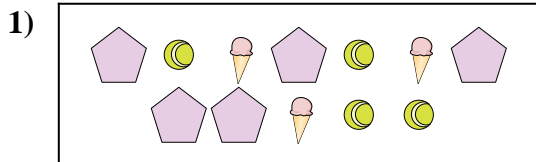





Compare the number of shapes.



Are there less or less ?

A.

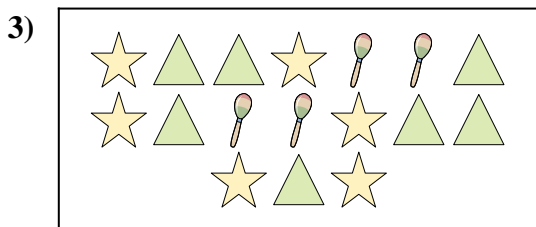
B.



Are there more or more ?

A.


B.



Are there less or less ?

A.


B.



Are there less or less ?

A.

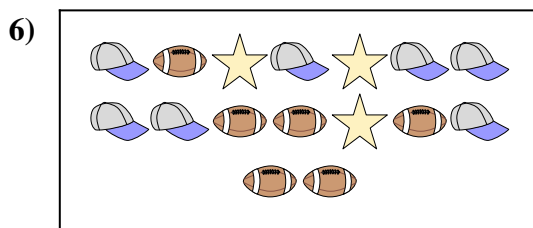
B.



Are there less or less ?

A.

B.



Are there less or less ?

A.

B.

Answers

1. _____

2. _____

3. _____

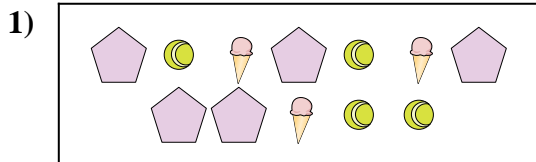
4. _____

5. _____


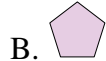
6. _____



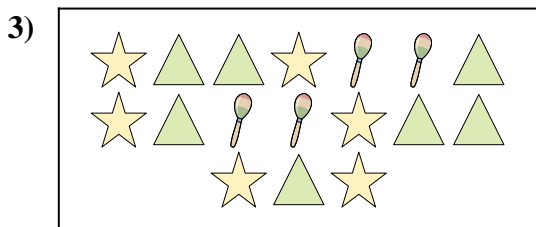
Compare the number of shapes.




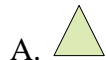
Are there less or less ?




Are there more or more ?



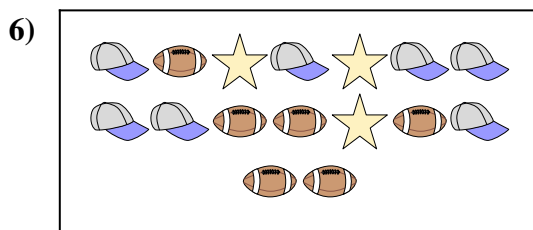
Are there less or less ?



Are there less or less ?



Are there less or less ?



Are there less or less ?



Answers

1. **A**

2. **A**

3. **B**

4. **B**

5. **A**

6. **B**