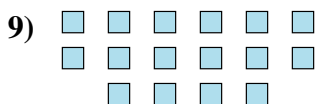
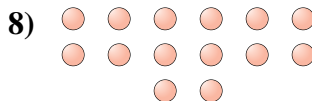
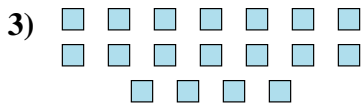

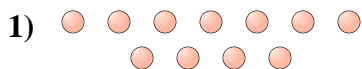




Determine if the number of shapes is even or odd.



Answers

1. _____

2. _____

3. _____

4. _____

5. _____

6. _____

7. _____

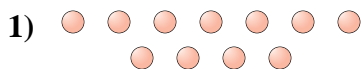
8. _____

9. _____

10. _____




Determine if the number of shapes is even or odd.



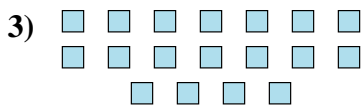
1)

11



2)

13



3)

18



4)

18



5)

19



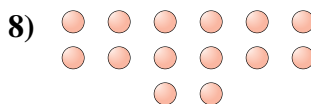
6)

17



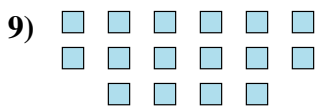
7)

6



8)

14



9)

16



10)

9

Answers

1. odd

2. odd

3. even

4. even

5. odd

6. odd

7. even

8. even

9. even

10. odd