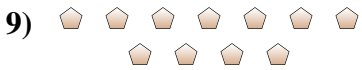
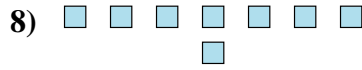
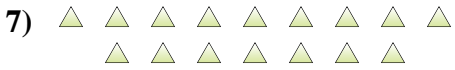
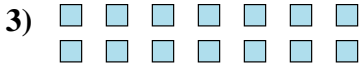
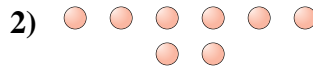
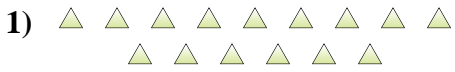




Determine if the number of shapes is even or odd.



Answers

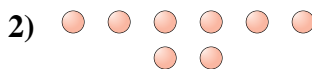
- 1. \_\_\_\_\_
- 2. \_\_\_\_\_
- 3. \_\_\_\_\_
- 4. \_\_\_\_\_
- 5. \_\_\_\_\_
- 6. \_\_\_\_\_
- 7. \_\_\_\_\_
- 8. \_\_\_\_\_
- 9. \_\_\_\_\_
- 10. \_\_\_\_\_



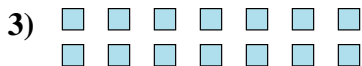
Determine if the number of shapes is even or odd.



15



8



14



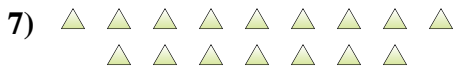
10



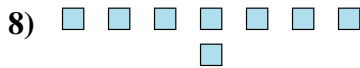
12



8



16



8



11



7

Answers

1. odd

2. even

3. even

4. even

5. even

6. even

7. even

8. even

9. odd

10. odd