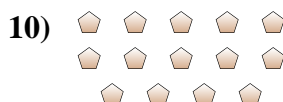
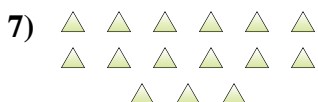
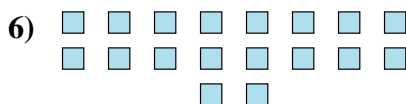

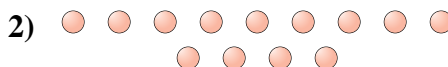




Determine if the number of shapes is even or odd.



Answers

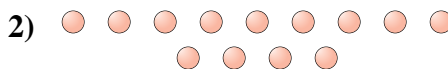
1. _____
2. _____
3. _____
4. _____
5. _____
6. _____
7. _____
8. _____
9. _____
10. _____




Determine if the number of shapes is even or odd.



9



13



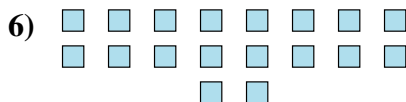
19



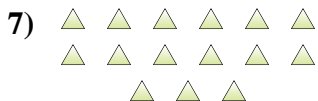
15



17



18



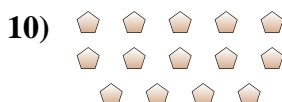
15



5



10



14

Answers

1. odd

2. odd

3. odd

4. odd

5. odd

6. even

7. odd

8. odd

9. even

10. even