



Use $<$, $>$, or $=$ to compare the numbers.

Answers

- 1) 21 ___ 26
- 2) 28 ___ 89
- 3) 62 ___ 37
- 4) 38 ___ 95
- 5) 59 ___ 61
- 6) 69 ___ 26
- 7) 85 ___ 58
- 8) 39 ___ 93
- 9) 58 ___ 85
- 10) 54 ___ 45
- 11) 12 ___ 21
- 12) 85 ___ 58
- 13) 48 ___ 84
- 14) 97 ___ 79
- 15) 38 ___ 35
- 16) 76 ___ 75
- 17) 59 ___ 61
- 18) 36 ___ 33
- 19) 99 ___ 98
- 20) 17 ___ 14

- 1. _____
- 2. _____
- 3. _____
- 4. _____
- 5. _____
- 6. _____
- 7. _____
- 8. _____
- 9. _____
- 10. _____
- 11. _____
- 12. _____
- 13. _____
- 14. _____
- 15. _____
- 16. _____
- 17. _____
- 18. _____
- 19. _____
- 20. _____

Use $<$, $>$, or $=$ to compare the numbers.

1) $21 < 26$

2) $28 < 89$

3) $62 > 37$

4) $38 < 95$

5) $59 < 61$

6) $69 > 26$

7) $85 > 58$

8) $39 < 93$

9) $58 < 85$

10) $54 > 45$

11) $12 < 21$

12) $85 > 58$

13) $48 < 84$

14) $97 > 79$

15) $38 > 35$

16) $76 > 75$

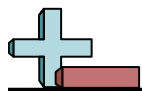
17) $59 < 61$

18) $36 > 33$

19) $99 > 98$

20) $17 > 14$

Answers1. $<$ 2. $<$ 3. $>$ 4. $<$ 5. $<$ 6. $>$ 7. $>$ 8. $<$ 9. $<$ 10. $>$ 11. $<$ 12. $>$ 13. $<$ 14. $>$ 15. $>$ 16. $>$ 17. $<$ 18. $>$ 19. $>$ 20. $>$




Use < , > , or = to compare the numbers.

Answers

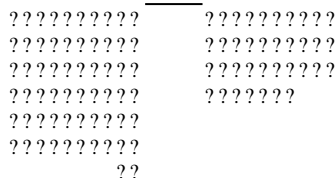
1) 21 26




2) 28 89




3) 62 37



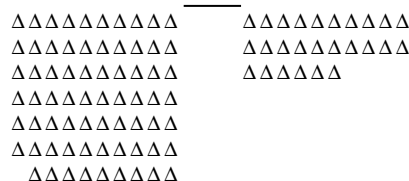
4) 38 95



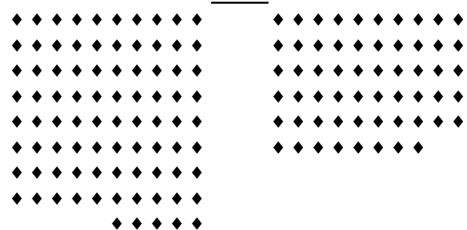
5) 59 61



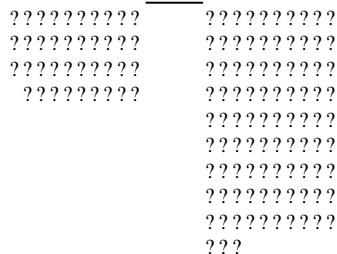
6) 69 26




7) 85 58




8) 39 93



9) 58 85



10) 54 45



- 1. _____
- 2. _____
- 3. _____
- 4. _____
- 5. _____
- 6. _____
- 7. _____
- 8. _____
- 9. _____
- 10. _____