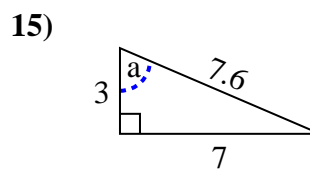
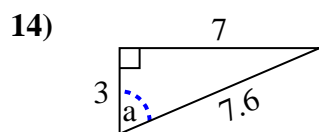
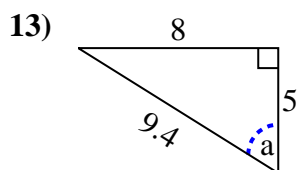
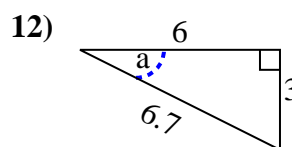
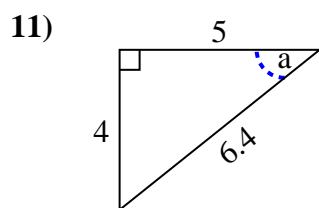
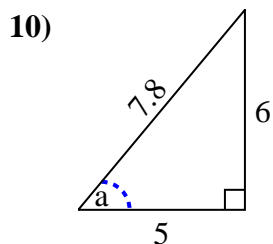
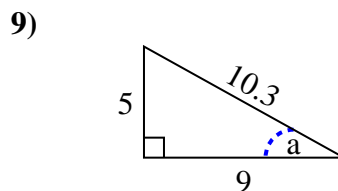
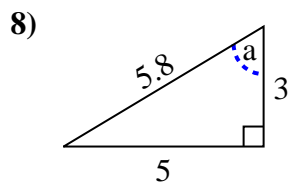
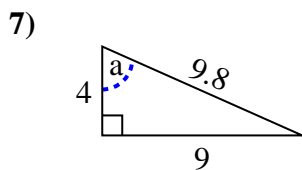
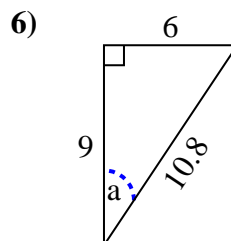
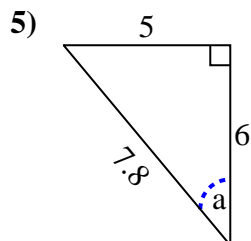
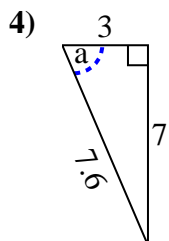
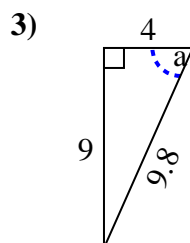
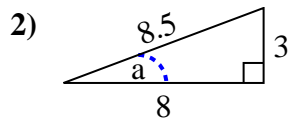
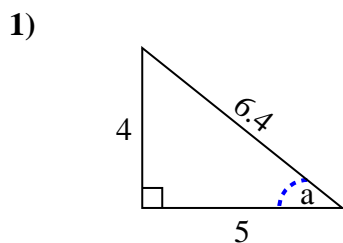


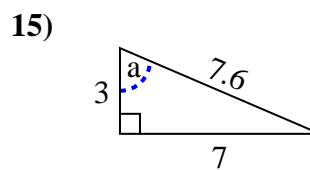
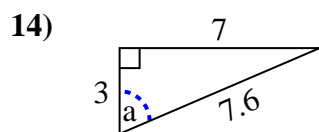
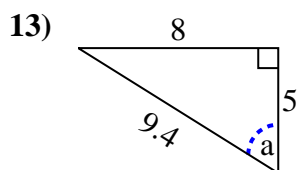
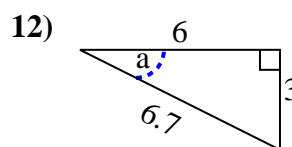
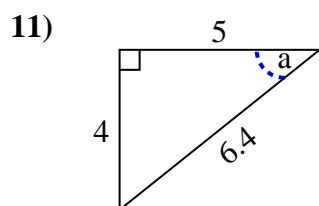
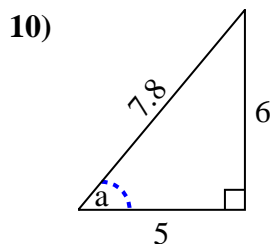
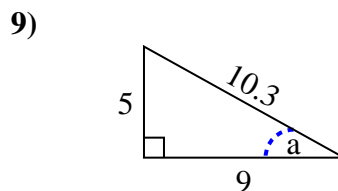
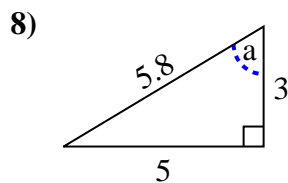
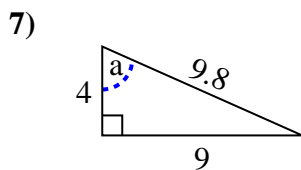
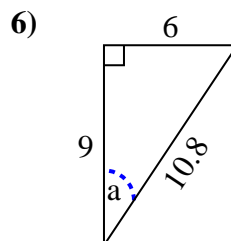
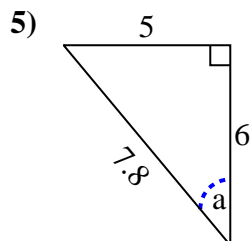
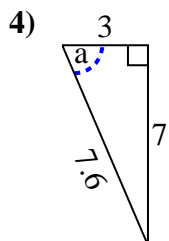
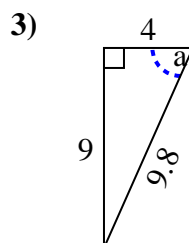
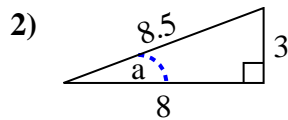
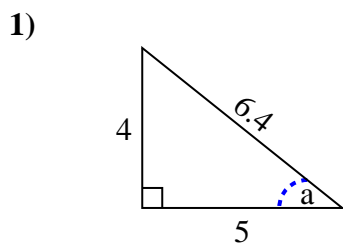


Identify the Opposite, Adjacent and Hypotenuse of Angle a.

Answers



1. _____
2. _____
3. _____
4. _____
5. _____
6. _____
7. _____
8. _____
9. _____
10. _____
11. _____
12. _____
13. _____
14. _____
15. _____

Identify the Opposite, Adjacent and Hypotenuse of Angle a .Answers1. 4, 5, 6.42. 3, 8, 8.53. 9, 4, 9.84. 7, 3, 7.65. 5, 6, 7.86. 6, 9, 10.87. 9, 4, 9.88. 5, 3, 5.89. 5, 9, 10.310. 6, 5, 7.811. 4, 5, 6.412. 3, 6, 6.713. 8, 5, 9.414. 7, 3, 7.615. 7, 3, 7.6