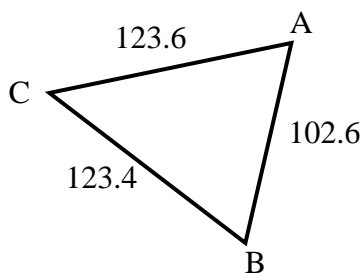




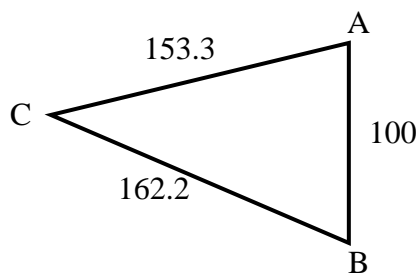
Find the length of the side listed.

Answers

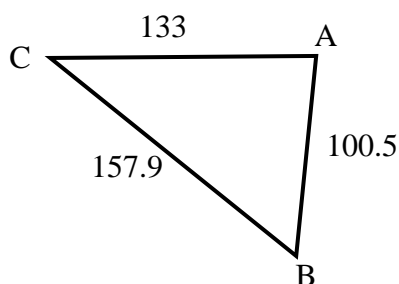
- 1) Find the length of side C.



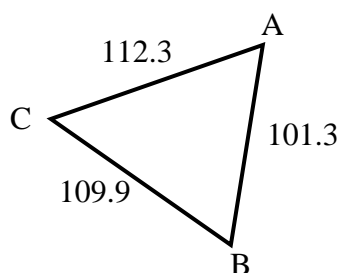
- 2) Find the length of side C.



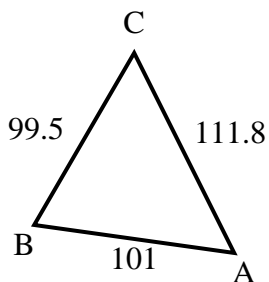
- 3) Find the length of side A.



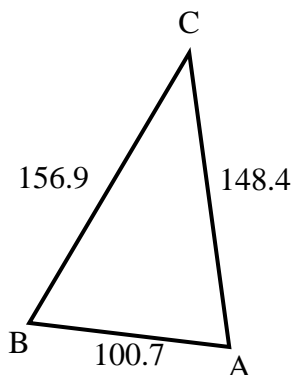
- 4) Find the length of side B.



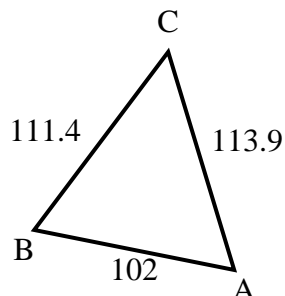
- 5) Find the length of side A.



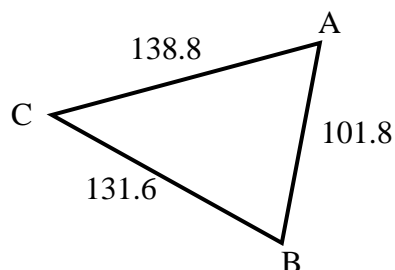
- 6) Find the length of side A.



- 7) Find the length of side A.



- 8) Find the length of side B.

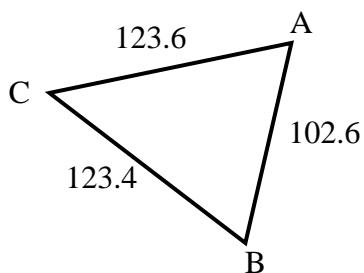


1. _____
2. _____
3. _____
4. _____
5. _____
6. _____
7. _____
8. _____

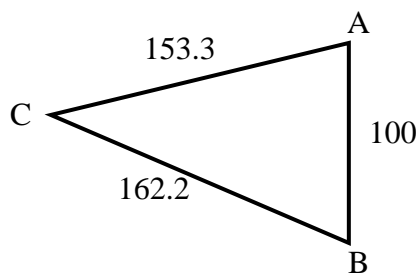


Find the length of the side listed.

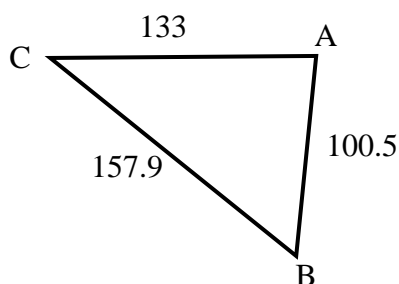
- 1) Find the length of side C.



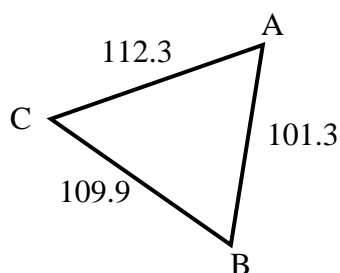
- 2) Find the length of side C.



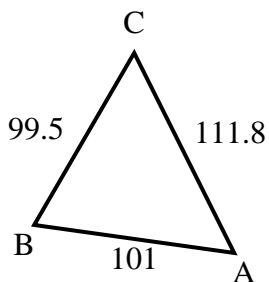
- 3) Find the length of side A.



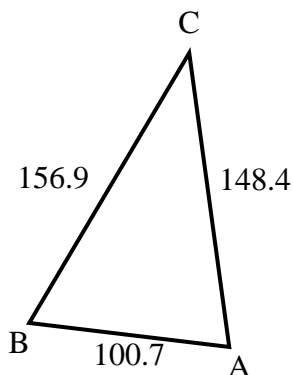
- 4) Find the length of side B.



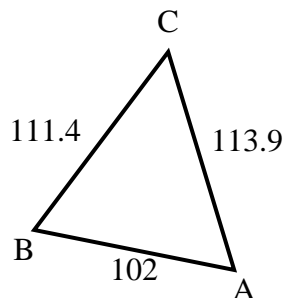
- 5) Find the length of side A.



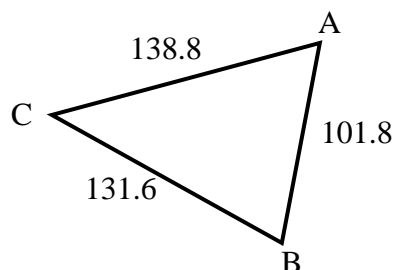
- 6) Find the length of side A.



- 7) Find the length of side A.



- 8) Find the length of side B.

**Answers**

1. **102.6**
2. **100**
3. **157.9**
4. **112.3**
5. **99.5**
6. **156.9**
7. **111.4**
8. **138.8**