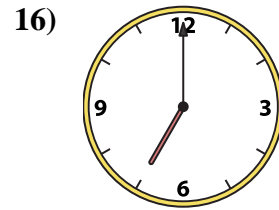
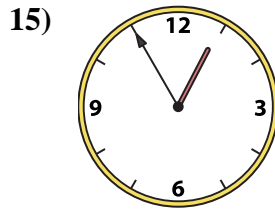
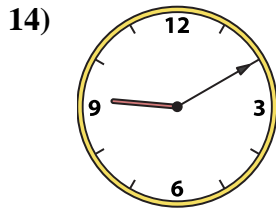
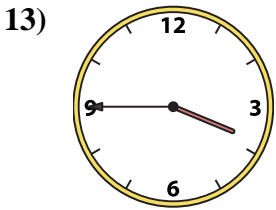
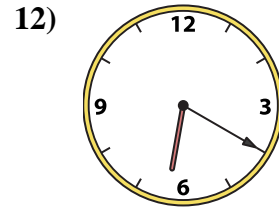
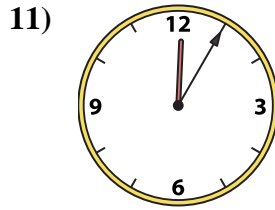
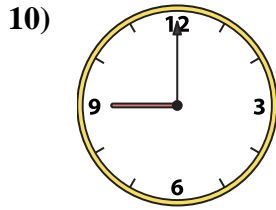
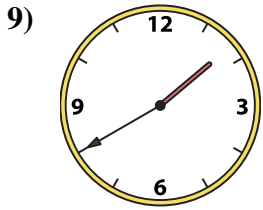
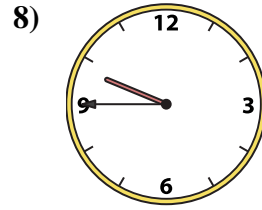
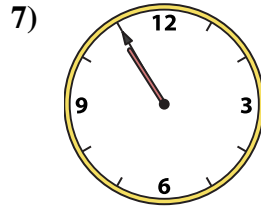
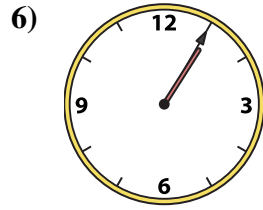
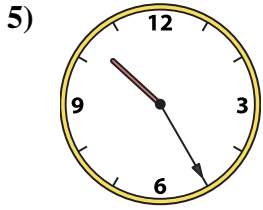
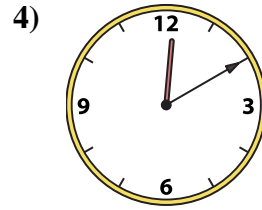
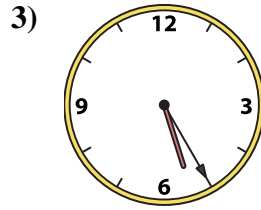
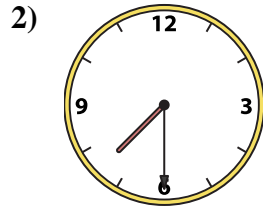
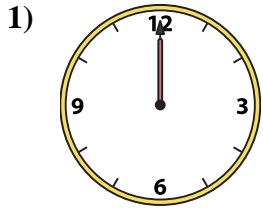




Match the analog clock to the digital clock.



Answers

1. _____
2. _____
3. _____
4. _____
5. _____
6. _____
7. _____
8. _____
9. _____
10. _____
11. _____
12. _____
13. _____
14. _____
15. _____
16. _____

A. 10:55

B. 3:45

C. 7:30

D. 6:20

E. 12:05

F. 12:55

G. 9:45

H. 12:00

I. 10:25

J. 7:00

K. 1:05

L. 9:10

M. 1:40

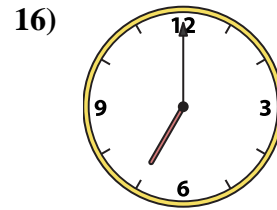
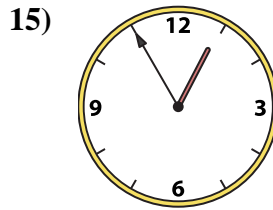
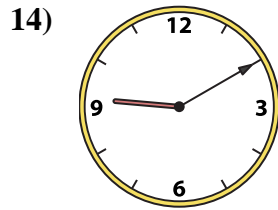
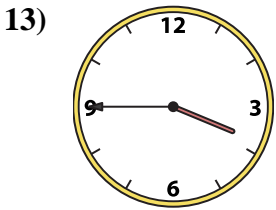
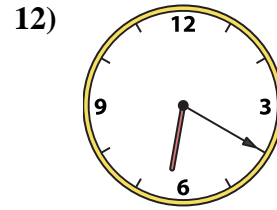
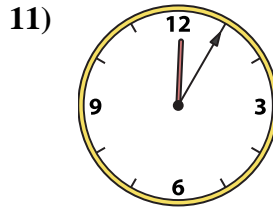
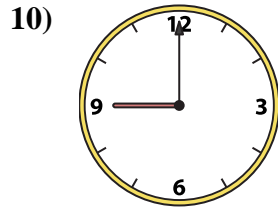
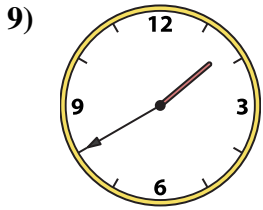
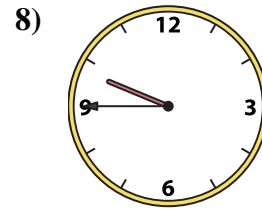
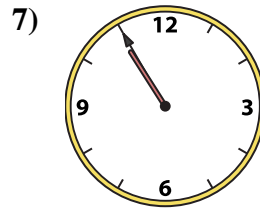
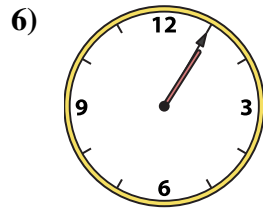
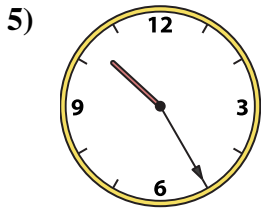
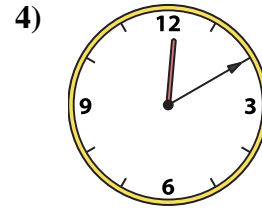
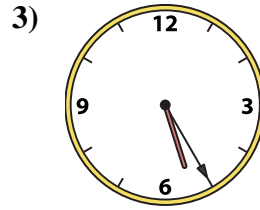
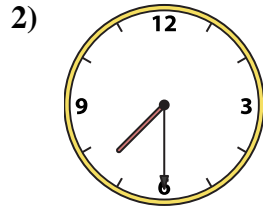
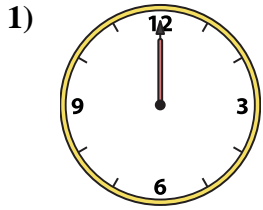
N. 9:00

O. 5:25

P. 12:10



Match the analog clock to the digital clock.



A. 10:55

B. 3:45

C. 7:30

D. 6:20

E. 12:05

F. 12:55

G. 9:45

H. 12:00

I. 10:25

J. 7:00

K. 1:05

L. 9:10

M. 1:40

N. 9:00

O. 5:25

P. 12:10

Answers

- 1. **H**
- 2. **C**
- 3. **O**
- 4. **P**
- 5. **I**
- 6. **K**
- 7. **A**
- 8. **G**
- 9. **M**
- 10. **N**
- 11. **E**
- 12. **D**
- 13. **B**
- 14. **L**
- 15. **F**
- 16. **J**