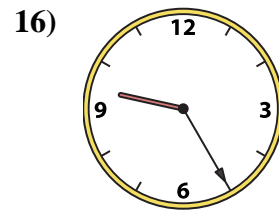
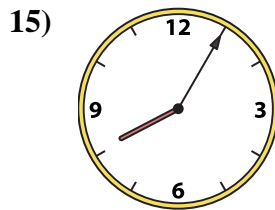
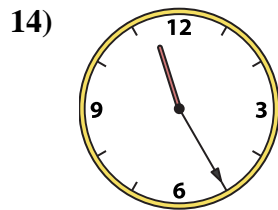
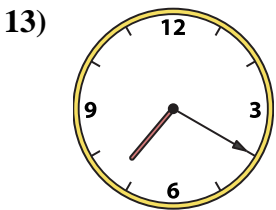
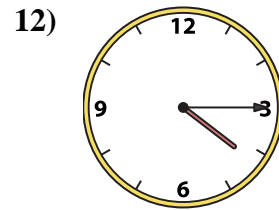
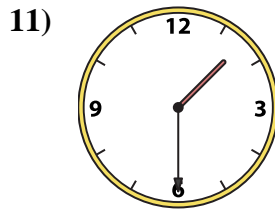
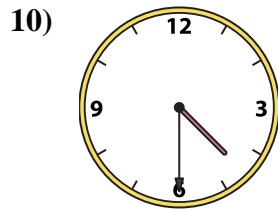
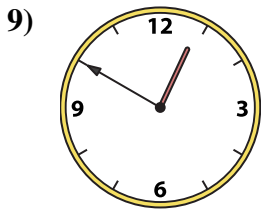
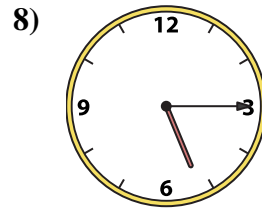
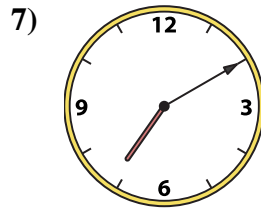
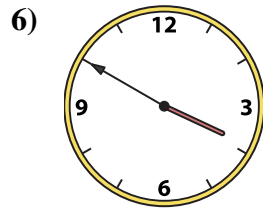
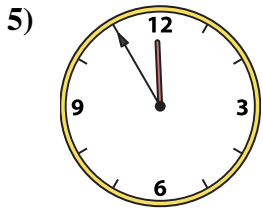
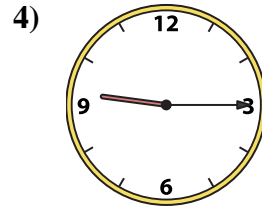
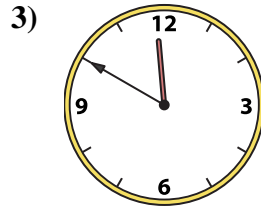
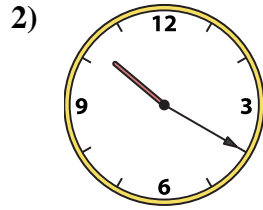
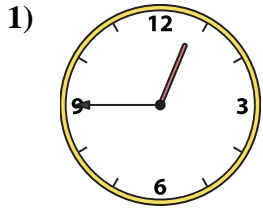




Match the analog clock to the digital clock.



A. 11:55

B. 9:25

C. 11:50

D. 3:50

E. 12:45

F. 1:30

G. 11:25

H. 7:10

I. 4:30

J. 5:15

K. 7:20

L. 10:20

M. 9:15

N. 12:50

O. 4:15

P. 8:05

Answers

1. _____

2. _____

3. _____

4. _____

5. _____

6. _____

7. _____

8. _____

9. _____

10. _____

11. _____

12. _____

13. _____

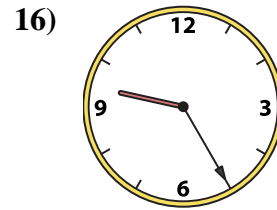
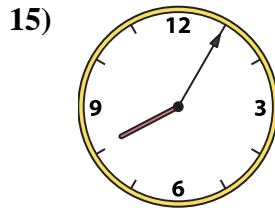
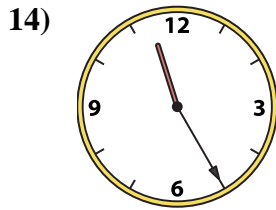
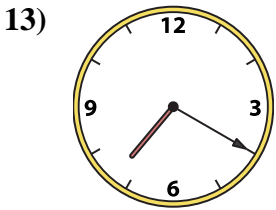
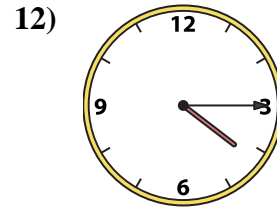
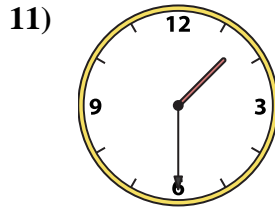
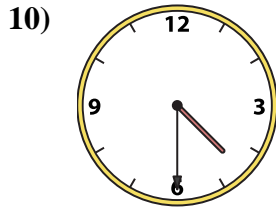
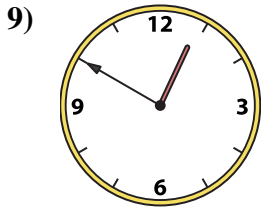
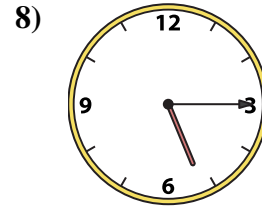
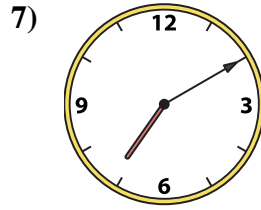
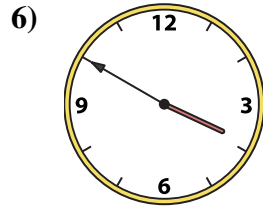
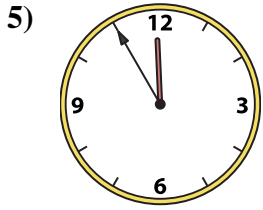
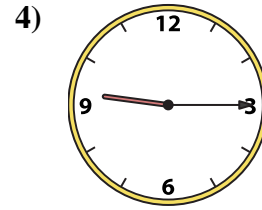
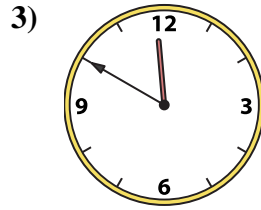
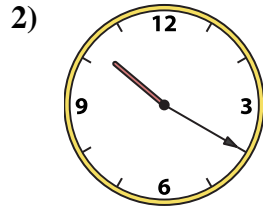
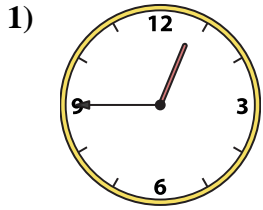
14. _____

15. _____

16. _____



Match the analog clock to the digital clock.



A. **11:55**

B. **9:25**

C. **11:50**

D. **3:50**

E. **12:45**

F. **1:30**

G. **11:25**

H. **7:10**

I. **4:30**

J. **5:15**

K. **7:20**

L. **10:20**

M. **9:15**

N. **12:50**

O. **4:15**

P. **8:05**

Answers

1. **E**

2. **L**

3. **C**

4. **M**

5. **A**

6. **D**

7. **H**

8. **J**

9. **N**

10. **I**

11. **F**

12. **O**

13. **K**

14. **G**

15. **P**

16. **B**