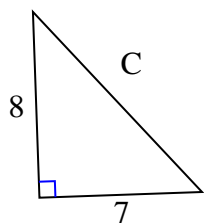




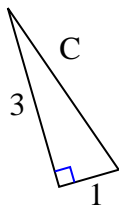
Find the value of 'C' round your answer to the nearest hundredth.

Answers

1)



2)



3)



1. _____

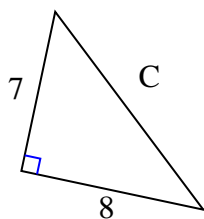
2. _____

3. _____

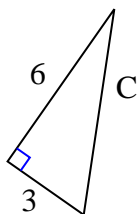
4. _____

5. _____

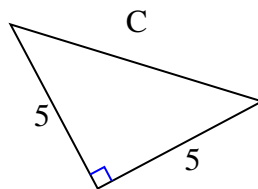
4)



5)



6)



6. _____

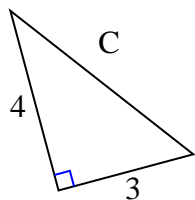
7. _____

8. _____

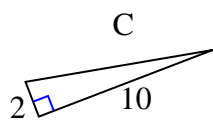
9. _____

10. _____

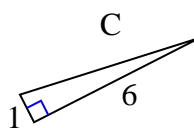
7)



8)



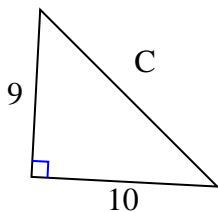
9)



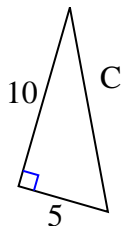
11. _____

12. _____

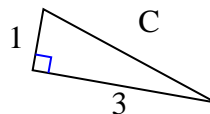
10)



11)



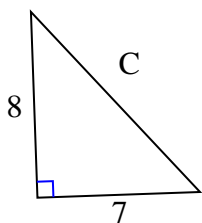
12)





Find the value of 'C' round your answer to the nearest hundredth.

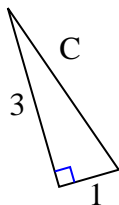
1)



$$64 + 49 = 113$$

$$\sqrt{113} = 10.63$$

2)



$$9 + 1 = 10$$

$$\sqrt{10} = 3.16$$

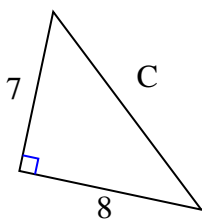
3)



$$49 + 4 = 53$$

$$\sqrt{53} = 7.28$$

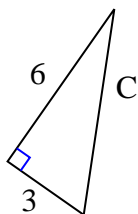
4)



$$49 + 64 = 113$$

$$\sqrt{113} = 10.63$$

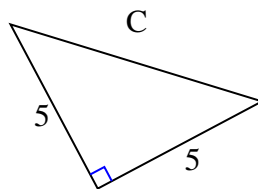
5)



$$36 + 9 = 45$$

$$\sqrt{45} = 6.71$$

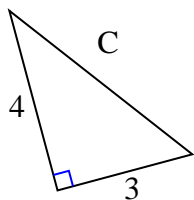
6)



$$25 + 25 = 50$$

$$\sqrt{50} = 7.07$$

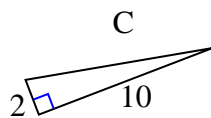
7)



$$16 + 9 = 25$$

$$\sqrt{25} = 5$$

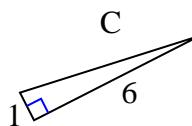
8)



$$4 + 100 = 104$$

$$\sqrt{104} = 10.2$$

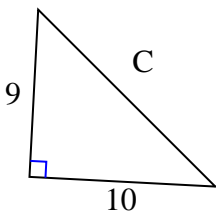
9)



$$1 + 36 = 37$$

$$\sqrt{37} = 6.08$$

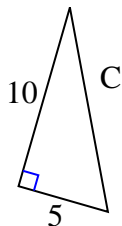
10)



$$81 + 100 = 181$$

$$\sqrt{181} = 13.45$$

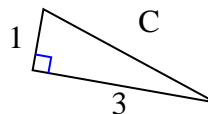
11)



$$100 + 25 = 125$$

$$\sqrt{125} = 11.18$$

12)



$$1 + 9 = 10$$

$$\sqrt{10} = 3.16$$

Answers1. 10.632. 3.163. 7.284. 10.635. 6.716. 7.077. 58. 10.29. 6.0810. 13.4511. 11.1812. 3.16