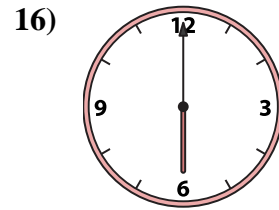
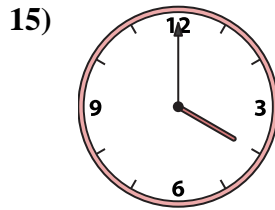
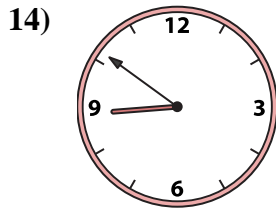
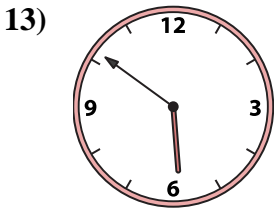
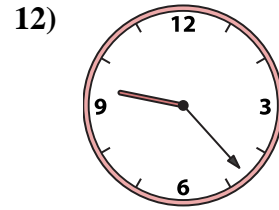
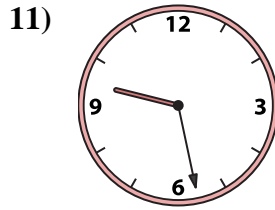
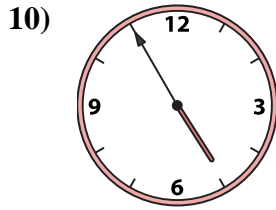
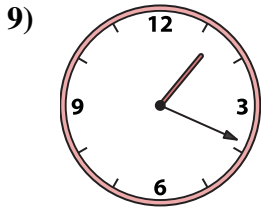
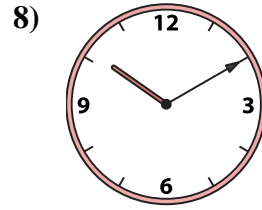
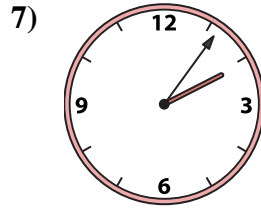
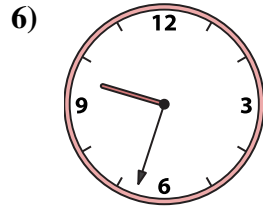
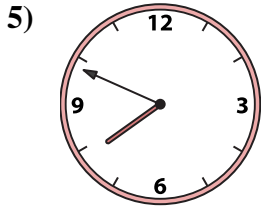
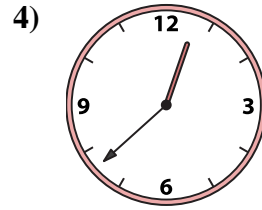
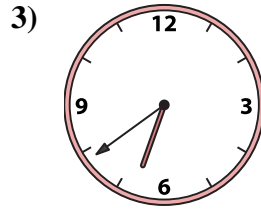
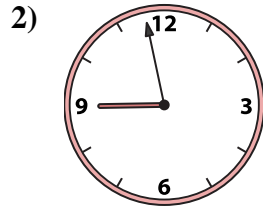
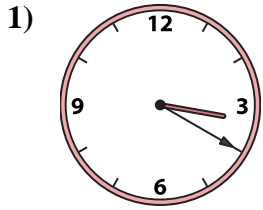




Match the analog clock to the digital clock.



A. 10:10

B. 4:55

C. 6:00

D. 12:38

E. 9:28

F. 4:00

G. 3:20

H. 9:23

I. 2:06

J. 6:39

K. 9:33

L. 1:19

M. 7:49

N. 8:58

O. 5:51

P. 8:51

Answers

1. _____

2. _____

3. _____

4. _____

5. _____

6. _____

7. _____

8. _____

9. _____

10. _____

11. _____

12. _____

13. _____

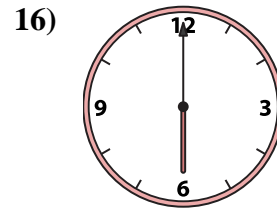
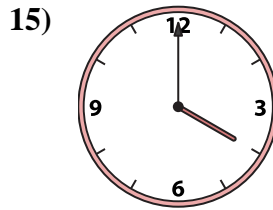
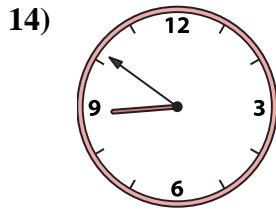
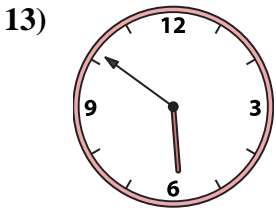
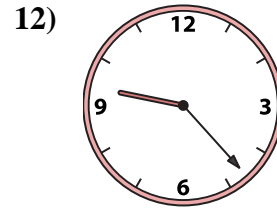
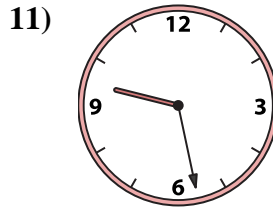
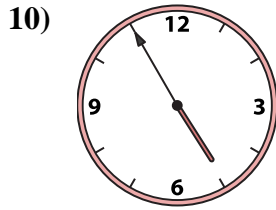
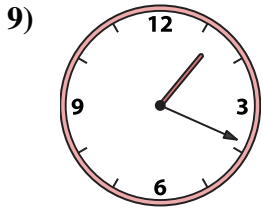
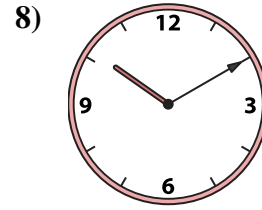

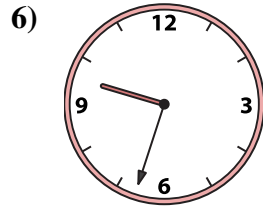
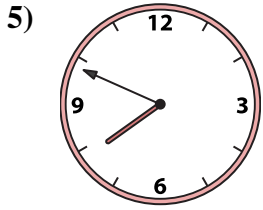
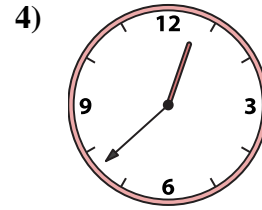
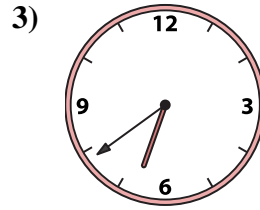
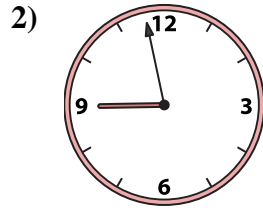
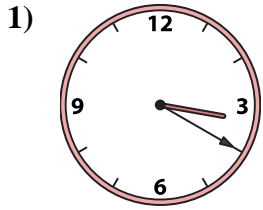
14. _____

15. _____

16. _____



Match the analog clock to the digital clock.



A. 10:10

B. 4:55

C. 6:00

D. 12:38

E. 9:28

F. 4:00

G. 3:20

H. 9:23

I. 2:06

J. 6:39

K. 9:33

L. 1:19

M. 7:49

N. 8:58

O. 5:51

P. 8:51

Answers

1. **G**

2. **N**

3. **J**

4. **D**

5. **M**

6. **K**

7. **I**

8. **A**

9. **L**

10. **B**

11. **E**

12. **H**

13. **O**

14. **P**

15. **F**

16. **C**