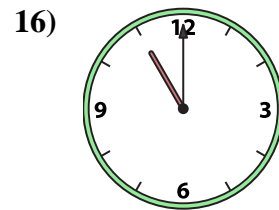
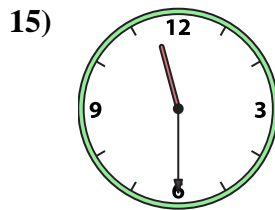
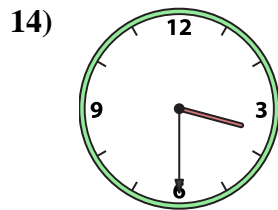
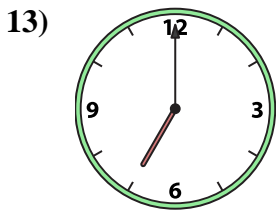
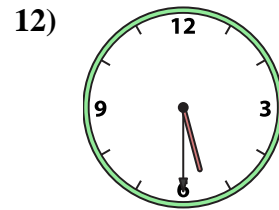
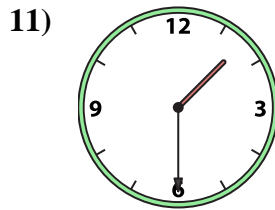
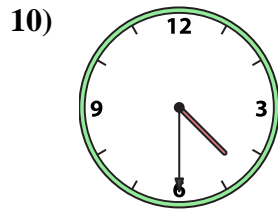

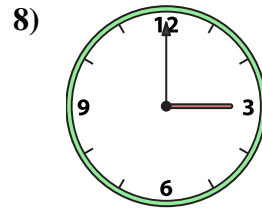
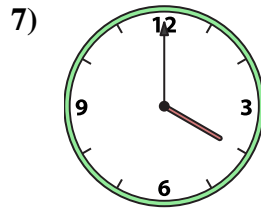
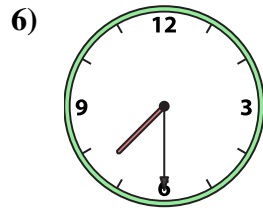
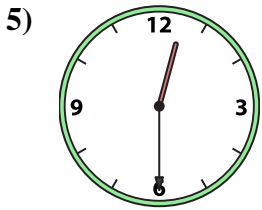
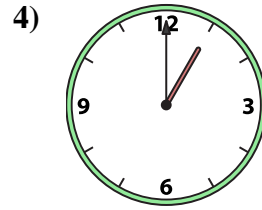
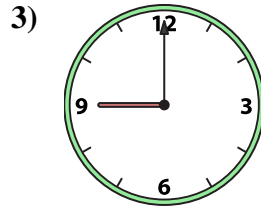
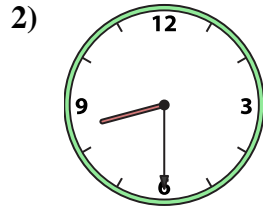
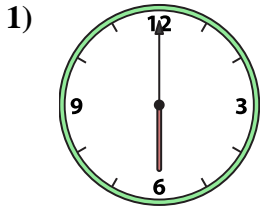




Match the analog clock to the digital clock.



A. 1:00

B. 3:00

C. 11:30

D. 3:30

E. 4:30

F. 11:00

G. 10:00

H. 7:00

I. 7:30

J. 1:30

K. 4:00

L. 9:00

M. 6:00

N. 8:30

O. 5:30

P. 12:30

Answers

1. _____
2. _____
3. _____
4. _____
5. _____
6. _____
7. _____
8. _____
9. _____
10. _____
11. _____
12. _____
13. _____
14. _____
15. _____
16. _____



Match the analog clock to the digital clock.

1)

2)

3)

4)

5)

6)

7)

8)

9)

10)

11)

12)

13)

14)

15)

16)

A.

B.

C.

D.

E.

F.

G.

H.

I.

J.

K.

L.

M.

N.

O.

P.

Answers

1. **M**
2. **N**
3. **L**
4. **A**
5. **P**
6. **I**
7. **K**
8. **B**
9. **G**
10. **E**
11. **J**
12. **O**
13. **H**
14. **D**
15. **C**
16. **F**