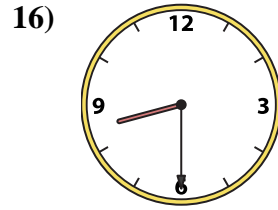
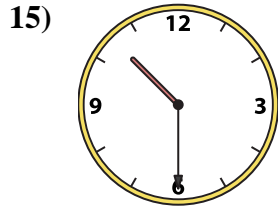
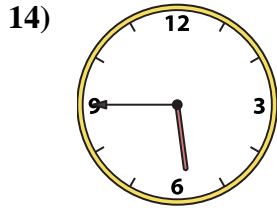
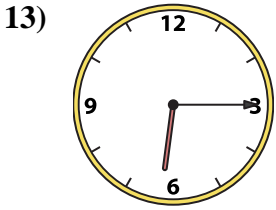
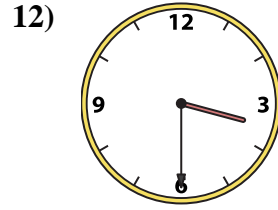
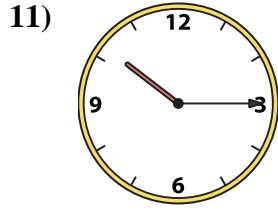
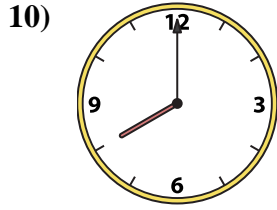
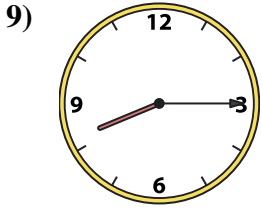
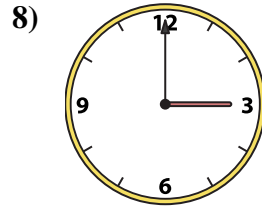

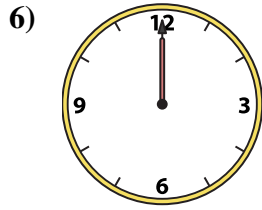
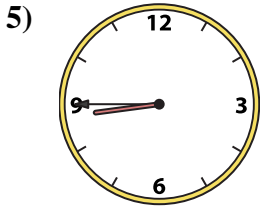
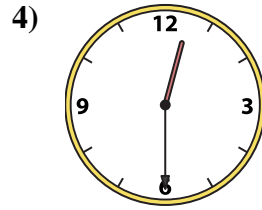
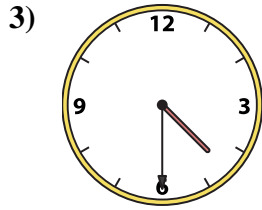
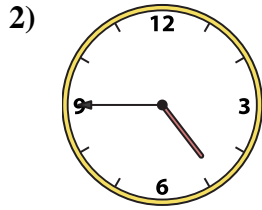
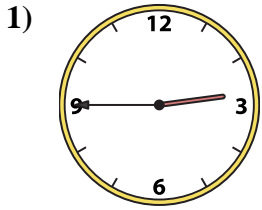




Match the analog clock to the digital clock.

Answers



1. _____
2. _____
3. _____
4. _____
5. _____
6. _____
7. _____
8. _____
9. _____
10. _____
11. _____
12. _____
13. _____
14. _____
15. _____
16. _____

A. 4:45

B. 5:45

C. 8:00

D. 8:15

E. 3:00

F. 12:30

G. 10:15

H. 6:15

I. 3:30

J. 4:30

K. 2:45

L. 12:15

M. 12:00

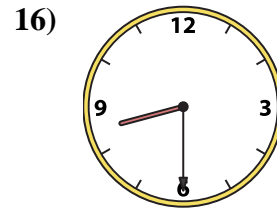
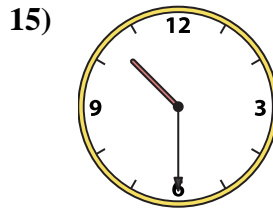
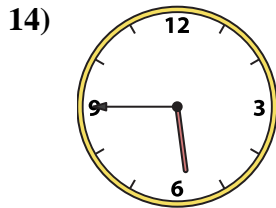
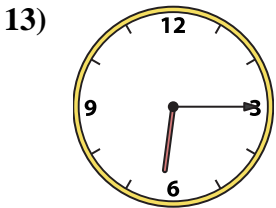
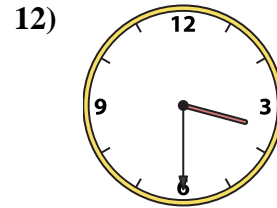
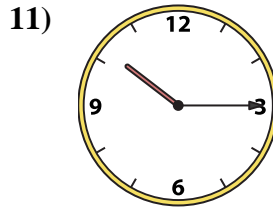
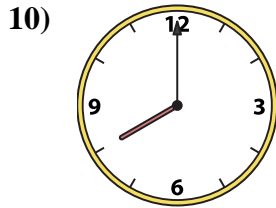
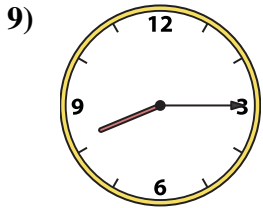
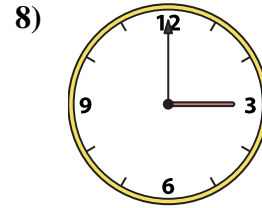
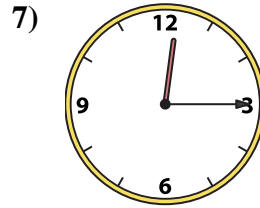
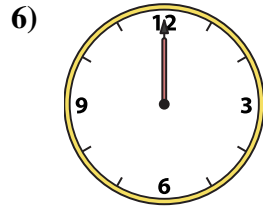
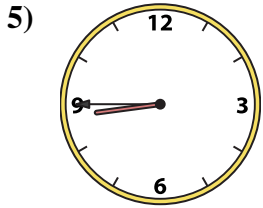
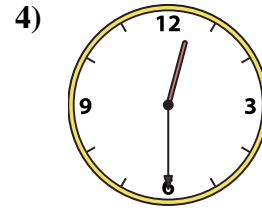
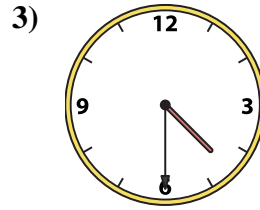
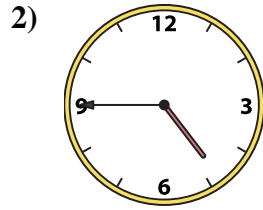
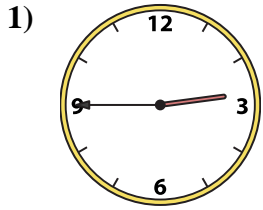
N. 10:30

O. 8:45

P. 8:30



Match the analog clock to the digital clock.



A. 4:45

B. 5:45

C. 8:00

D. 8:15

E. 3:00

F. 12:30

G. 10:15

H. 6:15

I. 3:30

J. 4:30

K. 2:45

L. 12:15

M. 12:00

N. 10:30

O. 8:45

P. 8:30

Answers

1. **K**

2. **A**

3. **J**

4. **F**

5. **O**

6. **M**

7. **L**

8. **E**

9. **D**

10. **C**

11. **G**

12. **I**

13. **H**

14. **B**

15. **N**

16. **P**