



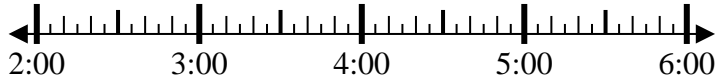
Solve each problem.

Answers

1) Start: \_\_\_\_\_

Elapsed: 1 hr & 45 mins

End: 3:45

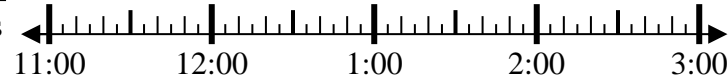


1. \_\_\_\_\_

2) Start: \_\_\_\_\_

Elapsed: 2 hrs & 45 mins

End: 2:20

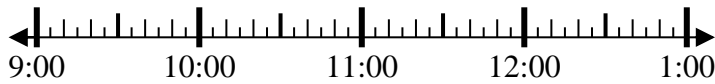


2. \_\_\_\_\_

3) Start: \_\_\_\_\_

Elapsed: 1 hr & 10 mins

End: 10:10



3. \_\_\_\_\_

4) Start: \_\_\_\_\_

Elapsed: 1 hr & 20 mins

End: 1:05



4. \_\_\_\_\_

5) Start: \_\_\_\_\_

Elapsed: 1 hr & 15 mins

End: 1:35



5. \_\_\_\_\_

6) Start: \_\_\_\_\_

Elapsed: 1 hr & 10 mins

End: 6:35

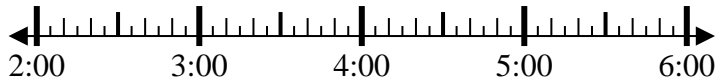


6. \_\_\_\_\_

7) Start: \_\_\_\_\_

Elapsed: 1 hr & 45 mins

End: 4:20

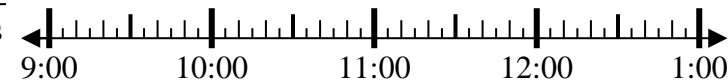


7. \_\_\_\_\_

8) Start: \_\_\_\_\_

Elapsed: 2 hrs & 45 mins

End: 12:20

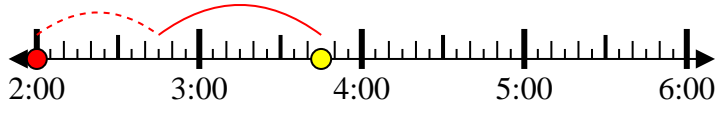


8. \_\_\_\_\_

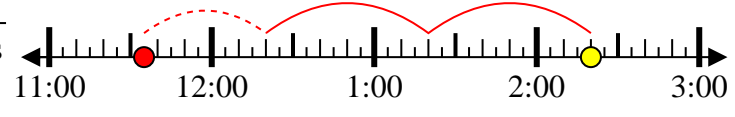


Solve each problem.

1) Start: 2:00  
 Elapsed: 1 hr & 45 mins  
 End: 3:45



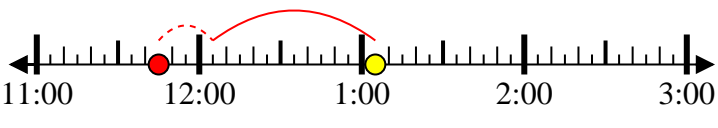
2) Start: 11:35  
 Elapsed: 2 hrs & 45 mins  
 End: 2:20



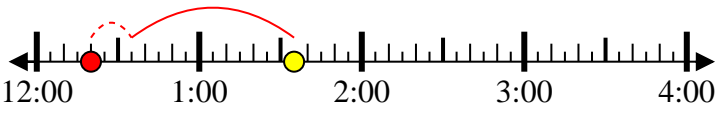
3) Start: 9:00  
 Elapsed: 1 hr & 10 mins  
 End: 10:10



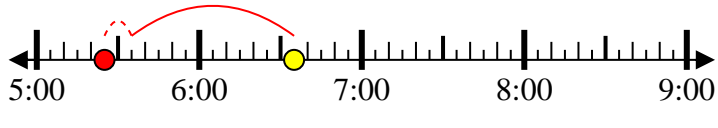
4) Start: 11:45  
 Elapsed: 1 hr & 20 mins  
 End: 1:05



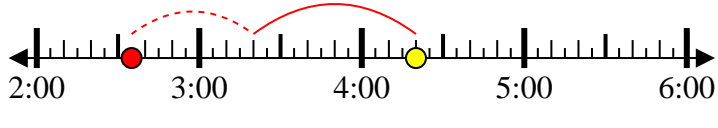
5) Start: 12:20  
 Elapsed: 1 hr & 15 mins  
 End: 1:35



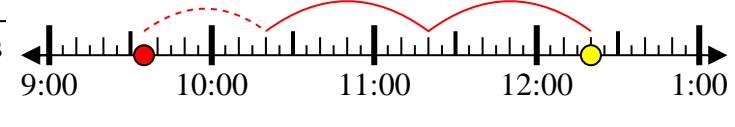
6) Start: 5:25  
 Elapsed: 1 hr & 10 mins  
 End: 6:35



7) Start: 2:35  
 Elapsed: 1 hr & 45 mins  
 End: 4:20



8) Start: 9:35  
 Elapsed: 2 hrs & 45 mins  
 End: 12:20



Answers

1. 2:00
2. 11:35
3. 9:00
4. 11:45
5. 12:20
6. 5:25
7. 2:35
8. 9:35