



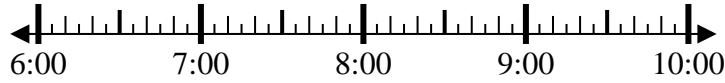
Solve each problem.

Answers

1) Start: 6:45

Elapsed: 1 hr & 10 mins

End: _____



1. _____

2) Start: 6:25

Elapsed: 2 hrs & 40 mins

End: _____



2. _____

3) Start: 1:10

Elapsed: 1 hr & 50 mins

End: _____

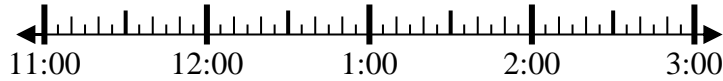


3. _____

4) Start: 11:15

Elapsed: 1 hr & 45 mins

End: _____

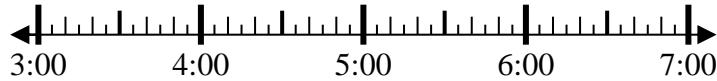


4. _____

5) Start: 3:25

Elapsed: 2 hrs & 10 mins

End: _____

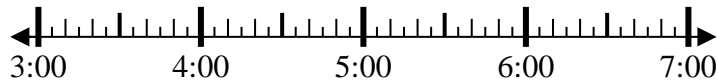


5. _____

6) Start: 3:20

Elapsed: 2 hrs & 35 mins

End: _____



6. _____

7) Start: 10:35

Elapsed: 1 hr & 50 mins

End: _____



7. _____

8) Start: 10:00

Elapsed: 1 hr & 30 mins

End: _____

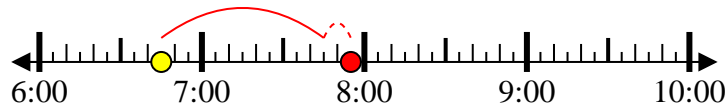


8. _____



Solve each problem.

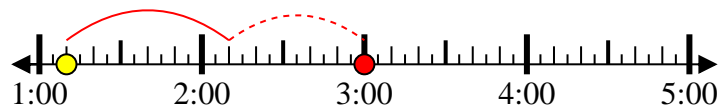
1) Start: 6:45
 Elapsed: 1 hr & 10 mins
 End: 7:55



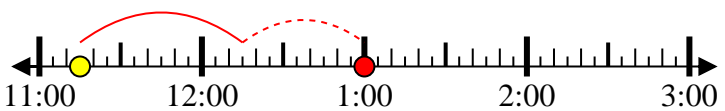
2) Start: 6:25
 Elapsed: 2 hrs & 40 mins
 End: 9:05



3) Start: 1:10
 Elapsed: 1 hr & 50 mins
 End: 3:00



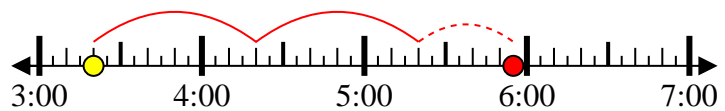
4) Start: 11:15
 Elapsed: 1 hr & 45 mins
 End: 1:00



5) Start: 3:25
 Elapsed: 2 hrs & 10 mins
 End: 5:35



6) Start: 3:20
 Elapsed: 2 hrs & 35 mins
 End: 5:55



7) Start: 10:35
 Elapsed: 1 hr & 50 mins
 End: 12:25



8) Start: 10:00
 Elapsed: 1 hr & 30 mins
 End: 11:30



Answers

1. 7:55
2. 9:05
3. 3:00
4. 1:00
5. 5:35
6. 5:55
7. 12:25
8. 11:30