



Draw the hour and minute hand on the clock so it represents the time shown.

1) 3:30



2) 5:45



3) 3:25



4) 7:10



5) 12:40



6) 4:35



7) 5:20



8) 12:50




9) 6:55



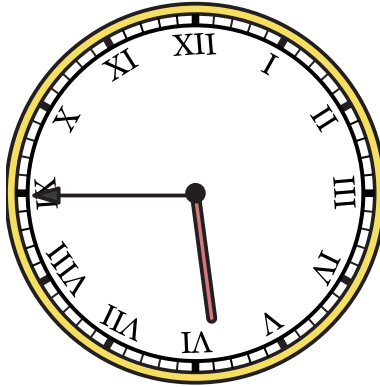


Draw the hour and minute hand on the clock so it represents the time shown.


1) 3:30



2) 5:45




3) 3:25



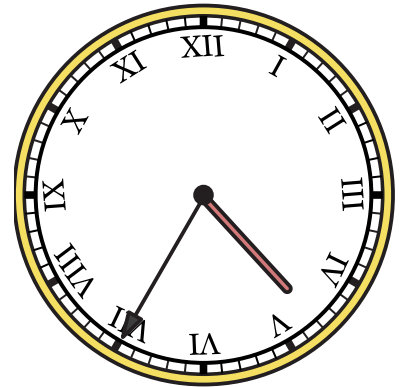
4) 7:10



5) 12:40



6) 4:35



7) 5:20



8) 12:50



9) 6:55

