

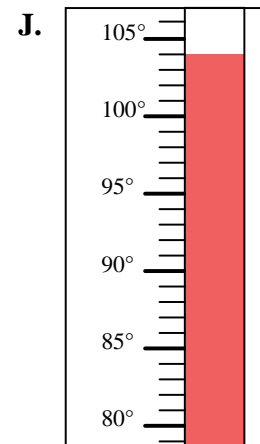
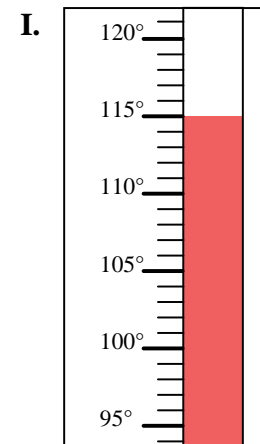
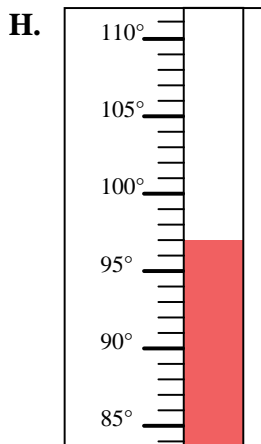
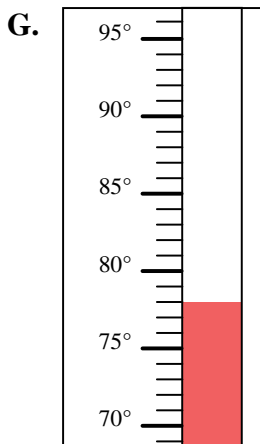
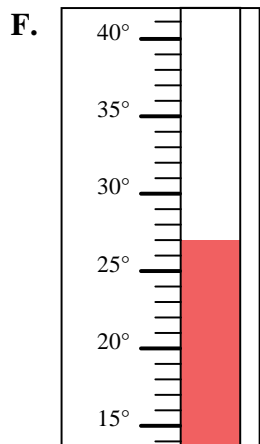
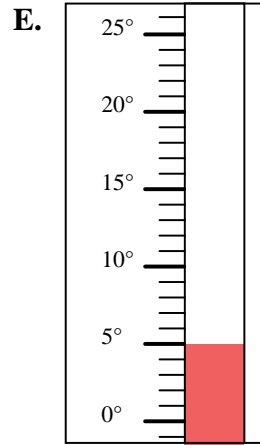
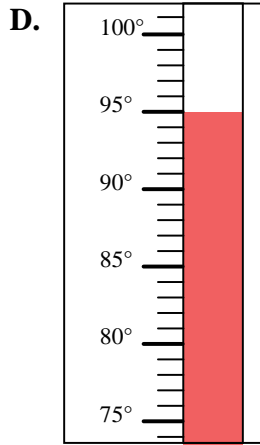
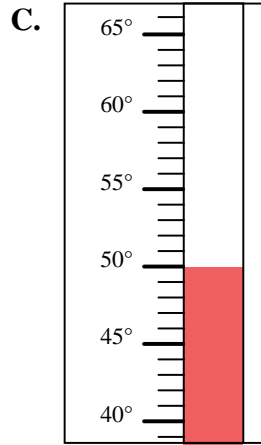
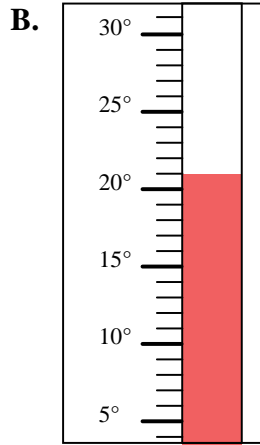
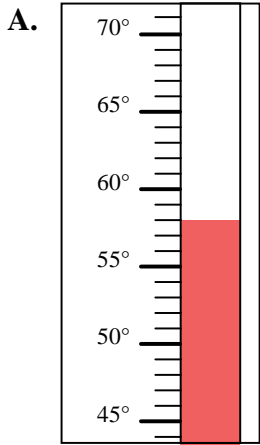


Determine which letter best answers each question.

Answers

- 1) Which thermometer best represents the temperature 115°?
- 2) Which thermometer best represents the temperature 50°?
- 3) Which thermometer best represents the temperature 95°?
- 4) Which thermometer best represents the temperature 5°?
- 5) Which thermometer best represents the temperature 104°?
- 6) Which thermometer best represents the temperature 58°?
- 7) Which thermometer best represents the temperature 21°?
- 8) Which thermometer best represents the temperature 78°?
- 9) Which thermometer best represents the temperature 97°?
- 10) Which thermometer best represents the temperature 27°?

1. _____
2. _____
3. _____
4. _____
5. _____
6. _____
7. _____
8. _____
9. _____
10. _____





Determine which letter best answers each question.

- 1) Which thermometer best represents the temperature 115°?
- 2) Which thermometer best represents the temperature 50°?
- 3) Which thermometer best represents the temperature 95°?
- 4) Which thermometer best represents the temperature 5°?
- 5) Which thermometer best represents the temperature 104°?
- 6) Which thermometer best represents the temperature 58°?
- 7) Which thermometer best represents the temperature 21°?
- 8) Which thermometer best represents the temperature 78°?
- 9) Which thermometer best represents the temperature 97°?
- 10) Which thermometer best represents the temperature 27°?

Answers

1. **I**
2. **C**
3. **D**
4. **E**
5. **J**
6. **A**
7. **B**
8. **G**
9. **H**
10. **F**

