

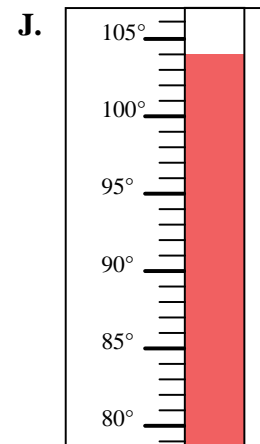
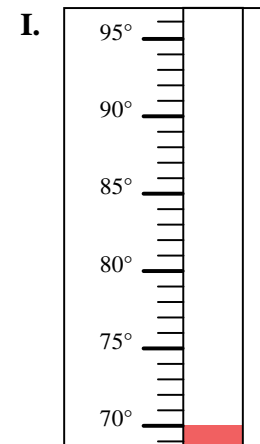
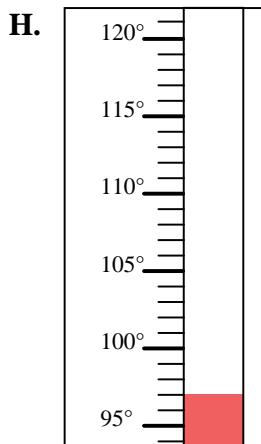
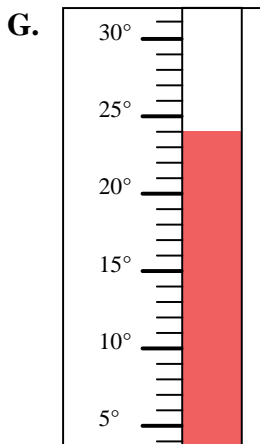
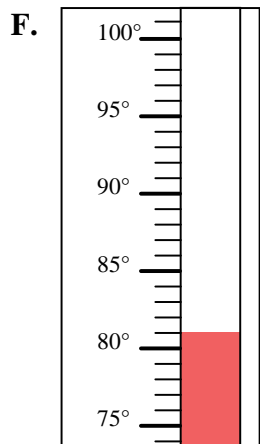
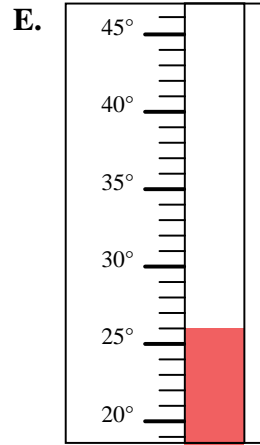
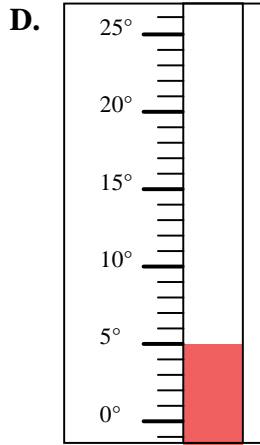
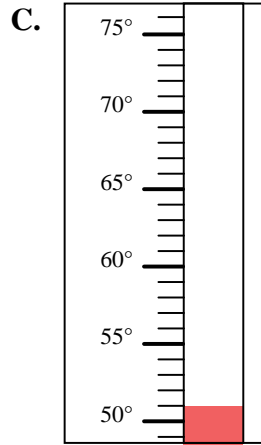
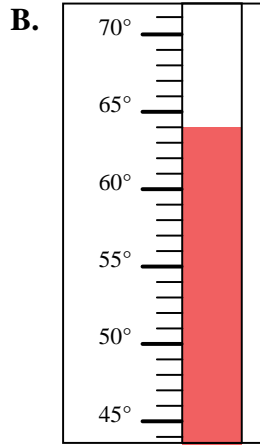
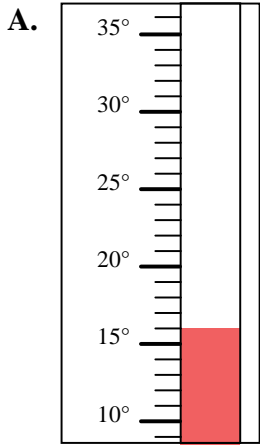


Determine which letter best answers each question.

Answers

- 1) Which thermometer best represents the temperature 70°?
- 2) Which thermometer best represents the temperature 51°?
- 3) Which thermometer best represents the temperature 64°?
- 4) Which thermometer best represents the temperature 26°?
- 5) Which thermometer best represents the temperature 104°?
- 6) Which thermometer best represents the temperature 97°?
- 7) Which thermometer best represents the temperature 5°?
- 8) Which thermometer best represents the temperature 81°?
- 9) Which thermometer best represents the temperature 16°?
- 10) Which thermometer best represents the temperature 24°?

1. _____
2. _____
3. _____
4. _____
5. _____
6. _____
7. _____
8. _____
9. _____
10. _____





Determine which letter best answers each question.

- 1) Which thermometer best represents the temperature 70°?
- 2) Which thermometer best represents the temperature 51°?
- 3) Which thermometer best represents the temperature 64°?
- 4) Which thermometer best represents the temperature 26°?
- 5) Which thermometer best represents the temperature 104°?
- 6) Which thermometer best represents the temperature 97°?
- 7) Which thermometer best represents the temperature 5°?
- 8) Which thermometer best represents the temperature 81°?
- 9) Which thermometer best represents the temperature 16°?
- 10) Which thermometer best represents the temperature 24°?

Answers

1. **I**
2. **C**
3. **B**
4. **E**
5. **J**
6. **H**
7. **D**
8. **F**
9. **A**
10. **G**

